

ARWCHIN WORLD SCHOOL  
Session :2026-27  
Class - 5th



**“Learning gives creativity, creativity leads to thinking, thinking provides knowledge, and knowledge makes you great.”**

DEAR PARENTS,

Holidays are the best time when you can connect with your child in many ways. These days are precious and valuable and can be made most from if wisely used. We should always remind ourselves that children will not remember us for the gifts we shower upon them but will always cherish the time we spent with them. Its time to nurture young minds, inculcate moral values and narrate family anecdotes to keep them in touch with their roots.

**GENERAL GUIDELINES FOR THE PARENTS:**

- Take your child for a morning walk and talk about things you can see around.
- Play indoor games with your child.
- Let your child help around the house by doing small jobs like dusting, cleaning tables, filling water bottles and watering plants.
- Encourage them to spend time with grandparents.
- Communication will play a vital role in grooming the overall personality of the children. Converse with your child preferably in English.

## GENERAL INSTRUCTIONS TO BE FOLLOWED WHILE DOING HOLIDAY HOMEWORK

- All subjects holiday homework should be done in the respective subject revision notebook/main notebook (as per the instructions given by the subject teacher).
- The child will be assessed for neat handwriting, presentation, creativity and submission of the work on time.
- Prepare your ward for four English or Hindi thoughts related to education or inspirational stories with proper introduction for morning assembly.
- Parents can be facilitators at home but the work should be done independently by the child in his/her own handwriting.
- Make the students revise the syllabus of all subjects covered till date.
- Students should try to do your written work regularly to enhance their writing power.
- Fix up a time table for your ward to organize his/her daily routine like, watching television, playing with friends, studying etc.

**Have a fun-filled, enthusiastic and productive summer break ahead.**

## ENGLISH

### Exercise 1: Identify the Type of Noun

**Instructions:** *Read the following sentences and identify the common or proper nouns in them.*

1. I gave my book to Riya to read.
2. The Taj Mahal in India is very beautiful.
3. Red Riding Hood met the fox in the forest.
4. Mr. Tony Stark walks his dog every day.
5. The boy ran to his mother.
6. The flat was in the middle of Lenin Street.
7. The reporter went to Noida to collect news.
8. This milk tastes sour.
9. Rose is a beautiful girl.
10. I have read the novel by Emily Bronte.



## Exercise 2: Fill in the Blanks with Appropriate Nouns

**Instructions:** *Complete the sentences with appropriate nouns and specify their type.*

1. The \_\_\_\_\_ (collective) of students gathered for the annual event.
2. \_\_\_\_\_ (proper) is a virtue that everyone should practice.
3. The \_\_\_\_\_ (material) used in this sculpture is marble.
4. \_\_\_\_\_ (common) are often found in urban areas.
5. The \_\_\_\_\_ (abstract) of love can be expressed in many ways.

## Exercise 3: Practice Questions based on advertisement lost and found

**Instructions:- Do frame advertisement in an innovative manner with complete information.**

1. You lost your handbag in the Metro between Shastri Nagar and Tees Hazari Station while going for an interview. It contains your passport and all educational certificates. Draft an advertisement to be published in the local daily under the 'Lost and Found' column.
2. You have found a bag in central Park, Ashok Vihar, while walking in the evening. Draft an advertisement to be published in the lost and found column.

**Exercise 4 Do read chapter 2 and 3 in reading journal book and write summary of the story in your own words and describe your favourite character of the story in not more than 50 words.**

**Note : Do entire work in your grammar notebook.**

## हिंदी अवकाश गृहकार्य

**प्रश्न 1:** मुंबई शहर के दो प्रमुख ऐतिहासिक स्थलों के बारे में जानकारी एकत्रित कीजिए। इन स्थलों का इतिहास तथा महत्व विस्तार से लिखिए और चित्र सहित प्रस्तुत कीजिए।

निर्देश:

यह कार्य आप A4 साइज शीट पर साफ-सुथरे एवं सुंदर ढंग से तैयार करें। लिखावट स्पष्ट और व्यवस्थित होनी चाहिए।

**प्रश्न 2:** सुंदर एवं आकर्षक चार्ट पेपर पर संज्ञा की परिभाषा लिखिए तथा उसके विभिन्न भेदों (जैसे- व्यक्तिवाचक, जातिवाचक, भाववाचक आदि) को उपयुक्त चित्रों के साथ स्पष्ट कीजिए।

**प्रश्न 3:** 10 शब्दों के प्रयायवाची शब्दों के फ्लैश कार्ड बनाइए और उन्हें चित्रों से सजाइए।

**प्रश्न 4:** अभ्यास पुस्तिका में करें।

1. रोज़ 5 नए हिंदी शब्द लिखें और उनके अर्थ याद करें।
2. चित्र वर्णन: कोई एक चित्र बनाइए (जैसे पार्क, घर, स्कूल) और उस पर 4-5 वाक्य लिखिए।
3. कविता याद करें: कोई एक छोटी हिंदी कविता याद करें।
4. पठन अभ्यास (Reading): रोज़ 10-15 मिनट हिंदी की किताब पढ़ें।
5. सुलेख पुस्तक में पेज नंबर 5 से 10 तक कार्य करें।

**प्रश्न 5:** कार्यपत्रक को अपनी अभ्यास पुस्तक में करें।

कक्षा 5 हिंदी कार्यपत्रक 1 – वर्ण विचार

नाम: \_\_\_\_\_ कक्षा: 5 तिथि: \_\_\_\_\_

### खंड A: लघु उत्तरीय प्रश्न

1. वर्ण क्या होते हैं?
2. हिंदी में कुल कितने वर्ण होते हैं?
3. स्वर के दो भेद लिखिए।
4. ह्रस्व और दीर्घ स्वर में अंतर लिखिए।
5. व्यंजन क्या होते हैं?

## खंड B: अति लघु उत्तरीय प्रश्न

6. संयुक्त व्यंजन लिखिए।
7. दो द्वित्व व्यंजन लिखिए।

## खंड C

### 8. सही / गलत

1. हिंदी में 40 वर्ण होते हैं। (गलत)
2. स्वर बिना रुकावट के बोले जाते हैं। (सही)
3. व्यंजन अकेले बोले जा सकते हैं। (गलत)

### 9. रिक्त स्थान भरिए

1. अ, इ, उ ----- स्वर हैं।
2. आ, ई, ऊ ----- स्वर हैं।
3. हिंदी में कुल ----- वर्ण होते हैं। In

## पाठ - 3 मैं हूँ मुंबई

### प्रश्न 1 निम्नलिखित शब्दों के अर्थ लिखिए।

1 भ्रमण - \_\_\_\_\_ 2 शताब्दी - \_\_\_\_\_ 3 श्रृंगार - \_\_\_\_\_ 4 दर्शनीय - \_\_\_\_\_

प्रश्न 2 सही उतर पर सही ( ✓ ) का निशान लगाइए।

(क) मुंबई किसकी राजधानी है?

1. दिल्ली की ( ) 2. महाराष्ट्र की ( ) 3. केरल की ( ) 4. हरियाणा की ( )

(ख) 'एलिफेंटा की गुफाएँ', 'गेटवे ऑफ़ इंडिया' से कितनी दूर हैं?

1. 11 कि.मी ( ) 2. 12 कि.मी ( ) 3. 14 की.मी ( ) 4. 15 कि.मी ( )

(ग) चौपाटी पर सबसे ज़्यादा भीड़ कब होती है?

1. सुबह में ( ) 2. दिन में ( ) 3. शाम में ( ) 4. रात में ( )

प्रश्न 3 निम्नलिखित शब्दों के समानार्थी शब्द लिखिए।

1. त्योहार - \_\_\_\_\_

2. समुद्र - \_\_\_\_\_

### प्रश्न 4 रिक्त स्थानों को भरों -

1. समुद्र के समीप अर्धचंद्राकार सड़क \_\_\_\_\_ है।

2. \_\_\_\_\_ के समीप इस्कॉन मंदिर का आकर्षण का प्रमुख केंद्र है।

### प्रश्न 5 निम्नलिखित प्रश्नों के उत्तर दीजिए।

1. भारत की आर्थिक राजधानी किसे और क्यों कहा जाता है?

2. मुंबई के प्रमुख आकर्षण केंद्र या दर्शनीय स्थलों के नाम लिखिए।

# MATHS

Basic operation -1

## Worksheet -1

1)Mental Challenge

A)  $9,99,999 + 1 = \underline{\hspace{2cm}}$

B)  $10,00,000 - 1 = \underline{\hspace{2cm}}$

C)  $5,00,000 + 4,99,999 = \underline{\hspace{2cm}}$

D)  $8,00,000 - 7,99,999 = \underline{\hspace{2cm}}$

E)  $3,45,678 + 54,322 = \underline{\hspace{2cm}}$

2)Solve Carefully

A)  $7,89,456 + 8,76,543 = \underline{\hspace{2cm}}$

B)  $9,00,000 - 8,76,589 = \underline{\hspace{2cm}}$

C)  $6,54,321 + 3,45,679 = \underline{\hspace{2cm}}$

D)  $10,00,000 - 3,78,456 = \underline{\hspace{2cm}}$

E)  $8,90,123 + 1,09,877 = \underline{\hspace{2cm}}$

3)Column Method (Multiple Carry/Borrow)

A) 
$$\begin{array}{r} 9,87,654 \\ -8,76,543 \\ \hline \end{array}$$

B) 
$$\begin{array}{r} 10,00,000 \\ -5,67,890 \\ \hline \end{array}$$

C) 
$$\begin{array}{r} 7,00,000 \\ -3,99,999 \\ \hline \end{array}$$

D) 
$$\begin{array}{r} 6,78,901 \\ -3,45,678 \\ \hline \end{array}$$

= \_\_\_\_\_

4) Find the Missing Number

A)  $4,56,789 + \underline{\hspace{2cm}} = 9,00,000$

B)  $\underline{\hspace{2cm}} - 3,45,678 = 7,00,000$

C)  $8,00,000 - \underline{\hspace{2cm}} = 2,34,567$

D)  $\underline{\hspace{2cm}} + 2,22,222 = 7,77,777$

### Worksheet -2

Solve the following problems:

- A) A company earned ₹7,89,456 in January and ₹8,76,543 in February. In March, it lost ₹3,45,678. What is the total money left?
- B) A warehouse stored 10,00,000 bags of rice. It sold 3,45,678 bags and later 2,34,567 bags. How many bags are left?
- C) The population of two cities is 6,78,901 and 5,67,890. A third city has 3,45,678 people. What is the total population of all three cities?
- D) A school collected ₹9,50,000. It spent ₹4,75,890 on building and ₹2,34,567 on furniture. How much money is left?
- E) The difference between two numbers is 3,45,678. If the smaller number is 2,34,567, find the bigger number.
- F) A number when added to 6,78,901 gives 10,00,000. Find the number.
- G) Find the smallest number that must be added to 8,76,543 to make it 10,00,000.

**Note : Do the above worksheet in your revision notebook.**

### PROJECT WORK:

For Roll no. 1 to 15

Make a divisibility wheel write the rules divisibility 2,3,4,5,6,7,8,9, 10 and 11

.Reference picture



For Roll no. 16 onwards  
Make stairs of Measurement  
Km ,hm dam ...etc  
Reference picture

# MEASUREMENTS

## VOLUME, LENGTH & MASS

↓	mm	↑
↓	cm	↑
↓	dm	↑
↓	m	↑
÷10	DECAHETER	×10
↓	dam	↑
÷10	HECTOMETER	×10
↓	hm	↑
÷10	KILOMETER	×10
↓	km	↑

## WORKSHEET-1

### Section A: Multiple Choice Questions (MCQs)

1. **How many bones does an adult human skeleton have?**  
a) 300                      b) 206                      c) 210                      d) 180
2. **Which organ is protected by the rib cage?**  
a) Brain                      b) Stomach                      c) Heart and Lungs                      d) Spinal Cord
3. **The point where two bones meet is called a:**  
a) Muscle                      b) Ligament                      c) Joint                      d) Tendon
4. **Which type of muscle is found in the heart?**  
a) Skeletal muscle                      b) Smooth muscle  
c) Cardiac muscle                      d) Voluntary muscle

### Section B: Fill in the Blanks:

1. The backbone is made up of 33 small bones called \_\_\_\_\_.
2. Muscles are attached to bones by strong fibers called \_\_\_\_\_.
3. The \_\_\_\_\_ is the longest bone in the human body.
4. Muscles that work according to our will are called \_\_\_\_\_ muscles.

### Section C: True or False

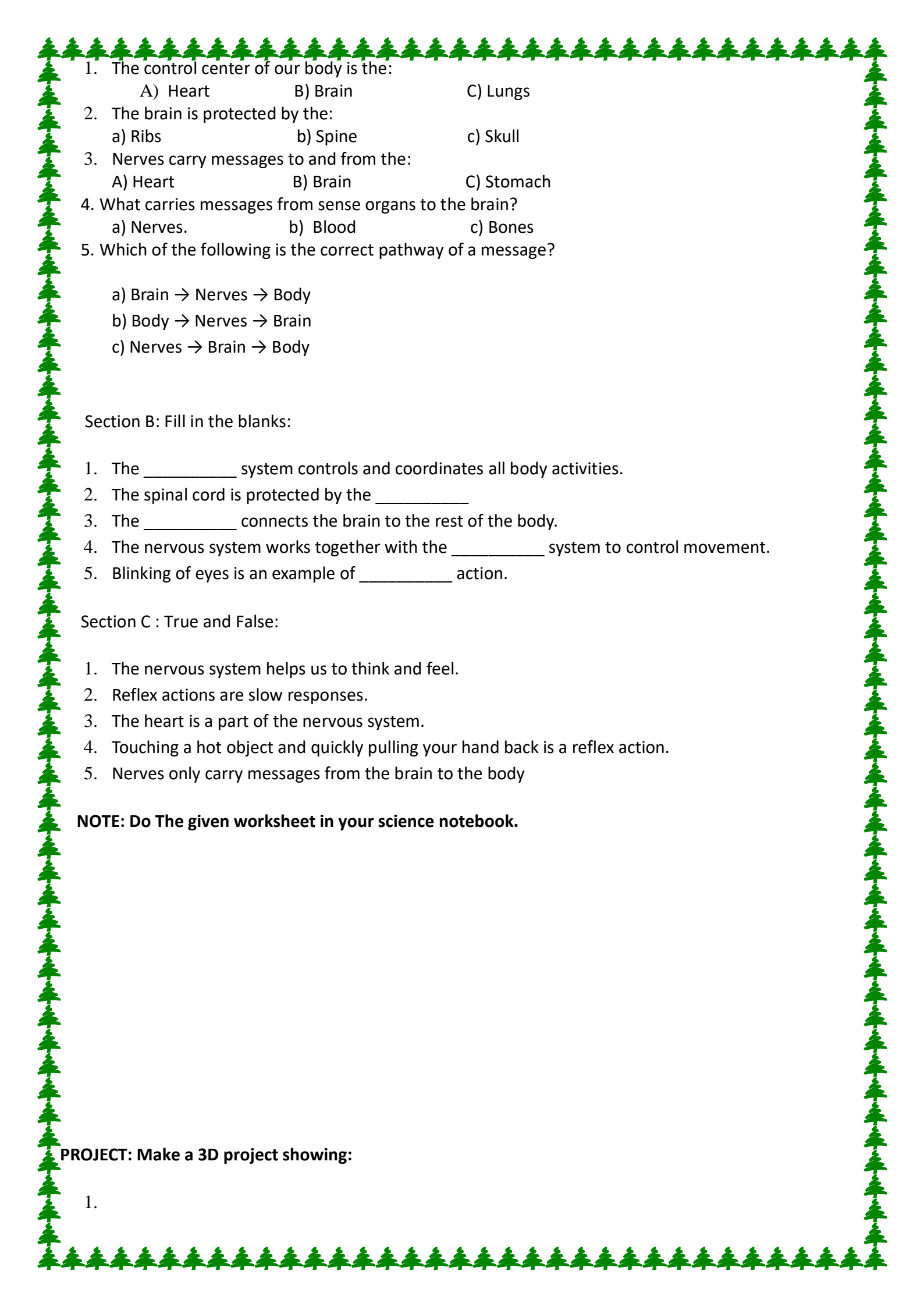
1. The skull is made up of 22 bones. [       ]
2. The lower jaw is the only movable bone in the skull. [       ]
3. Bones are soft and flexible. [       ]
4. Smooth muscles are found in our digestive system. [       ]

### Section D: One-Word Answers

1. The framework of bones that gives shape to our body: \_\_\_\_\_
2. The joint found in our elbows and knees: \_\_\_\_\_
3. The substance inside bones where blood cells are produced: \_\_\_\_\_
4. The joint that allows movement in all directions (like in the shoulder): \_\_\_\_\_

## L- 4 The Nervous System

### Section A : Multiple Choice Questions(MCQs)

- 
1. The control center of our body is the:  
A) Heart                      B) Brain                      C) Lungs
  2. The brain is protected by the:  
a) Ribs                      b) Spine                      c) Skull
  3. Nerves carry messages to and from the:  
A) Heart                      B) Brain                      C) Stomach
  4. What carries messages from sense organs to the brain?  
a) Nerves.                      b) Blood                      c) Bones
  5. Which of the following is the correct pathway of a message?  
a) Brain → Nerves → Body  
b) Body → Nerves → Brain  
c) Nerves → Brain → Body

Section B: Fill in the blanks:

1. The \_\_\_\_\_ system controls and coordinates all body activities.
2. The spinal cord is protected by the \_\_\_\_\_
3. The \_\_\_\_\_ connects the brain to the rest of the body.
4. The nervous system works together with the \_\_\_\_\_ system to control movement.
5. Blinking of eyes is an example of \_\_\_\_\_ action.

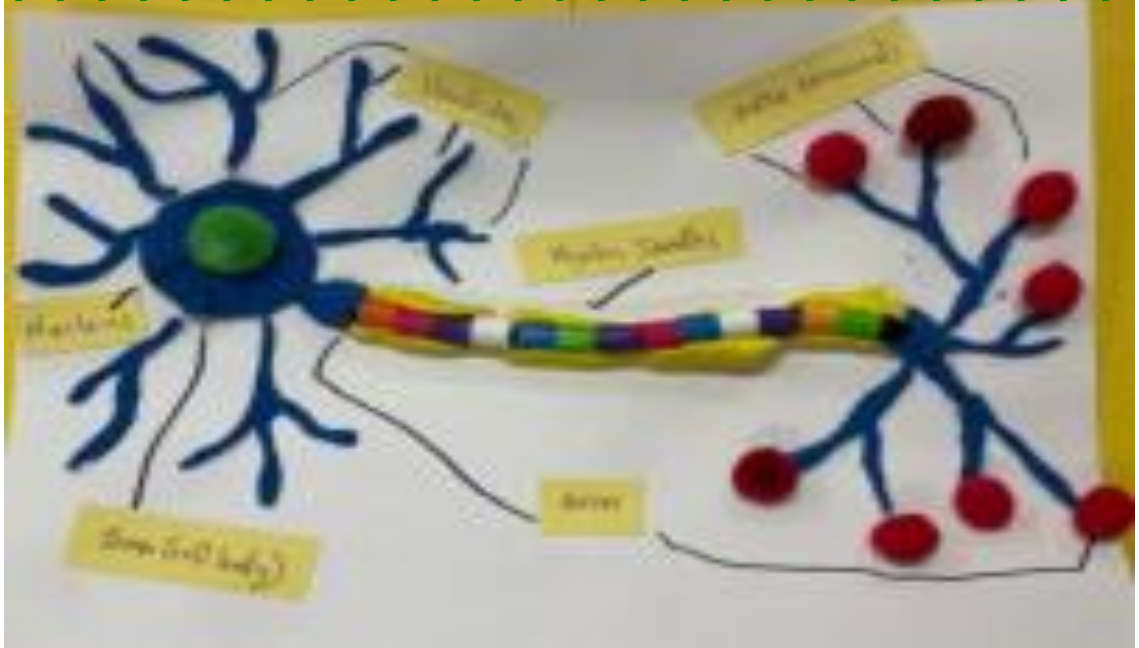
Section C : True and False:

1. The nervous system helps us to think and feel.
2. Reflex actions are slow responses.
3. The heart is a part of the nervous system.
4. Touching a hot object and quickly pulling your hand back is a reflex action.
5. Nerves only carry messages from the brain to the body

**NOTE: Do The given worksheet in your science notebook.**

**PROJECT: Make a 3D project showing:**

- 1.



2. From Roll No. 1-15

3. From Roll No. 16 onwards



Yoga Pose Chart



Draw and practice 3 yoga poses:

Tree Pose

Butterfly Pose

Child Pose

Note- Each student has to write about one yoga pose on a separate sheet. One sheet should contain only one pose including-

- one picture showing the yoga pose.
- which bones/joints are used in that pose
- the benefits of each pose.

## L – 4 WEATHER AND CLIMATE

## WORKSHEET

Q.A) Fill in the blanks:

(Fill in the missing words to complete the sentences.)

1. The condition of the atmosphere at a specific place and time is called \_\_\_\_\_.
2. The average weather pattern of a place over a long period (30–40 years) is called \_\_\_\_\_.
3. As we go higher above sea level, the temperature \_\_\_\_\_ (increases/decreases).
4. The amount of water vapor present in the air is known as \_\_\_\_\_.
5. Places near the \_\_\_\_\_ receive direct sunlight and are generally very hot.

Q.B) True or False:

(Write True, if the statement is correct and False, if it is incorrect)

1. Coastal areas have an extreme climate (very hot in summer and very cold in winter). [\_\_\_\_\_]
2. The Sun is the main source of heat and light on Earth. [\_\_\_\_\_]
3. Humid air makes us feel very comfortable because sweat evaporates quickly. [\_\_\_\_\_]
4. Mountains are cooler than plains because they are at a higher altitude. [\_\_\_\_\_]
5. Winds blowing from the sea to the land are called Land Breezes. [\_\_\_\_\_]

Q.C) Match the Following:

S.no.	Column A	Column B
1.	Torrid Zone	Always cold and covered with snow
2.	Frigid Zone	Distance from the Equator
3.	Temperate Zone	Height above the sea level
4.	Altitude	Very hot and humid throughout the year
5.	Latitude	Neither too hot nor too cold

(Match the items in Column A with their correct descriptions in Column B)

Q. D) One-Word Answers:

(Give one word for the following descriptions)

1. The instrument used to measure the temperature of the air: \_\_\_\_\_
2. The imaginary line that divides the Earth into the Northern and Southern Hemispheres:  
\_\_\_\_\_
3. The zone that lies between the Torrid Zone and the Frigid Zone: \_\_\_\_\_
4. Winds that bring rain to India: \_\_\_\_\_
5. The name of the climate found in deserts: \_\_\_\_\_

**NOTE : Do The given worksheet in your social studies revision notebook.**

Model: Make a 3D project showing:

- Major landforms (Roll no. 1-13)



- Global Warming (Roll no. 14 – 26)



# Kindly refer the Reference image for the project.



**PORTFOLIO ACTIVITY:**

Handprint Superhero Card on Father's Day: Trace handprint, turn each finger into a "power" dad has. Write one sentence per finger.

OR

Acrostic + Evidence: Write F-A-T-H-E-R vertically. For each letter, add a quality + specific example.  
"H - Helpful: He taught me to ride my bike."

**INSTRUCTIONS:**

Add pictures with your father to make it more presentable & relatable.

Do the given activity on A4 size colourful pastel sheets.

Writing must be neat & clear.

**WORKSHEET -1**

**Q.1 Complétez avec les pronoms sujets. (Complete with je, tu, il, elle, nous, vous, ils, elles)**

- a) \_\_\_ suis élève.
- b) \_\_\_ es mon ami.
- c) \_\_\_ est professeur. (masculin)
- d) \_\_\_ est ma sœur.
- e) \_\_\_ sont mes amies. (féminin)
- f) \_\_\_ suis heureuse.
- g) \_\_\_ es gentil.
- h) \_\_\_ est dans la salle.
- i) \_\_\_ est dans la salle.
- j) \_\_\_ sommes prêts.

**Q.2 Conjuguez avec "être".(Conjugate "être" correctly)**

- a) Je \_\_\_ élève.
- b) Tu \_\_\_ mon ami.
- c) Il \_\_\_ dans la classe.
- d) Elle \_\_\_ très gentille.
- e) Nous \_\_\_ à l'école.
- f) Vous \_\_\_ en retard.
- g) Ils \_\_\_ contents.
- h) Elles \_\_\_ prêtes.
- i) Je \_\_\_ fatiguée.
- j) Tu \_\_\_ intelligent.

**Q.3 Complétez avec un, une, des.(Complete with indefinite articles)**

- a) J'ai \_\_\_ livre intéressant.
- b) Elle a \_\_\_ amie très gentille.
- c) Nous voyons \_\_\_ oiseaux dans le ciel.
- d) Il y a \_\_\_ chat sous la table.
- e) Tu as \_\_\_ stylo bleu.
- f) Ils ont \_\_\_ maison à Paris.
- g) J'ai acheté \_\_\_ fleurs pour toi.
- h) Elle mange \_\_\_ pomme.
- i) Nous avons \_\_\_ idées intéressantes.
- j) Il y a \_\_\_ école dans ce village.

**Q.4 Écrivez le nom de 10 pays et leur nationalité en français.(Write 10 countries name and their nationality in french.)**

**NOTE - DO THE GIVEN WORKSHEET IN FRENCH NOTEBOOK.**



**PROJECT BASED ACTIVITY:-**

- Write the numbers from 1 to 20 in French.

**☒ Instructions:-**

- Use a clean chart paper (A4 size).
- Write the numbers clearly and neatly in French.
- Use colors or pictures to make the chart attractive.
- Maintain proper spacing and alignment.
- <sup>TM</sup>Ensure correct spelling and numbering.

## SANSKRIT

- प्रश्न 1. पाठ्य पुस्तक नई दीप मणिका में पाठ 4,5,6 पढ़ो और शब्दार्थ याद करो।  
प्रश्न 2. कोई एक वैदिक मंत्र हिंदी अर्थ सहित A4 size sheet पर लिखिए।  
प्रश्न 3. 'लता' शब्द रूप संस्कृत संचिका में लिखिए और याद कीजिए।  
प्रश्न 4. 'पठ्' , 'गम्' धातु रूप लट् लकार में संचिका में लिखिए और याद कीजिए।

### Worksheet -1 अकारान्त नपुंसकलिंग शब्द

Q1. रिक्त स्थान भरिए (Fill in the blanks)

1. आम्र (बहुवचन) = \_\_\_\_\_
2. पुष्पम् (द्विवचन) = \_\_\_\_\_
3. पुस्तकानि (एकवचन) = \_\_\_\_\_
4. चित्रे (एकवचन) = \_\_\_\_\_
5. पत्रम् (बहुवचन) = \_\_\_\_\_

Q2. सही विकल्प चुनिए (Choose the correct answer)

1. "फलानि" किसका बहुवचन है?  
(a) फलम् (b) फले. (c) फलः
2. "मित्रे" का अर्थ है—  
(a) एक मित्र (b) दो मित्र (c) अनेक मित्र
3. "गृहाणि" किसका रूप है?  
(a) एकवचन (b) द्विवचन. (c) बहुवचन
4. "पुस्तकम्" का द्विवचन क्या है?  
(a) पुस्तके (b) पुस्तकानि. (c) पुस्तकम्
5. "छत्राणि" का एकवचन क्या है?  
(a) छत्रे. (b) छत्रम्. (c) छत्रः

Q3. मिलान कीजिए (Match the following)

A

B

आम्रम्

(a) चित्राणि

चित्रम्

(b) आम्राणि

पुस्तकम्

(c) पुष्पाणि

पुष्पम्

(d) पुस्तकानि

पत्रम्

(e) पत्राणि

Q4. एकवचन, द्विवचन, बहुवचन लिखिए

शब्द

एकवचन

द्विवचन

बहुवचन

फल

\_\_\_\_\_

\_\_\_\_\_

\_\_\_\_\_

पुष्प

\_\_\_\_\_

\_\_\_\_\_

\_\_\_\_\_

चित्र

\_\_\_\_\_

\_\_\_\_\_

\_\_\_\_\_

मित्र

\_\_\_\_\_

\_\_\_\_\_

\_\_\_\_\_

पत्र

\_\_\_\_\_

\_\_\_\_\_

\_\_\_\_\_

Q5. चित्र देखकर शब्द लिखिए

☐ (Teacher can draw or paste pictures)

☐ (फल) → \_\_\_\_\_

☐ (पुस्तक) → \_\_\_\_\_

☐ (पुष्प) → \_\_\_\_\_

Q6. सही/गलत लिखिए (True/False)

1. "आम्रे" का अर्थ दो आम होता है। \_\_\_\_\_

2. "पुस्तकानि" एकवचन है। \_\_\_\_\_

3. "पत्रम्" नपुंसकलिंग शब्द है। \_\_\_\_\_

4. "चित्राणि" बहुवचन है। \_\_\_\_\_

**Worksheet – 2 धातु-परिचय:**

✍ Q1. सही उत्तर पर ✓ लगाइए (Choose the correct option)

“हसति” का अर्थ है –

(a) दौड़ना (b) हँसना (c) पढ़ना

“खादति” का अर्थ है –

(a) खाना (b) पीना (c) लिखना

“धावति” का अर्थ है –

(a) सोना (b) दौड़ना (c) खेलना

“पठति” का अर्थ है –

(a) पढ़ना (b) लिखना (c) बोलना

“पश्यति” का अर्थ है –

(a) देखना (b) हँसना (c) जाना

✍ Q2. मिलान कीजिए (Match the following)

A (धातु)

B (अर्थ)

1. गच्छति

( ) खाना

2. खादति.

( ) जाना

3. लिखति

( ) लिखना

4. पिबति

( ) पीना

5. नमति.

( ) नमस्कार करना

✍ Q3. रिक्त स्थान भरिए (Fill in the blanks) (1×5=5)

1. बालकः पुस्तकं \_\_\_\_\_ (पढ़ता है)

2. बालिका जलं \_\_\_\_\_ (पीती है)

3. बालकः खेलं \_\_\_\_\_ (खेलता है)

4. बालिका नृत्यं \_\_\_\_\_ (नाचती है)

5. बालकः गुरुम् \_\_\_\_\_ (नमस्कार करता है)

(Options: पठति, पिबति, क्रीडति, नृत्यति, नमति)

✍ Q4. एकवचन, द्विवचन, बहुवचन लिखिए (1×5=5)

धातु	एकवचन	द्विवचन	बहुवचन
हस्	_____	_____	_____
पठ्	_____	_____	_____
धाव्	_____	_____	_____
गम्	_____	_____	_____
खाद्	_____	_____	_____

✍ Q5. चित्र देखकर वाक्य लिखिए (Write one sentence)

(Teacher can draw or students imagine)

- (लड़का पढ़ रहा है)
- \_\_\_\_\_
- (लड़का खेल रहा है)
- \_\_\_\_\_
- (लड़की खा रही है)
- \_\_\_\_\_

✍ Q6. सही रूप चुनिए (Choose correct form)

1. दो बच्चे खेलते हैं –

(a) क्रीडति (b) क्रीडतः (c) क्रीडन्ति

2. एक बच्चा दौड़ता है –

(a) धावति (b) धावतः (c) धावन्ति

3. सब बच्चे हँसते हैं –

(a) हसति (b) हसतः (c) हसन्ति

4. दो बच्चे पढ़ते हैं –

(a) पठति (b) पठतः (c) पठन्ति

## Computer

### Lab Activity

Create an Excel worksheet on speed test of internet using the given instructions.

Objective:- to collect record and analyse internet speed data using excel and identify variations in internet performance across different times of the day over 5 days using mathematical function and visual charts.

1. Use an online speed test website or app (like speedtest.net or fast.com) to measure your internet speed in Mbps (megabits per seconds).
2. Record the internet speed 3 times a day:
  - Morning (around 8 AM)
  - Afternoon (around 2 PM)
  - Evening (around 8 pm)
3. Do this for 5 days.
4. Create a table in Excel.

Day	Morning 8 Am	Afternoon	Evening (8PM)	Average Speed (Mbps)
Day 1				
Day 2				
Day 3				
Day 4				
Day 5				

5. Calculate the average speed for each day.
6. Create a pie chart to show the internet speed for morning afternoon and evening.

Now answer the following questions.

- What time of the day do you generally get the best Internet speed?

- Does the speed train significantly on any particular day?

## Worksheet on Computer

A Tick [✓] the correct option.

- Which function gives the largest value in a range?  
a) AVERAGE.                      b) MAX.                      c) MIN
- Which chart displays the data in vertical bars.  
a) Column Charts.      b) Area charts.              c) Bar charts
- Which tab option allow you to paste data?  
a) File              b) Insert.              c) Home
- The default name of a new sheet in excel is \_\_\_\_  
a) Data 1      b) sheet 1              c) page 1
- It is the area of chart where the actual chart is plotted.  
a) Chart title              b) Data Object              c) plot Area  
b)

B. Write 'T' for true statement and 'F' for False statements.

- I. You can insert a neuro above and existing row. \_\_\_\_\_
- II. A chart plot areas where the graph itself is drawn. \_\_\_\_\_
- III. The MIN function find the maximum value in a range. \_\_\_\_\_
- IV. Legend is to the right of the plot area and identify each data series.  
\_\_\_\_\_.
- V. Marshalls option separates the data from surrounding cells. \_\_\_\_\_.

C. Fill in the blanks.

- I. The box are displace the address of the actor cell is called the \_\_\_\_\_
- II. A group of related cells in a worksheet is called a \_\_\_\_\_
- III. The \_\_\_\_\_ displays the formula sign to the active cell.
- IV. \_\_\_\_\_ is located at the bottom of the worksheet window that displays the progress of current ask and controls for viewing the worksheets.

Q D Answer the following questions

- a) Write three features of Excel.
- b) What is operators define operators with an example.
- c) What are the steps to changing the font colour of data?

## ART

Make a (8 inch long) colourful decorative candle with the use of waste material.

- Complete your art book work till pg.no. 15.

### Art Integrated Activity (English & SST)

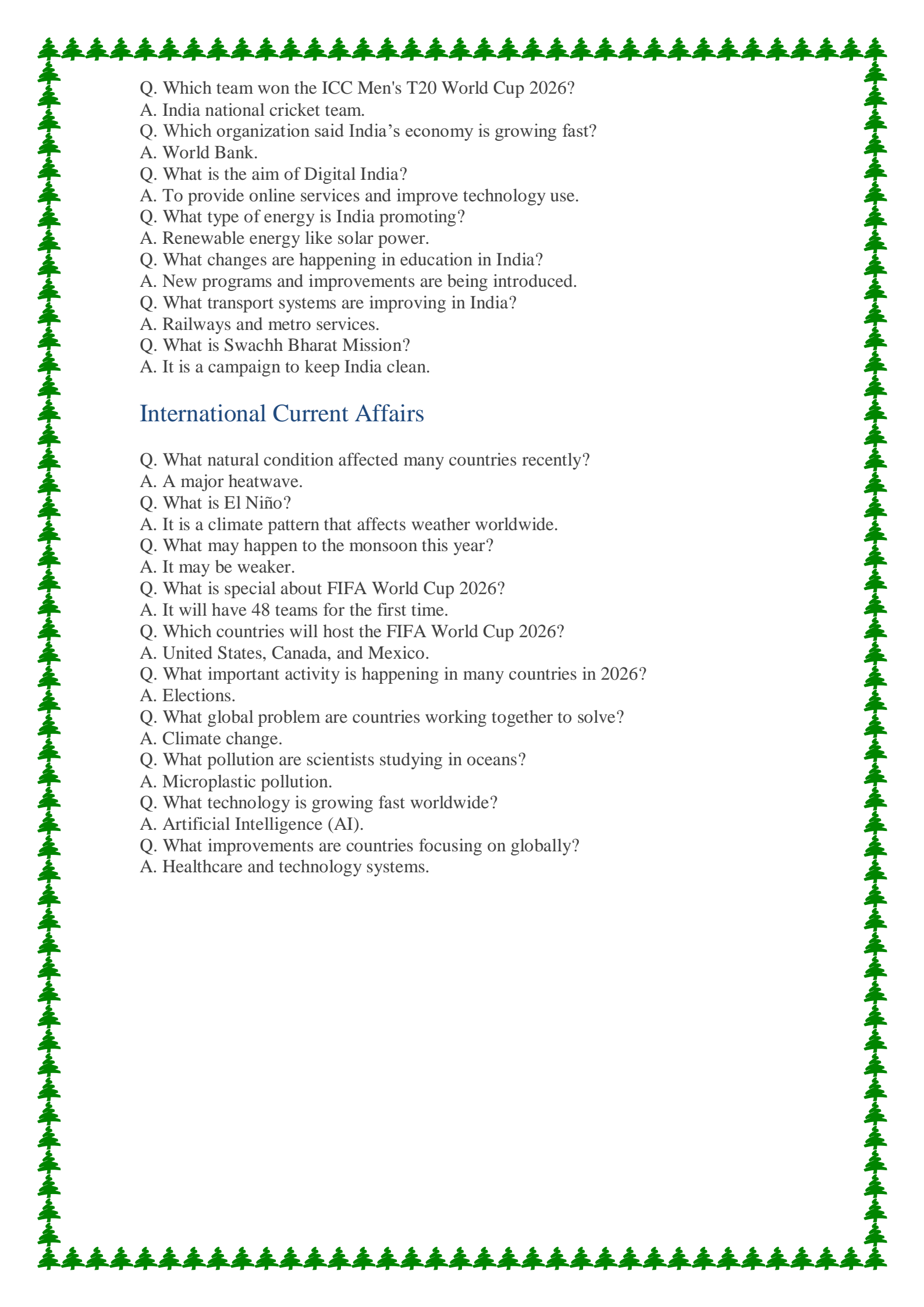
Create your own newspaper(hand made) make a newspaper consisting of four pages. It should have national and international news, sports news, weather news and a few advertisements. Along with Environmental quiz (in form of cross word puzzle) a Poem on - 'Legend - Thank you for raising us'on the special occasion of father's day.And one graphical article on Yoga Day - One Earth,One Health .You can make it on any sheet of your choice .Your news paper should have a beautiful name too.

## G.K

- Write the following current affairs in your G.K notebook and learn it.

### National Current Affairs

- Q. What is PMGSY-IV?  
A. It is a scheme to improve roads in villages.
- Q. What report shows data about men and women in India?  
A. "Women and Men in India 2025".
- Q. What are Citizenship Amendment Rules 2026?  
A. They are new rules related to citizenship in India.
- Q. What new step has India taken for minerals?  
A. India started a critical minerals recycling scheme.
- Q. Which state became India's first paperless judiciary state?  
A. Sikkim.
- Q. Which state is the top marine fish producer?  
A. Tamil Nadu.
- Q. What is the new toll system introduced in India?  
A. A barrier-less toll collection system.
- Q. What is Mission SAKSHAM?  
A. It is a scheme to improve banking awareness.
- Q. When is Fire Safety Week observed?  
A. In the month of May.
- Q. Why is India becoming popular in healthcare?  
A. Because of medical tourism.
- Q. What is Drishti Satellite?  
A. It is a private satellite launched by India.
- Q. What is India AI Impact Summit 2026?  
A. It is a technology and AI summit hosted by India.
- Q. Which international beauty event will India host?  
A. Miss Grand International 2026.

- 
- Q. Which team won the ICC Men's T20 World Cup 2026?  
A. India national cricket team.
- Q. Which organization said India's economy is growing fast?  
A. World Bank.
- Q. What is the aim of Digital India?  
A. To provide online services and improve technology use.
- Q. What type of energy is India promoting?  
A. Renewable energy like solar power.
- Q. What changes are happening in education in India?  
A. New programs and improvements are being introduced.
- Q. What transport systems are improving in India?  
A. Railways and metro services.
- Q. What is Swachh Bharat Mission?  
A. It is a campaign to keep India clean.

## International Current Affairs

- Q. What natural condition affected many countries recently?  
A. A major heatwave.
- Q. What is El Niño?  
A. It is a climate pattern that affects weather worldwide.
- Q. What may happen to the monsoon this year?  
A. It may be weaker.
- Q. What is special about FIFA World Cup 2026?  
A. It will have 48 teams for the first time.
- Q. Which countries will host the FIFA World Cup 2026?  
A. United States, Canada, and Mexico.
- Q. What important activity is happening in many countries in 2026?  
A. Elections.
- Q. What global problem are countries working together to solve?  
A. Climate change.
- Q. What pollution are scientists studying in oceans?  
A. Microplastic pollution.
- Q. What technology is growing fast worldwide?  
A. Artificial Intelligence (AI).
- Q. What improvements are countries focusing on globally?  
A. Healthcare and technology systems.