



St. Mary's School, Dwarka

Holiday Homework 2026

Class: VIII

Worksheet 3

Subject: English

General Instructions:

- 1) **The work should be done neatly and systematically.**
- 2) **The given questions are to be done in the English notebook.**
- 3) **Attempt all questions.**

No. of questions – 9

M.M-25

Q1. Read the following passage.

Traditional handicrafts, once considered outdated in the age of machines and mass production, are now experiencing a remarkable revival across many parts of the world. Handmade pottery, weaving, embroidery, wood carving, and metalwork are gaining popularity among people who value creativity, cultural heritage, and sustainable living. Artisans who once struggled to keep their crafts alive are now finding new opportunities through exhibitions, tourism, and online marketplaces.

One major reason behind this renewed interest is the growing awareness of environmental sustainability. Unlike factory-made goods, handmade products are often created using natural materials and traditional methods that produce less waste and pollution. Many consumers are also becoming tired of identical mass-produced items and are instead choosing unique handmade objects that reflect skill, tradition, and individuality.

Another important factor is the role of social media and digital platforms. Artists and craftsmen can now display and sell their work to customers around the world without depending entirely on local markets. Young entrepreneurs are combining traditional techniques with modern designs, making handicrafts more appealing to younger generations. Governments and cultural organisations are also supporting artisans through training programmes, craft fairs, and financial assistance.

However, traditional handicrafts still face several challenges. Many artisans earn limited incomes and struggle to compete with cheap machine-made products. Younger generations are sometimes unwilling to continue family crafts because they see them as less profitable or socially respected. In some regions, valuable traditional skills are disappearing as experienced craftsmen grow older without passing on their knowledge.

There is also concern that commercialisation may reduce the authenticity of traditional art forms. Some products are altered mainly to attract tourists, causing them to lose their cultural significance and originality. Therefore, it is important to preserve both the economic value and cultural identity of these crafts.

Std. VIII Worksheet 3

Despite these difficulties, traditional handicrafts continue to play an important role in preserving history, culture, and artistic expression. By supporting artisans and encouraging creativity, societies can protect these valuable traditions while also creating employment and promoting sustainable development.

Based on your understanding of the passage, answer the questions given below. (1×5=5)

i. Why are traditional handicrafts becoming popular again? (1)

Traditional handicrafts are becoming popular again because people _____.

- a. prefer only machine-made products
- b. want cheaper factory goods
- c. value uniqueness and cultural heritage
- d. avoid using natural materials

ii. Which difficulty is commonly faced by artisans? (1)

- a. shortage of traditional skills
- b. competition from machine-made products
- c. lack of interest in social media
- d. excessive government support

iii. According to the passage, which of the following statements is NOT true? (1)

- a. Social media helps artisans reach global customers.
- b. Handmade products often create less pollution.
- c. All young people are eager to continue family crafts.
- d. Governments organise programmes to support craftsmen.

iv. How are young entrepreneurs contributing to traditional handicrafts? (1)

- a. replacing traditional crafts with factory products
- b. discouraging artisans from joining exhibitions
- c. combining traditional skills with modern designs
- d. reducing artisan dependence on digital platforms

v. “Some products are altered mainly to attract tourists...”

Which word from the passage is closest in meaning to ‘altered’? (1)

- a. preserved
- b. changed
- c. protected
- d. collected

Q2. Discipline is the bridge between goals and accomplishment. Write a paragraph in about 100–120 words on why discipline is necessary to succeed in life. Include how discipline helps in building good habits, staying focused, and overcoming challenges on the path to success. (3)

Std. VIII Worksheet 3

Q3. Fill in the blanks with the appropriate word.

(½ x 4=2)

During the storm, the passengers waited anxiously as the pilot (i) _____ to land the aircraft safely. The crew members worked (ii) _____ to calm everyone inside the cabin. A child sitting near the window looked completely (iii) _____ by the frightening situation, yet his mother remained patient and reassuring. After several tense minutes, the plane finally (iv) _____ on the runway without any damage.

- | | | | | |
|------|--------------|--------------|------------------|---------------|
| i. | a. attempts | b. attempted | c. had attempted | d. attempting |
| ii. | a. calmly | b. nervously | c. diligently | d. suddenly |
| iii. | a. terrified | b. terrify | c. terrifying | d. terror |
| iv. | a. lands | b. landing | c. landed | d. had land |

Q4. Fill in the blanks with the appropriate word.

(½ x 4=2)

Scarcely had the tournament begun when the captain realised that (i) _____ players were suffering from exhaustion due to the extreme heat. The coach advised the team to avoid (ii) _____ careless mistakes during the crucial match. Although the audience (iii) _____ loudly throughout the game, the players remained focused on their performance. In the final moments, the team succeeded in (iv) _____ the championship after a thrilling contest.

- | | | | | |
|------|-----------|-------------|------------|----------|
| i. | a. much | b. many | c. little | d. every |
| ii. | a. make | b. made | c. making | d. makes |
| iii. | a. cheers | b. cheering | c. cheered | d. cheer |
| iv. | a. win | b. won | c. winning | d. wins |

Answer the following questions in 30-40 words.

Q5. What references to sound does the poet use to create a feeling of peace and longing in the poem, **The Lake Isle of Innisfree**? (2)

Q6. Why was the narrator sorry that he had paid attention to the sound of footsteps in the lesson, **The Night the Ghost Got In**? (2)

Q7. Why did Amma allow Patil to take away the cyclostyling machine? Why did Mohan oppose it? (2)

Q8. What are the difficulties faced by the Yup'ik people, both emotionally and physically, after their migration? (3)

Std. VIII Worksheet 3

Q9. Create an illustrated 'Journey Through Narnia' story path on an A3-size sheet using colours, drawings, symbols, pictures, and short descriptions. **(4)**

- Design the sheet like a pathway or map showing the important events from the novel in sequence.

- Include important moments such as:

- ✓ Lucy entering the wardrobe

- ✓ Meeting Mr. Tumnus

- ✓ Edmund meeting the White Witch

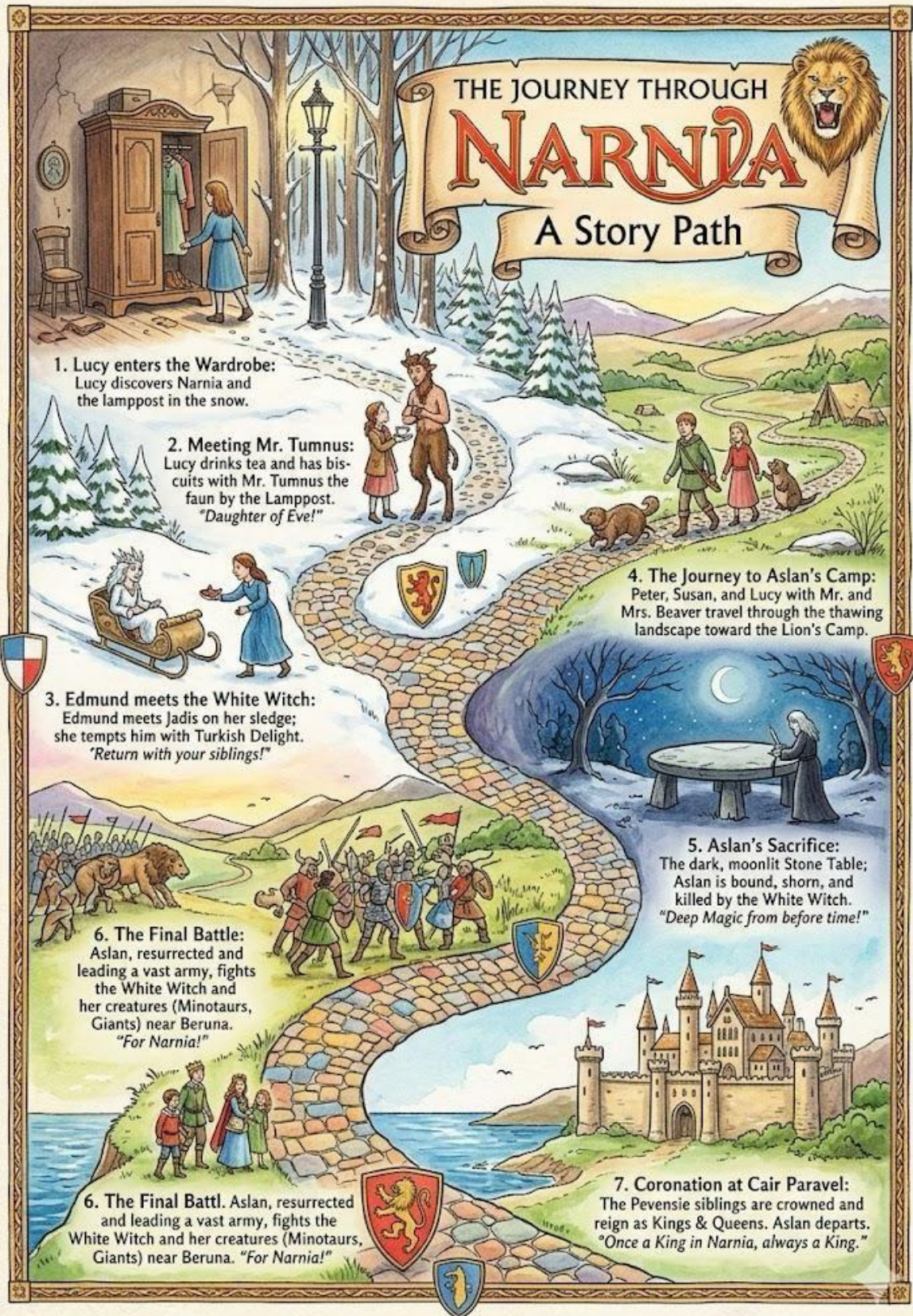
- ✓ The journey to Aslan's camp

- ✓ Aslan's sacrifice at the Stone Table

- ✓ The final battle

- ✓ The coronation at Cair Paravel

Below is a sample for your reference.



Subject: Hindi

निर्देश — 1 दिए गए सभी प्रश्नों के उत्तर हिन्दी की उत्तर पुस्तिका में लिखिए।

2 सभी प्रश्नों के उत्तर पूर्ण वाक्य में लिखकर स्थानों को रेखांकित कीजिए।

3 कार्य स्वच्छ शुद्ध एवं स्पष्ट लेख में कीजिए।

प्रश्न 1 अपठित गद्यांश को पढ़कर निम्न प्रश्नों के उत्तर दीजिए —

(1×5=5)

बदलते समय के साथ नारी का स्थान समाज में एक नई ऊँचाई पर पहुँच चुका है। वह अब सिर्फ घर तक सीमित नहीं है, बल्कि हर क्षेत्र में अपनी पहचान बना रही है। शिक्षा, विज्ञान, राजनीति, खेल, कला, और व्यवसाय—हर क्षेत्र में नारी का योगदान उल्लेखनीय है। यह बदलाव सिर्फ नारी की शक्ति को नहीं दर्शाता, बल्कि समाज की सोच और दृष्टिकोण में आई प्रगतिशीलता को भी रेखांकित करता है। नारी अब किसी से कम नहीं है। आज वह परिवार की देखभाल करने के साथ-साथ देश और दुनिया के निर्माण में भी महत्वपूर्ण भूमिका निभा रही है। कल्पना चावला, मैरी कॉम, किरण बेदी इत्यादि नारी शक्ति को परिभाषित करने वाली अन्य महिलाओं के उदाहरण हमें बताते हैं कि यदि नारी को अवसर मिले, तो वह किसी भी क्षेत्र में असंभव को संभव कर सकती है। नारी के बढ़ते कदम यह साबित करते हैं कि वह अब अबला नहीं, बल्कि सबला है। उसकी शक्ति, संकल्प और आत्मविश्वास ही उसकी पहचान है। आज की नारी आत्मनिर्भर है, और वह समाज को नए आयाम देने के लिए हर चुनौती को स्वीकार करने के लिए तैयार है।

(i) नारी की पहचान किससे है?

- (क) संकल्प और आत्मविश्वास
- (ख) कला और व्यवसाय
- (ग) संकल्प और भक्ति
- (घ) संकल्प और कल्पना

(ii) नारी के बढ़ते कदम क्या साबित करते हैं?

- (क) वह अबला है
- (ख) वह सबला है
- (ग) वह निर्भर है
- (घ) वह शक्तिहीन है

(iii) निम्नलिखित कथन (A) तथा कारण (R) को ध्यानपूर्वक पढ़कर उचित विकल्प का चयन कीजिए—

कथन (A) आज की नारी आत्मनिर्भर है।

कारण (R) नारी समाज को नए आयाम देने के लिए हर चुनौती को स्वीकार करने के लिए तैयार है

- (क) कथन (A) तथा कारण (R) दोनों गलत हैं।
(ख) कथन (A) गलत है तथा कारण (R) सही है।
(ग) कथन (A) सही है लेकिन कारण (R) गलत है।
(घ) कथन (A) तथा कारण (R) दोनों सही हैं। तथा कारण (R) कथन (A) की सही व्याख्या करता है।

(iv) नारी का योगदान किन-किन क्षेत्रों में है?

(v) किन महिलाओं ने नारी शक्ति को परिभाषित किया है?

निम्नलिखित प्रश्नों के उत्तर दीजिए—

(1×5=5)

प्रश्न 2 गुणवाचक विशेषण को स्पष्ट करते हुए उसका उदाहरण दीजिए।

प्रश्न 3 कमल शब्द के दो पर्यायवाची शब्द लिखिए।

प्रश्न 4 'आराम' शब्द का अनेकार्थी शब्द क्या होगा? ?

प्रश्न 5 आज़ादी के लिए सभी ने मिलकर कार्य किया क्योंकि...सकता। रिक्त स्थान में उपयुक्त लोकोक्ति क्या होगी ?

प्रश्न 6 'खोज खबर लेना' मुहावरे का अर्थ लिखकर वाक्य में प्रयोग कीजिए।

प्रश्न-7 निम्नलिखित प्रश्नों के उत्तर दीजिए—

(1½×2=3)

(क) वर्षा होने से प्रकृति में क्या परिवर्तन आता है? आपका पसंदीदा ऋतु कौन-सा है और क्यों?

(ख) कवि बच्चों को भावना की गोद से उतरकर क्या सीखने को कहते हैं? तुम्हारे विचार से आशीर्वाद का किसी व्यक्ति के जीवन में क्या महत्त्व होता है?

प्रश्न 8 निम्नलिखित प्रश्न का उत्तर दीजिए—

(2×1=2)

प्र0 निमंत्रण पाकर लेखक के मन में कैसे विचार उठ रहे थे?

प्रश्न 9 दिए गए संकेतों के आधार पर 70 से 80 शब्दों में एक कहानी लिखिए। **(5×1=5)**

भोजन की तलाश में सियार धोबी के नील के ड्रम में गिरना नीले रंग का लाभ उठाने की सोचना जंगल का नया राजा बन जाना सभी जानवरों का उसकी आज्ञा मानना, सेवा करना सियार को घमंड होना एक दिन सियारों का हुआ-हुआ करना रँगै सियार का भी आवाज़ मिलाना पोल-पट्टी खुल जाना शेर के हाथों उसका मारा जाना।

शिक्षा—।

प्रश्न-10 चक्र की आकृति बनाते हुए कारक चिह्नों को दर्शाइए।

(5×1=5)

Subject: Sanskrit

- निर्देश- 1 प्रदत्त प्रश्नानाम् उत्तरम् संस्कृत पुस्तिकायाम् एव लिखत ।
2 प्रश्नानाम् उत्तरम् पूर्णवाक्येन लिखित्वा रिक्तस्थानानि रेखांकित करणीय ।
3 कार्यम् स्वच्छं ,शुद्धं एवं स्पष्टं लेखम् एव लेखनीय ।

प्रश्न 1 अधोलिखितं गद्यांशं पठित्वा बहुविकल्पकान् प्रश्नान् उत्तरत - (1×5=5)

सिखसंप्रदायस्य गुरोः नानकस्य नाम को न जानाति? समाजसुधारकेषु अयम् अग्रगण्यः। गुरु नानकः श्रेष्ठः समाजसुधारकः तथा चिन्तकः आसीत्। अस्य महापुरुषस्य जन्म 1467 तमे वर्षे पञ्च नदप्रान्ते तलवण्डी ग्रामे अभवत्। अस्य पितुः नाम श्रीमान् कालुचन्द्रः आसीत्। बाल्यात् एव गुरु नानकः एकान्तप्रियः आसीत्। तस्य मनः क्रीडने न रमति स्म। अस्य पिता नानकस्य वैराग्यवृत्तिः दृष्ट्वा; तथा एकान्तप्रिय स्वभावमवलोक्य खिन्नः आसीत्। तस्य इच्छा आसीत् यत् नानकः अपि व्यापार कार्ये संलग्नः भवेत् किन्तु नानकस्य रुचिः व्यापारकार्ये ना आसीत्। निर्धनाय धनं वस्त्ररहिताय वस्त्रं, क्षुधापीडिताय भोजनं एतत् एव नानकस्य कर्म आसीत्। एकदा नानकस्य पिता तस्मै कानिचित् रुप्यकाणि व्यापारार्थम् अयच्छत्। किन्तु नानकः तै रुप्यकैः साधवेभ्यः भोजनम् अददात् तथा च रिक्तहस्तः गृहम् आगच्छत्। एतत् दृष्ट्वा तस्य पिता अतीव दुःखितः अभवत्। तेन ज्ञातं यत् नानक कदापि व्यापारी न भविष्यति। ईश्वरम् कृत्यां संलग्नः नानक एकस्मिन् दिने गृहम् अत्यजत्। गृहं त्यक्त्वा नानक साधूनां समीपे अवसत्। ईश्वरभक्त्या सः देवीसम्पन्न अभवत्। तस्य मुखे अद्वितीयं तेज विलसति स्म। गुरुनानकस्य उपदेशाः श्रवणीयाः। ते सर्वे समाजकल्याणार्थम् एव सन्ति। तान् उपदेशान् अनुसृत्य नानकस्य अनेकै शिष्याः अभवन्। अद्यत्वे अपि गुरुनानकस्य उपदेशाः सर्वत्र पठन्ति। नानकसंप्रदायेन अनेकानि समाजकार्याणि कृतानि। स्थाने स्थाने पेयजल व्यवस्थां कृता। अद्य पर्यन्तं नानकशिष्याः जनकल्याणं कुर्वन्ति। नूनं, भारतीयानाम् एतत् मतद् भाग्य, यत् नानक सदृशाः महापुरुषाः अत्र अजायन्त। एते महापुरुषाः सर्वैः पूजनीयाः खलु।

(i) सिखसंप्रदायस्य गुरोः कः आसीत् ?

- (क) रामः
(ख) वशिष्ठः
(ग) नानकः
(घ) हरिः

(ii) अद्यत्वे अपि गुरुनानकस्य कः सर्वत्र पठन्ति ?

- (क) कथाः
(ख) उपदेशाः
(ग) उपायः
(घ) श्लोकाः

Std. VIII Worksheet 3

(iii) नानकस्य पितुः नाम आसीत् ?

- (क) श्रीमान सूर्यः
- (ख) श्रीमान कृष्णचन्द्रः
- (ग) श्रीमान कलाचन्द्रः
- (घ) श्रीमान कालुचन्द्रः

(iv) नानकस्य पिता तस्मै कानिचित् रुप्यकाणि किर्मथम् अयच्छत्?

- (क) व्यापारार्थम्
- (ख) परार्थम्
- (ग) दयार्थम्
- (घ) निरर्थम्

(v) 'आसीत्' अस्मिन् पदे कः धातुः कः च लकारः ?

- (क) अस्ति धातुः लट् लकारः
- (ख) भू धातुः लोट् लकारः
- (ग) अस् धातुः लङ् लकारः
- (घ) आसीत् धातुः लृट् लकारः

प्रश्न 2 चित्रं दृष्ट्वा मञ्जूषायां प्रदत्त पदानाम् सहायतया रिक्तस्थानानि पूर्यत- $(\frac{1}{2} \times 4 = 2)$

मञ्जूषा = खगाः, वृक्षाः, व्यायामं, उद्यानम्



- (क) अस्मिन् चित्रे एकः ----- अस्ति ।
(ख) अत्र जनाः ----- कुवन्ति ।
(ग) हरिताः ----- सन्ति ।
(घ) आकाशे ----- उत्पतन्ति ।

प्रश्न 3 चित्रम् रचयित्वा केचन त्रयस्य वृक्षाणाम् नामानि संस्कृते लिखत । (3)

प्रश्न 4 अधोलिखिते संवादे मञ्जूषायाः उचितपदानि चित्वा रिक्तस्थानानि पूरयन्तु । ($\frac{1}{2} \times 4 = 2$)

मञ्जूषा- विषयः , पर्यावरणस्य सुरक्षा , अहम् , पठसि

- अनुजा - रमे ! त्वम् किम् [1]----- ?
रमा - [2]----- तु लेखं पठामि ।
अनुजा - लेखस्य [3]----- कः अस्ति ?
रमा - लेखस्य विषयः [4]----- अस्ति ।

प्रश्न 5 मञ्जूषायां प्रदत्तैः उचित अव्ययपदैः रिक्तस्थानानि पूरयत — ($\frac{1}{2} \times 4 = 2$)

यथा , मा , एकदा , प्राक्

- 1 ——— व्याधः वने आखेटाय अगच्छत् ।
2 ——— मर्यादापुरूषतम रामः नाम राजा आसीत् ।
3 ——— माता तथा पुत्रः भवति ।
4 कौलाहलं ——— कुरु ।

प्रश्न 6 अधोलिखितेषु रिक्तस्थानेषु प्रकृति प्रत्ययं संयोज्य वाक्यपूर्तिं कुरुत- ($\frac{1}{2} \times 2 = 1$)

- 1 अहम् गृहम् ——— (गम् + क्त्वा) विश्रामं करोति ।
2 काकः जलम् ——— (पा + तुमुन्) तत्परः भवन्ति ।

प्रश्न 7 रेखांकित पदम् आधृत्य प्रश्नं निर्मायताम् — ($\frac{1}{2} \times 2 = 1$)

- (1) परमेश्वरः सर्वत्र व्याप्तः ।
(2) कपोताः वृक्षे सन्ति ।

प्रश्न 8 शब्दानाम् अर्थः लिखत — ($\frac{1}{2} \times 4 = 2$)

आकृति , वायसः , कनकं , विस्मयः

प्रश्न 9 उचितपदं चित्वा रिक्तस्थानानि पूरयत —

($\frac{1}{2} \times 4 = 2$)

मञ्जूषा — अवलोक्य , विस्मयः , अवपातभयात्, जालमादाय

- (क) सर्वे एकचित्तीभूयः उड्डीयताम्।
(ख) जालापहारकान् तान् पश्चाद् अधावत्।
(ग) हिरण्यः कपोतानाम् चकितस्तूर्णी स्थितः।
(घ) यतीहि विपत्काले एव कापुरुषलक्षणम्।

परियोजना कार्य

प्रश्न 10 संस्कृत के श्लोक लिखकर दो सुंदर पुस्तक चिह्न (बुक मार्क) बनाइए।

($5 \times 1 = 5$)

Subject: Mathematics

General Instructions:

- 1) The work should be done neatly and systematically.
- 2) The given questions are to be done in the Math notebook.
- 3) Attempt all questions

No. of questions: 10

M.M. 25

Q1. Choose the correct option :

(1x2 =2)

- i) Find the missing number $7^5 = 1 \div \underline{\hspace{1cm}}$
 (a) 7 (b) 7^5 (c) 0 (d) 7^{-5}
- ii) What is the value of $(2^{11} + 6^2 - 5^2)^0 = ?$
 (a) 0 (b) -1 (c) 1 (d) None

Q2. Follow the pattern and complete:

(2)

Pattern	Complete
$121 = 11^2$	$1234321 = ?$
$12321 = 111^2$	$123454321 = ?$

Q3. Simplify : i) $(3^4 \times 3^2) \div 3^{-4}$

ii) $7^{-7} \times 7^{-5} \times 14^2$

(2)

Q4. Express the following large no's in its scientific notation:

(2)

- (a) 491264.33 (b) 9540000000000000

Q5. Express the following in usual form (a) 3.02×10^{-6}

(b) 5.8×10^{12}

(2)

Q6. If a 4-digit password can be made using 26 letters and 10 special characters, then find the total number of possible passwords .

(2)

Q7. Prove that :

(3)

$$\left[\left(\frac{1}{2} \right)^2 \right]^3 \times \left(\frac{1}{3} \right)^{-4} \times 3^{-2} \times \frac{1}{6} = \frac{3}{128}$$

Q8. A particular star is at a distance of about 8.1×10^{13} km from the Earth. Assuming that light travels at 3×10^8 m per second, find how long does light takes from that star to reach the Earth.

(3)

Q9. The number of books in a library increases by 5 times every 2 years. A library starts with 100 books. How many books will there be in the library after:

(3)

- (a) 6 years (b) 10 years

Q10. Activity : Angle sum property of quadrilateral (To be done in practical file)

(4)

Verify that sum of interior angles of a quadrilateral is 360° by paper cutting and pasting.

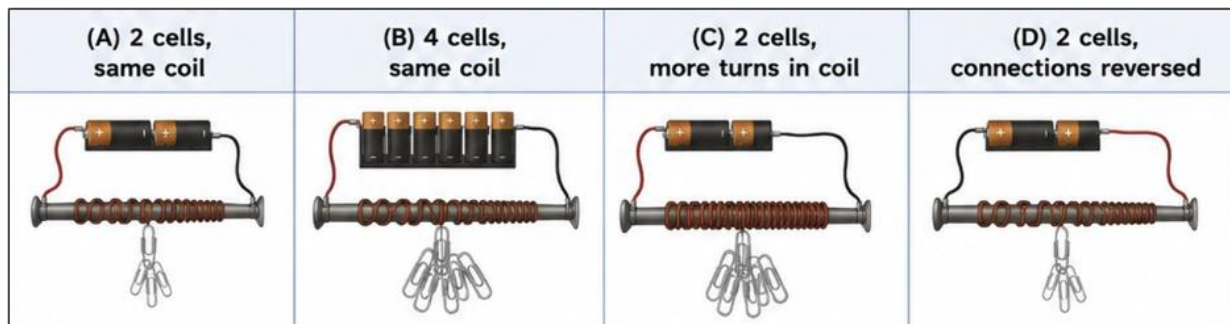
Std. VIII Worksheet 3



Q8. Magnetic levitation (Maglev) trains IN Japan move without touching the tracks. How do electromagnets help these trains move faster? State two advantages of using electromagnets in Maglev trains. (3)

Q9. A student made an electromagnet using an iron nail, insulated copper wire, paper clips, and batteries. He performed the following activities:

- (i) First, he increased the number of cells from 2 to 4 while keeping the same coil.
- (ii) Next, he kept the same 2 cells but increased the number of turns in the coil.
- (iii) Finally, he reversed the battery connections.



He observed that the electromagnet attracted more paper clips when the number of cells or turns increased. After reversing the battery terminals, the electromagnet still attracted paper clips, but the direction of the compass needle placed near it changed.

Answer the following questions:

- a) In which two situations did the electromagnet become stronger? Explain the scientific reason behind each observation. (2)
- b) Why did the compass needle change its direction when the battery terminals were reversed? (1)
- c) What conclusion can be drawn about the poles of an electromagnet when the direction of current is changed? (1)

Std. VIII Worksheet 3

Q10. Activity - Soak & Sort: Investigating the Science of Water Absorption in Everyday Materials. (5)

Aim:

To investigate and compare the water absorption capacity of different materials using the scientific method.

Materials Required:

Cotton, sponge, tissue paper, cloth, plastic sheet, dropper/spoon, water, flat plate

Scientific Journey of Investigation:

- Take equal-sized pieces of cotton, sponge, tissue paper, cloth and plastic sheet.
- Place all materials separately on a flat surface.
- Put equal drops of water (2–3 drops) on each material at the same time.
- Observe carefully which material absorbs water faster and more.
- Repeat the experiment three times for reliable results.
- Record observations in a table.

Observation Table:

Material	Water Absorption (High/Medium/Low/None)
Cotton	
Sponge	
Tissue Paper	
Cloth	
Plastic Sheet	

Scientific Method Followed:

Observation

Question

Hypothesis

Experiment

Data Recording

Conclusion

Answer the following questions:

- a) Why should all materials be of equal size and equal amount of water be used in this experiment? (1)
- b) Which material absorbed the most water and why do you think so? (1)
- c) Why does plastic not absorb water while cotton and sponge do? (1)
- d) If you increase the amount of water, will the results change? Justify your answer. (1)
- e) If you were asked to design the best material for a towel or mop, which material would you choose based on the activity and why? (1)

Subject: Social Science

General Instructions:

- **The work should be done neatly and in a systematic way.**
- **The given assignments are to be done fair notebook.**
- **Mention the number of worksheets while doing the work.**
- **Write all the questions along with the answers.**

No. of questions: 10

M.M. 25

Q1. India adopted Universal Adult Franchise after: (1)

- A) 1857
- B) Independence
- C) Emergency
- D) Partition

Q2. Identify the temple and state where it was built. (1)

- A) Vitthala temple at Hampi
- B) Surya temple at Konark
- C) Meenakshi Temple at Madurai
- D) Brihadeeswarar temple at Thanjavur

Q3. Which of the following is a renewable resource? (1)

- A) Coal
- B) Petroleum
- C) Solar energy
- D) Natural gas

Q4. A citizen reaches the polling booth without a voter ID card but has another identity proof. Should the person be allowed to vote? Why? (2)

Q5. How did Bairam Khan help Akbar in securing the Mughal Empire? (2)

Q6. How did Aurangzeb secure the Mughal throne? (2)

Q7. Rohan keeps the lights and fans switched on even when not in use. How does this affect natural resources? (2)

Q8. Explain the importance of Universal Adult Franchise in India. (3)

Q9. Write a short note on Kumbhalgarh Fort. (3)

Q10. Why are natural resources called the “treasures of Earth”? (3)

Std. VIII Worksheet 3

Project Work-

(5)

“Resource Hunt at Home”

Aim:

To identify natural resources used in daily life and understand their importance.

Materials Required:

- Notebook/chart paper
- Pen or pencil

Procedure:

1. Observe your home for one day.
2. Make a list of things you use daily.
3. Identify the natural resource used to make or run them.
4. Write whether the resource is renewable or non-renewable.

Observation Table:

Item Used	Natural Resource	Renewable/Non-renewable
Notebook	Trees	Renewable

Add 8–10 examples.

Conclusion:

Write 4–5 lines on:

- Which resources are used the most at home?
- Why should we conserve them?
- What steps can we take to reduce wastage?

Subject: Computer Science

General Instructions:

- 1) The work should be done neatly and systematically.
- 2) The given questions should be completed in the Computer Science notebook.
- 3) All questions are compulsory.
- 4) Write only answers.

Choose the correct option.

(1x5=5)

1. What does SDG stand for?

A. Sustainable Development Goals	B. Social Development Goals
C. Scientific Development Growth	D. Social Duty Goals
2. How many Sustainable Development Goals are there?

A. 10	B. 15	C. 17	D. 20
-------	-------	-------	-------
3. Which organization introduced the SDGs?

A. WHO	B. UNESCO	C. United Nations	D. UNICEF
--------	-----------	-------------------	-----------
4. Which SDG focuses on ending poverty?













A. Goal 1	B. Goal 5	C. Goal 10	D. Goal 15
-----------	-----------	------------	------------
5. Which SDG is related to quality education?

A. Goal 2	B. Goal 4	C. Goal 8	D. Goal 12
-----------	-----------	-----------	------------
6. Which SDG aims to reduce inequalities?

A. Goal 4	B. Goal 8	C. Goal 10	D. Goal 15
-----------	-----------	------------	------------

7. Name the following Sustainable Development Goals.

(1x12=12)

i 	ii 	Iii 	iv 	v 	vi 
vii 	viii 	ix 	x 	xi 	xii 

Answer the following questions.

8. What is SDG? (2)
9. What can we do to protect the environment? (2)
10. Mention any two aims for the following Sustainable Development Goals. (4)

a) Goal 4	b) Goal 10
-----------	------------

Subject: Elementary Math(For students with special needs)

General Instructions:

- 1) The work should be done neatly and systematically.
- 2) The given questions are to be done in the Math notebook.
- 3) Attempt all questions.

Q1 Choose the correct option: (1×4)

(i) Four thousand multiplied by two hundred = -----
a) 80,000 b) 8,000 c) 8,00,000 d) None

(ii) The remainder in $367 \div 6 =$ -----
a) 1 b) 10 c) 11 d) 0

(iii) $99,999 \times 0 =$ -----
a) 99,999 b) 0 c) 100000 d) None

(iv) The quotient in $63 \div 7 =$ -----
a) 7 b) 60 c) 8 d) 9

Q2 Multiply the following numbers (1x3)

- I. 6619×25
- II. 20032×16
- III. 3058×45

Q3 Divide the following: (1×3)

- I. 198 by 4
- II. 252 by 8
- III. 858 by 6

Q4 Find the product of 999 and 99. (2×1)

Q5 A farmer plants 635 rice plants in one row. How many plants are there in the field if there are 503 rows? (2×1)

Q6 144 mangoes are packed in a carton. How many cartons are required to pack 34992 mangoes? (2×1)

Q7 Rs. 4386 was given to each of the 807 workers as their wages. How much total money was given to the workers? (2×1)

Std. VIII Worksheet 3

- Q8 How many drums of capacity 105 litre can be filled with 35070 litre water? (2×1)
- Q9 Find the product of $2891 \times 15 \times 39$. (2x1)
- Q10 Collect contact numbers of your 8 family members and rewrite the numbers in Indian system. (3x1)