

St. Mary's School, Dwarka

Practice Worksheet

Class: II

Subject: English

Topic: L-2, Bukka Learns a Lesson

Name: _____ Sec: _____ Date: _____ Roll No: _____

1. Read the passage and answer the following questions.

Snoopy was a tiny firefly who lived in the Whispering Woods, a large and dark forest. While all his friends like Glo and Zappy loved to fly at night and show off their bright lights. Snoopy was afraid of the dark. He kept his light turned off and stayed hidden under a big green leaf. One night, a little owl named Percy lost its way home. The forest was so dark that Percy could not see the branches. Snoopy saw the sad owl and knew he had to help him. He took a deep breath and turned on his light. It shone like a tiny golden star! Snoopy flew ahead of Percy, lighting the path all the way to the owl's nest in the Old Banyan tree. Snoopy wasn't afraid anymore because he knew his light was helpful.

a) Who was Snoopy and where did he live?

b) Where did Snoopy hide?

c) Who helped Percy to show the way? Write the name and colour the picture.

d) Why was Snoopy not afraid anymore?



e) Find out two common nouns and two proper nouns from the passage.

Common nouns

Proper nouns

_____ , _____

_____ , _____

2. Answer the following questions.

a) Who did all the animals complain to?

b) How did Bukka react to his elders' advice?

c) What lesson did Bukka learn?

3. Complete the sentences using the correct form of a, an, or the.

- a) She has ___ red pen.
- b) My father is ___ honest man.
- c) ___ Taj Mahal is very beautiful.
- d) He is ___ captain in ___ army.

4. Fill in the blanks with the correct form of the words in the brackets.

- a) We have five _____ in one hand. (finger, fingers)
- b) I got many _____ on my birthday. (wish/wishes)
- c) All my _____ are broken. (toy/toys)

5. Observe the picture carefully and write five sentences using the words given in the help box.

flowers, girl, frock, happy, garden, plants, butterflies



St. Mary's School, Dwarka
Practice Worksheet
Class: II
Subject: Hindi

विषय : पाठ, आसमान गिरा

Name: _____ Sec: _____ Date: _____ Roll No: _____

1. नीचे दिए गए गद्यांश को पढ़कर प्रश्नों के उत्तर दीजिए-

सुबह का समय था अमन बिस्तर से उठा और नल खोलकर मंजन करने लगा। वह काफी देर से मंजन कर रहा था। लेकिन फिर भी उसने नल बंद नहीं किया। देखते ही देखते टंकी का सारा पानी खत्म हो गया। जब पानी दोबारा इस्तमाल करने का समय आया तो नल से पानी ही नहीं आया। तब वह अपने दादाजी के पास गया और बोला दादाजी नल में पानी नहीं आ रहा। तब उसके दादाजी ने समझाया कि हमको कभी भी पानी बरबाद नहीं करना चाहिए। ज़रूरत ना पड़ने पर हमको नल बंद ही रखना चाहिए।

क) अमन सुबह उठकर क्या करने लगा?

ख) टंकी का सारा पानी क्यों खत्म हो गया था?

ग) दादाजी ने अमन को क्या समझाया?

घ) गद्यांश में से दिए गए शब्दों के मिलते - जुलते शब्द ढूंढकर लिखिए-

i) _____ ii) _____

2. दिए गए प्रश्नों के उत्तर लिखिए-

क) जब चूड़ा पेड़ के नीचे लेटा था, तब क्या हुआ था?

ख) शेर ने किसको डांटा और क्यों?

3. दिए गए शब्दों के समान तुक वाले शब्द लिखिए

क) खोटा — _____ ग) पानी — _____

ख) सहारा — _____ घ) ताली — _____

4. दिए गए शब्दों के उल्टे अर्थ वाले शब्द लिखिए-

क) सफ़ेद — _____

ख) तेज़ — _____

ग) कच्चा — _____


घ) सस्त — _____

5. नीचे दिए गए वाक्यों में संज्ञा शब्द को रेखांकित कीजिए-

क) राधा कल मुंबई जाएगी।

ख) मेरा पिताजी एक बिल्ली लाए।

6. दिए गए शब्दों की सहायता से चित्र को देखकर पाँच वाक्य लिखिए-



St. Mary's School, Dwarka
Practice Worksheet
Class: II
Subject: Mathematics

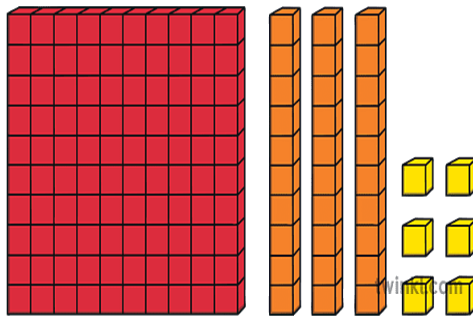
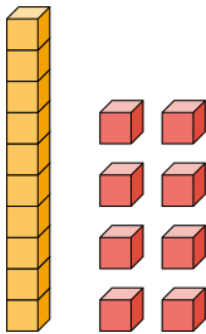
Topic: Chapter-2, Addition and Subtraction

Name: _____ **Sec:** _____ **Date:** _____ **Roll No:** _____

1. Fill in the blanks by counting the hundreds, tens and ones blocks.

a) ___ tens ___ ones = _____

b) ___ hundreds ___ tens ___ ones = _____



2. Add the following.

a) $300 + 200 =$ _____

H	T	O
3	0	0
+	2	0

b) $625 + 173 =$ _____

H	T	O
6	2	5
+	1	7

c) $657 + 330 =$ _____

H	T	O
6	5	7
+	3	3

d) $597 + 318 =$ _____

H	T	O
5	9	7
+	3	1

e) $286 + 437 =$ _____

H	T	O
2	8	6
+	4	3

f) $295 + 407 =$ _____

H	T	O
2	9	5
+	4	0

3. Subtract the following.

a) $683 - 422 = \underline{\hspace{2cm}}$

	H	T	O
	6	8	3
-	4	2	2
<hr/>			
<hr/>			

b) $794 - 384 = \underline{\hspace{2cm}}$

	H	T	O
	7	9	4
-	3	8	4
<hr/>			
<hr/>			

c) $951 - 901 = \underline{\hspace{2cm}}$

	H	T	O
	9	5	1
-	9	0	1
<hr/>			
<hr/>			

d) $467 - 277 = \underline{\hspace{2cm}}$

	H	T	O
	4	6	7
-	2	7	7
<hr/>			
<hr/>			

e) $965 - 191 = \underline{\hspace{2cm}}$

	H	T	O
	9	6	5
-	1	9	1
<hr/>			
<hr/>			

f) $748 - 63 = \underline{\hspace{2cm}}$

	H	T	O
	7	4	8
-		6	3
<hr/>			
<hr/>			

4. There are 968 students in a school. 395 of them wear glasses. How many students do not wear glasses?

--

5. Javed has 410 Singapore stamps. He has 56 Indian stamps. How many stamps does he have altogether?

--

St. Mary's School, Dwarka
Practice Worksheet Class: II
Subject: Language Practice

Topic :- Ch- 2, Food

Name: _____ Sec: ____ Date: _____ Roll No: _____

1. Choose the correct answer and fill in the blanks.

- a) We should eat _____ food.
i) fresh ii) waste iii) stale
- b) Jam is made up of _____.
i) vegetable ii) fruits iii) pulses
- c) Always wash fruits and vegetable _____ eating.
i) before ii) after iii) between
- d) People who do not eat dairy products are called _____.
i) vegetarian ii) non- vegetarian iii) vegan
- e) A _____ grows crops.
i) doctor ii) farmer iii) teacher

2. Fill in the blanks using the words given below.

water, diseases, energy, three, wheat

- a) Healthy food protects us from _____.
- b) Food gives us _____ to work and play.
- c) We make chapati with _____ flour.
- d) We eat _____ meals in a day.
- e) We should drink plenty of _____.

3. Write 'T' for true and 'F' for false statements.

- a) Vegetarians eat meat and chicken. _____
- b) A dosa is made of grains and pulses. _____
- c) We should drink aerated drinks every day. _____
- d) We should not waste food. _____
- e) Junk food makes us healthy. _____
- f) Breakfast is the first meal of the day. _____
- g) Eating stale food is unhealthy. _____

4. Fill in the missing letters of the given words.

- a) ___i___e a _____l e
- b) s ___r___w ___e r ___y
- c) c ___p ___i c ___m
- d) b ___t t ___r g _____r d
- e) m ___s h r _____m

5. Draw and label any two healthy food items that give us energy



St. Mary's School Dwarka
Practice Worksheet
Class: II
Subject: Computer Science

Topic: L-8, Understanding AI

Name: _____ **Section:** _____ **Roll No:** _____ **Date:** _____

1. Write T for true statements and F for false statements.

- a. Intelligence decision is based on data. []
- b. Artificial intelligence is the ability of a machine to walk. []
- c. The normal machine and AI-enabled machine are different. []
- d. The name of Google's AI is Google Nest. []
- e. AI is used in games to maintain player's balance. []
- f. AI stands for Artificial Imagination. []

2. Fill in the blanks with the correct word from the bracket.

- a. _____ the ability to understand and deal with changing situations.
(Intelligence/Artificial)
- b. AI is the ability of machine to copy human _____. (behavior/intelligence)
- c. A normal machine is fed with _____. (ice-cream/instructions)
- d. AI develops human _____ and behavior. (understanding/artificial)
- e. Artificial Intelligence is a machine's ability to _____ human intelligence.
(increase/decrease)
- f. The name of Amazon's AI is _____. (siri/ alexa)

3. Fill in the boxes.

- a. A smart music system with AI play music.

G		O	G		
---	--	---	---	--	--

	E		T
--	---	--	---

b. I am Apple's AI digital assistant.

S			I
---	--	--	---

c. I am an online video sharing platform.

Y			T		B	
---	--	--	---	--	---	--

d. An AI machine used in a movie.

T		R	M			A			R
---	--	---	---	--	--	---	--	--	---

4. Given below are 6 examples. Put a tick (✓) if it is example of AI and cross (✗) if it is not AI.

1. A Digital clock showing the current time	
2. A Smartphone that suggests words while you type a message	
3. A mobile that suggests cartoons based on what you have watched before	
4. A calculator doing math when you entered number	
5. Alexa playing your favorite song	
6. Video games such as racing and shooting	

5. Answer the following questions.

a. What is Artificial Intelligence?

b. Krishna has a CD. She wants to play the music during the annual function at his school. Will he need a normal music system or a smart music system?
