

St. Mary's School, Dwarka

Practice Worksheet

Class: V

Subject: English

Name: _____ **Sec:** _____ **Date:** _____ **Roll No.** _____

Topic: L-2, Prose: Thunder Cake

Read the following passage and answer the questions that follow.

Butterflies are among the most beautiful insects found in nature. They have colourful wings with different patterns that make them look attractive. Butterflies are usually seen flying around flowers in gardens, parks, and forests. They begin their life as tiny eggs, which later turn into caterpillars. After some time, the caterpillar forms a chrysalis and slowly changes into a butterfly. This process is called metamorphosis. **(Para 1)**

Butterflies play an important role in nature. They help in pollination by carrying pollens from one flower to another while collecting nectar. This helps plants grow and produce fruits and seeds. Butterflies usually feed on flower nectar, but some also drink water from wet soil. They are active during the daytime and rest at night on leaves or branches. **(Para 2)**

Many people enjoy watching butterflies because of their bright colours and graceful movements. Butterfly parks and gardens are created in many places to protect them. However, pollution and cutting down plants are reducing butterfly populations. Planting more flowers and protecting green spaces can help butterflies survive and thrive. **(Para 3)**

a) What is the process of changing from a caterpillar into a butterfly called?

- i) migration ii) pollination iii) metamorphosis iv) hibernation

b) How do butterflies help plants?

- i) By eating leaves ii) By spreading pollens iii) By cutting branches iv) By making nests

c) Why are butterflies important for flowers and plants?

d) What should people do to help butterflies survive?

e) Find the word from the passage that means the same as 'interesting'. **(Para 1)**

- i) tiny ii) attractive iii) gentle iv) active

2. Fill in the blanks with the correct options given in the brackets.

- a) We prepared the decorations by _____. (ourselves/themselves)
- b) Aman taught _____ to ride a bicycle. (himself/yourself)
- c) The kitten cleaned _____ after eating. (itself/herself)
- d) You should organise your bag by _____. (yourself/himself)
- e) The children enjoyed _____ during the picnic. (themselves/ourselves)
- f) I baked the cookies by _____. (myself/herself)
- g) The horse hurt _____ while running fast. (itself/himself)
- h) Riya completed the drawing by _____. (herself/ourselves)

3. Answer the following questions.

- a) What did Grandma do when the storm approached?

- b) How did collecting ingredients help the little girl?

4. Read the given lines and answer the following questions.

Don't pay attention to that old thunder, except to see how close the storm is getting. When you see lightning, start counting...real slow. When you hear the thunder, stop counting. That number is how many miles away the storm is.

- a) Who said this to whom?

- b) What did Grandma ask the girl to do when she saw lightning?

5. Imagine you are the narrator from the story. Write a paragraph about how the Thunder Cake changed your feelings about thunderstorms.

St. Mary's School, Dwarka
Practice Worksheet
Class: V
Subject: Hindi

Name: _____ Sec: _____ Date: _____ Roll No. _____

उपविषय: पाठ 3 होनहार बिरवान के होत चीकने पात और कविता लहरों का गीत

1. निम्नलिखित गद्यांश को पढ़कर, दिए गए प्रश्नों के सही उत्तर चुनिए / लिखिए।

हर वर्ष 5 जून को विश्व पर्यावरण दिवस मनाया जाता है। इस दिन लोगों को पर्यावरण की सुरक्षा और स्वच्छता के प्रति जागरूक किया जाता है। पेड़-पौधे, जल, वायु और मिट्टी हमारे जीवन के लिए बहुत आवश्यक हैं। यदि पर्यावरण स्वच्छ रहेगा, तो हम स्वस्थ और खुश रहेंगे।

आजकल बढ़ते प्रदूषण के कारण पृथ्वी को बहुत नुकसान हो रहा है। नदियाँ गंदी हो रही हैं, पेड़ काटे जा रहे हैं और हवा भी दूषित हो रही है। कई जानवरों और पक्षियों का जीवन भी संकट में पड़ गया है। यदि हम समय रहते पर्यावरण की रक्षा नहीं करेंगे, तो आने वाली पीढ़ियों को अनेक कठिनाइयों का सामना करना पड़ेगा।

इसलिए हमें अधिक से अधिक पेड़ लगाने चाहिए, पानी की बचत करनी चाहिए और प्लास्टिक का कम उपयोग करना चाहिए। हमें अपने आसपास सफाई रखनी चाहिए और कूड़ा हमेशा कूड़ेदान में डालना चाहिए। छोटे-छोटे प्रयास मिलकर बड़े बदलाव ला सकते हैं।

विद्यालयों में भी विश्व पर्यावरण दिवस पर रैली, पोस्टर प्रतियोगिता, भाषण और वृक्षारोपण जैसे कार्यक्रम आयोजित किए जाते हैं। बच्चे इस दिन यह संकल्प लेते हैं कि वे प्रकृति की रक्षा करेंगे, बिजली और पानी व्यर्थ नहीं बहाएँगे तथा अपने आसपास हरियाली बढ़ाने में सहायता करेंगे।

क) विश्व पर्यावरण दिवस कब मनाया जाता है?

i) 1 जून

ii) 15 जून

iii) 10 जून

iv) 25

जून

ख) हमारे जीवन के लिए क्या आवश्यक है?

i) केवल जल

ii) जल, पेड़ पौधे और मिट्टी

iii) केवल मिट्टी

iv) केवल पेड़

ग) विश्व पर्यावरण दिवस के दिन पर बच्चे क्या संकल्प लेते हैं?

i) खेल खेलने का

ii) यात्रा करने का

iii) प्रकृति की रक्षा करने का

iv) टीवी देखने का

घ) विश्व पर्यावरण दिवस क्यों मनाया जाता है?

ड) छोटे-छोटे प्रयास कैसे बड़े बदलाव ला सकते हैं?

2. निम्नलिखित प्रश्नों के उत्तर लिखिए ।

क) राजा धनानंद ने अपने राज्य के लोगों की परीक्षा कैसे ली?

ख) कविता 'लहरों के गीत से हमें क्या शिक्षा मिलती है?

3. नीचे दिए गए शब्दों के सही लिंग रूप लिखकर रिक्त स्थान भरिए ।

क) लडका - _____ ख) _____ - रानी ग) _____ -अध्यापक घ) _____ -

गायक

4. नीचे दिए गए वाक्यों में रेखांकित शब्दों के उचित पर्यायवाची शब्द लिखकर वाक्य दोबारा लिखिए ।

क) रवि आकाश में चमक रहा है ।

ख) वन में अनेक पशु रहते हैं ।

ग) नभ में बादल छाए हुए हैं ।

घ) पुष्पों की खुशबू मन को प्रसन्न करती है ।

5. नीचे दिए गए वाक्यों को सही विराम चिह्न लगाकर दोबारा लिखिए ।


क) अरे वाह कितना सुंदर चित्र है

ख) आज हमें फल सब्जियाँ और दूध खरीदना है

ग) पेड़ पौधे हमें शुद्ध वायु देते हैं

घ) क्या तुमने अपना गृहकार्य पूरा किया

6. 'मेरा हस्ति विद्यालय' विषय पर चित्र बनाइए। चित्र के आधार पर लिखिए कि विद्यालय को स्वच्छ रखने के लिए बच्चे क्या कर सकते हैं।



St. Mary's School, Dwarka

Practice Worksheet

Class: V

Subject: Mathematics

Topic: Ch-2, Multiplication and Division of Whole Numbers

Name: _____ Sec: _____ Date: _____ Roll No. _____

1. Choose the correct options for the following.

a) $30,000 \times 3 =$ _____

- i) 9,000 ii) 90,000 iii) 90,900 iv) 900

b) $88 \times 80 = 88 \times 10 \times$ _____ .

- i) 8 ii) 80 iii) 10 iv) 18

c) Ruhi wants to buy buttons for her dress. Each packet of buttons costs ₹ 240. What will be the cost of ten such packets?

- i) ₹ 2040 ii) ₹ 4200 iii) ₹ 2400 iv) ₹ 24000

d) What will be the value of $140 \div 10$?

- i) 4 ii) 40 iii) 10 iv) 14

e) _____ is the value of 1000×380 .

- i) 380,000 ii) 308,000 iii) 3800 iv) 38,000

f) $3,00,000 \div 6000 = 3,00,000 \div 1000 \div 6 =$ _____

- i) 5000 ii) 50 iii) 5 iv) 500

g) Assertion (A): A shopkeeper estimated 3970×52 as 4000×50 to quickly find the approximate total cost of boxes.

Reason (R): Estimation helps us find a close answer by rounding numbers to the nearest tens, hundreds or thousands before multiplying or dividing.

- a) Both A and R are true, and R is the correct explanation of A.
b) Both A and R are true, but R is not the correct explanation of A.
c) A is true, but R is false.
d) A is false, but R is true.

2. Fill in the blanks.

a) The value of $50,00,000 \div 100$ is _____.

b) $670 \times 180 = 180 \times$ _____

c) _____ $\times 4612 = 0$

d) $4,578 \approx$ _____ (Round to the nearest hundred)

e) Juhi customised a bouquet. Each flower costed ₹ 20. If she used 50 such flowers for the bouquet, she paid _____ altogether.

f) $747 \times \underline{\hspace{2cm}} = 7,470,000$

g) $34 + 55 = 30 + 4 + 5 + \underline{\hspace{2cm}}$

4. Estimate the value of each of the following.

a) $54,920 \div 63$	b) 84×6089
c) $71,580 \div 92$	d) 789×36

5. Ms. Sharma paid ₹ 890 for 28 kilograms of apples. Estimate the cost per kilogram.


6. Aahan has 4,790 books in his library. He arranged them equally on 10 shelves. Each book has 112 pages.

a) How many books are arranged on one shelf?

b) Estimate the total number of pages in all the books.



7. A farmer stored 3,214 potatoes in each warehouse. If there are 13 warehouses and 4075 more potatoes were added later, how many potatoes are there altogether?



St. Mary's School, Dwarka

Practice Worksheet

Class: V

Subject: EVS

Topic: L-6, Senses in Animals

Name: _____ **Sec:** _____ **Date :** _____ **Roll No.** _____

1. Choose the correct options for the following.

a) Which animal can locate food with the help of its sense of smell?

- i) owl ii) dog iii) bat iv) fish

b) _____ gives alarm calls from treetops when they spot predator.

- i) leopard ii) owls iii) chimpanzees iv) monkeys

c) Which part of a butterfly's body is used for drinking nectar?

- i) proboscis ii) antennae iii) whiskers iv) teeth

d) Which ability helps a cat notice danger nearby?

- i) whiskers ii) hair iii) tail iv) skin

e) **Assertion:** Owls are nocturnal animals.

Reasoning: Owls are active mainly during the night.

i) Both assertion and reasoning are correct, and the reasoning is the correct explanation of the assertion.

ii) Both assertion and reasoning are correct, but the reasoning is not the correct explanation of the assertion.

iii) The assertion is correct, but the reasoning is incorrect.

iv) The assertion is incorrect, but the reasoning is correct.

2. Fill in the blanks.

a) Chimpanzees express their emotions through _____ .

b) The state of being asleep during winters is called _____ .

c) A cat's _____ is about 15 times stronger than that of humans.

d) Insects such as houseflies have _____ eyes that consist of many tiny lenses.

3. Answer the following questions.

a) While soaring high above the mountains, an eagle spotted a tiny fish swimming near the surface of a river. It quickly dived down and caught the fish with its sharp claws. How did the eagle catch the fish after spotting it from high above the mountains?

b) Rashmi visited a cave and noticed that bats were flying easily in complete darkness without bumping into walls. She wondered how the bats were able to move safely at night. How do bats find their way in the dark?

c) Animals like polar bears hibernate in winter, while animals like crocodiles aestivate in summer. What might be the reason behind these different sleep behaviours?

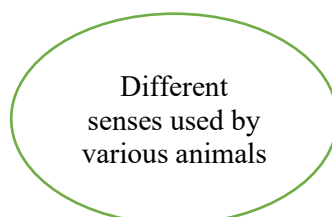
4. Read the given case study and answer the following questions that follow.

In a dense forest, animals use different ways to stay safe and communicate. Monkeys give loud alarm calls from the treetops when they see a predator like a tiger or leopard.

Interestingly, the alarm sounds are different depending on which predator is seen. Birds use special sounds such as trills, pops, and squeaks to alert others or share messages. Honeybees perform a waggle dance to tell other bees where to find food.

a) If a honeybee is moving in circles and performing a waggle dance in front of other bees. What could be the reason for this behaviour and how does it help the hive?

5. Make a G.O. showing the different senses used by various animals.



St. Mary's School, Dwarka
Practice Worksheet
Class: V
Subject: Computer Science

Topic: L-6, Google Apps

Name: _____ **Sec.:** _____ **Roll No.** _____ **Date:** _____





1. Fill in the blanks.

- a) The act of publishing a blog is called _____.
- b) In GPS, P stands for _____.
- c) _____ was founded in the year 1998.
- d) Google Meet is used for _____ communication.

2. Read the sentence and answer the following questions.

- a) A virtual assistant developed by Google. _____
- b) A Linux-based operating system designed to work with web apps. _____
- c) A security camera developed by Google. _____
- d) A free online translation service instantly translates text into other languages. _____
- e) An interactive mapping program that covers the vast area of the Earth. _____

3. Identify the icon and write their name.

- | | |
|--|---|
| a)  _____ | b)  _____ |
| c)  _____ | d)  _____ |

4. Write the use of the following.

- a) Google Blogger

b) Google Spreadsheet-

5. Answer the following questions

a. Name two google devices.

b. How does Google Assistant make life easier? Give two examples.

6. Read the given lines and answer the following questions.

Riya is a Class 5 student who is preparing a school project with her friends. She uses Google Docs to write her project and Google Slides to prepare a presentation. She saves her work in Google Drive so she can access it anytime. Her teacher conducts classes on Google Meet and shares assignments through Google Classroom. Riya uses Google Calendar to remember important dates. During a trip, she uses Google Maps to find directions, and at home she stores photos in Google Photos. She also uses Google Assistant to set reminders using her voice.

i) Why is Google Drive important for Riya's project?

- a) It helps her play games
- b) It stores files safely and allows access anywhere
- c) It helps her draw pictures
- d) It sends emails

ii) If Riya did not use Google Calendar, what problem might she face?

- e) She cannot write documents
- f) She may forget important dates
- g) She cannot watch videos
- h) She cannot search the internet

iii) Which comparison is correct?

- i) Google Docs is for navigation; Maps is for writing
- j) Google Docs is for writing; Maps is for directions
- k) Both are used for games
- l) Both are used only for videos