



**ASSIGNMENT NO. 1**

**SUBJECT: ENGLISH**

**CLASS- III \_\_\_\_\_**

**APRIL, 2026**

**NAME: \_\_\_\_\_**

**DATE: \_\_\_\_\_**

**LITERATURE**

**CH 1: BIRBAL IDENTIFIES THE THIEF**

**Q1. What trick did Birbal use to find out the real thief?**

---

---

---

---

---

---

**Q2. What lesson do we learn from the story “Birbal Identifies the Thief”?**

---

---

---

**Q3. Who said these words to whom in the story?**

a. What is the matter, Vikram Veer?

\_\_\_\_\_ said these words to \_\_\_\_\_.

b. Get a donkey to the court and tie it to the pillar.

\_\_\_\_\_ said these words to \_\_\_\_\_.

c. Jahanpanah, Alim Khan is the thief!

\_\_\_\_\_ said these words to \_\_\_\_\_.

## POEM 1: LIMERICKS

**Q4. Why do you think the poem makes us laugh?**

---

---

---

**Q5. What is special about the ending of a limerick?**

---

---

**Q6. Who wrote the limericks in this poem?**

---

---

---

---





## ASSIGNMENT NO. 2

SUBJECT: ENGLISH

CLASS- III \_\_\_\_\_

APRIL, 2026

NAME: \_\_\_\_\_

DATE: \_\_\_\_\_

### GRAMMAR

#### TOPIC- NOUNS- COLLECTIVE AND ABSTRACT

#### Q1. Fill in the blanks with the appropriate collective noun.

- a) A \_\_\_\_\_ of birds flew across the sky.
- b) The \_\_\_\_\_ of students are waiting for the bus.
- c) A \_\_\_\_\_ of lions roared loudly in the jungle.
- d) The \_\_\_\_\_ of trees looked beautiful in the park.
- e) A \_\_\_\_\_ of musicians played beautiful music at the concert.
- f) The fisherman watched a \_\_\_\_\_ of fish swimming in the river.
- g) A \_\_\_\_\_ of bees was buzzing around the flowers.
- h) The sailors worked together as a \_\_\_\_\_ of sailors on the ship.

#### Q2. Form abstract nouns from the words in brackets and fill in the blanks.

- a) Once upon a time, there was a knight known for his \_\_\_\_\_ (brave) who went on a quest. His \_\_\_\_\_ (strong) made him a hero in the kingdom. He was known for his \_\_\_\_\_ (honest) and \_\_\_\_\_ (courage). People admired his \_\_\_\_\_ (bold) to the king.

b) Riya and Meena are best friends. Their \_\_\_\_\_ (friend) makes them very happy. They always show \_\_\_\_\_ (kind) to everyone in the class. The teacher praises their \_\_\_\_\_ (wise) to handle the problems in the class. When they win a game, they feel great \_\_\_\_\_ (proud). They also learn to have \_\_\_\_\_ (patient) while waiting for their turn. They set a good example for others.



## ASSIGNMENT NO. 3

**SUBJECT: ENGLISH**

**CLASS- III \_\_\_\_\_**

**APRIL, 2026**

**NAME: \_\_\_\_\_**

**DATE: \_\_\_\_\_**

### READING

**Q1. Read the passage given below carefully and answer the following questions.**

Baby elephants are different from human babies. A baby elephant is called a calf. A calf is very big when it is born. It weighs more than a grown human. A calf drinks its mother's milk for up to ten years. A calf also eats plants when it is a few months old. A calf may suck water using its trunk. It loves to stay close to its mother and feels safe with her. Baby elephants are playful and enjoy moving around in groups with other elephants.

A. What does a baby elephants drink?

- i. Juice
- ii. Teas
- iii. Milk

B. What do baby elephants use to suck water?

- i. Legs
- ii. Trunk
- iii. Mouth

C. How is a baby elephant different from a human baby?

---

---

D. Why does a baby elephant stay close to its mother?

---

---

E. What does a calf eat when it is a few months old?

---

---

F. Write the antonym of the word “less” from the passage.

---

G. Write the synonym of the word “near” from the passage.

---





# Brain International School

Vikas Puri, New Delhi

अभ्यास पत्र -1

विषय: हिंदी

कक्षा -तीन -----

अप्रैल,2026

नाम - -----

दिनांक - -----

पाठ्यपुस्तक : पाठ-1 सीखो

प्रश्न 1 निम्नलिखित प्रश्नों के उत्तर लिखिए -



(क) 'फूलों से नित हँसना सीखो' का क्या अर्थ है ?

-----  
-----

(ख) हमें सच्ची सेवा करने की सीख कौन देता है ?

-----  
-----

प्रश्न 2 समान तुक वाले शब्द लिखिए -

(क) जगाना - -----

(ग) चढ़ना - -----

(ख) नानी - -----

(घ) फँसना - -----

प्रश्न 3 मिलते-जुलते अर्थ वाले दो-दो शब्द लिखिए -



(क) पेड़ - -----



(ख) दीपक - -----

**व्याकरण : पाठ-1 भाषा**

**प्रश्न 4 रिक्त स्थान भरिए -**

(क) लिखना व पढ़ना भाषा का ----- रूप है |




(ख) फ्रेंच भाषा की लिपि ----- है |

(ग) 'पंजाब' राज्य की भाषा ----- है |

**चित्र वर्णन**

**प्रश्न 5 निम्नलिखित चित्र का वर्णन 40-50 शब्दों में कीजिए -**



-----

-----

-----

-----

-----

-----

-----

-----

-----

-----

-----



# Brain International School

Vikas Puri, New Delhi

## अभ्यास पत्र -2

विषय: हिंदी

कक्षा -तीन -----

अप्रैल,2026

नाम - -----

दिनांक - -----

पाठ्यपुस्तक : पाठ-3 कितने पैर ?

प्रश्न 1 निम्नलिखित प्रश्नों के उत्तर लिखिए -



(ग) कंगारू अपने पेट में बनी थैली का उपयोग कैसे करता है ?

-----  
-----

(घ) केंचुएँ कैसे चलते हैं ?

-----  
-----

प्रश्न 2 रिक्त स्थान भरें -

(क) केंचुआ ----- के बल सरकता है ।



(ख) कंगारू ----- देश में पाए जाते हैं ।

(ग) मनुष्य द्विपाद कहलाता है क्योंकि इसके ----- पैर होते हैं ।

प्रश्न 3 किसने कहा, किससे कहा -



“मुझे चींटी को देखने में बड़ा आनंद आता है ।” -----

## व्याकरण : पाठ-2 वर्ण और वर्णमाला

प्रश्न 4 निम्न वर्ण किन-किन वर्णों के मेल से बने हैं ? -

(क) क्ष - ----- + ----- + -----

(ख) त्र - ----- + ----- + -----

प्रश्न 5 समान ध्वनि वाले दो-दो शब्द लिखिए -

(क) सच्चा - -----

(ख) रद्दी - -----

## अपठित गद्यांश

प्रश्न 6 निम्नलिखित गद्यांश को पढ़कर पूछे गए प्रश्नों के उत्तर दीजिए -

महात्मा बुद्ध एक बार भिक्षा माँगने जा रहे थे। रास्ते में उन्हें एक घर दिखाई दिया। घर की मालकिन झगड़ालू थी। उन्हें भिक्षा माँगते देख वह उन्हें अपशब्द कहने लगी, किंतु महात्मा बुद्ध शांत भाव से उसकी बातें सुनते रहे। उनके शांत चेहरे को देख उसका क्रोध दोगुना हो गया। जब वह कुछ शांत हुई, तो उन्होंने उस स्त्री से पूछा, “यदि मैं आपका दिया भोजन स्वीकार न करूँ तो वह भोजन किसके पास रहेगा?” वह स्त्री बोली, “मेरे पास ही रहेगा।” महात्मा बुद्ध मुस्कुराए और बोले - “यदि मैं आपके द्वारा बोले गए अपशब्दों को स्वीकार न करूँ तो क्या होगा?” यह सुनकर वह स्त्री बहुत शर्मिंदा हुई और उसने भगवान बुद्ध से क्षमा माँगी।

(क) महात्मा बुद्ध किस काम से जा रहे थे ?

(i) भ्रमण करने (ii) भिक्षा माँगने (iii) उपदेश देने (iv) तप करने

(ख) घर की मालकिन कैसी थी ?

(i) शांत (ii) झगड़ालू (iii) मितभाषी (iv) धैर्यवान

(ग) महात्मा बुद्ध मुस्कुराते हुए क्या बोले ?

-----  
-----

(घ) उपर्युक्त गद्यांश से कोई दो संयुक्त व्यंजन छाँटकर लिखिए।

-----

(ङ) ‘स्त्री’ शब्द का कोई एक पर्यायवाची शब्द लिखिए।

-----



**CH -1 NUMBERS AND NUMERATION**

**ASSIGNMENT NO. 1**

**SUBJECT: MATHEMATICS**

**CLASS -III \_\_\_\_**

**APRIL,2026**

**NAME: \_\_\_\_\_**

**DATE: \_\_\_\_\_**

**Q1) MENTAL MATHS**

- a) The place value of 6 in 4657 is \_\_\_\_\_.
- b) The predecessor of 5380 is \_\_\_\_\_.
- c) Round off 235 to the nearest 10 is \_\_\_\_\_.
- d) Largest 5 – digit number is \_\_\_\_\_.
- e) The place just left to the hundreds place is \_\_\_\_\_.
- f) \_\_\_\_\_ is the smallest 4-digit number.
- g) Form greatest 4 -digit number using digits 7,6,4,3 without repeating any digit \_\_\_\_\_.

**ASSERTION AND REASONING BASED QUESTION**

**DIRECTION :** In the question number 2 and 3, a statement of Assertion (A) is followed by a statement of Reason (R). Choose the correct option.

- a) Both Assertion and Reason are true and Reason is a correct explanation of Assertion.
- b) Both Assertion and Reason are true but Reason is not a correct explanation of Assertion.
- c) Assertion is true but Reason is false.
- d) Assertion is false but Reason is true.

Q2) **Assertion (A):** 7543 here place value of 4 is  $4 \times 10 = 40$ .

**Reason (R):** Place value of number is calculated by multiplying face value with its place.

Q3) **Assertion (A):** 109, 225, 343, 451 are odd numbers.

**Reason(R) :** Numbers where 1, 3, 5, 7 and 9 are at the ones place are known as even numbers.

Q4) Look at the number 7689 and answer the following questions.

- Write the number name of the given number.
- Write the expanded form of the given number.
- What is the successor of the given number?

### CASE STUDY BASED QUESTION

Q5) The table below shows the number of toys sold in different toy shops. Study the data carefully and answer the questions that follow.

TOY SHOP	NUMBER OF TOYS SOLD
Happy Toys	3245
Fun World	4132
Kids Corner	2980



***On the basis of given information answer the following questions:***

a) Which shop has sold the highest number of toys?

b) Round off the number of toys sold by Fun World shop to nearest tens.

c) Arrange the number of toys sold by the shopkeepers in ascending order.



## CH-2 ADDITION

### ASSIGNMENT NO. 2

SUBJECT: MATHEMATICS CLASS-III \_\_\_\_\_

APRIL, 2026

NAME: \_\_\_\_\_

DATE: \_\_\_\_\_

#### Q1) MENTAL MATHS

- a)  $2314 + 3415 = \underline{\hspace{2cm}} + 2314$ .
- b)  $6978 + 0 = \underline{\hspace{2cm}}$ .
- c)  $400 + 200 + 700 = \underline{\hspace{2cm}}$ .
- d)  $(923 + 245) + 456 = 245 + (\underline{\hspace{2cm}} + 456)$ .
- e) 4 tens more than 4,632 is  $\underline{\hspace{2cm}}$ .

#### ASSERTION AND REASONING BASED QUESTION

**DIRECTION :** In the question number 2 and 3, a statement of Assertion (A) is followed by a statement of Reason (R). Choose the correct option.

- a) Both Assertion and Reason are true and Reason is a correct explanation of Assertion.
- b) Both Assertion and Reason are true but Reason is not a correct explanation of Assertion.
- c) Assertion is true but Reason is false.
- d) Assertion is false but Reason is true.

Q2) **Assertion (A):**  $62 + 76 = 133$ ,  $76 + 62 = 133$

**Reason (R):** While adding numbers if we change the order of the numbers, the sum does not change.

Q3) **Assertion (A):**  $0 + 456 = 0$ .

**Reason(R):** When we add zero to a number, the sum is the number itself.

Q4) Riya has 3264 marbles. Her friend Aarav gave her 5489 more marbles and her sister gave her 502 marbles more. How many marbles does Riya have in total?



Q5) An agency delivers 1478 English newspaper in an area and 2279 Hindi newspaper in the same area. What is the total number of newspaper delivered by the agency? Estimate the total number of newspaper delivered to nearest tens.



### CASE STUDY BASED QUESTION

Q6) Riya and her friends are planning to visit an Adventure Park. The ticket price per person for different activities is given below.

Activity	Ticket Price per Person (₹)
Water Ride	₹1,250
Snow World	₹1,480
Toy Train	₹980
Adventure Zone	₹1,675



*On the basis of given information answer the following questions:*

a) Which activity has the lowest ticket price?

b) Riya wants to enjoy the Water Ride and her brother wants to visit Snow World. What will be the total cost of both tickets?

c) Riya's mother plans to visit the Adventure Zone, while her father wants to enjoy the Water Ride. What will be the total cost of both tickets?





## Ch.1 Parts of our Body

### ASSIGNMENT NO.1

**SUBJECT: EVS**

**CLASS-III \_\_\_\_\_**

**APRIL 2026**

**NAME: \_\_\_\_\_**

**DATE: \_\_\_\_\_**

#### **Q1. Tick the correct option:**

- a) \_\_\_\_\_ are the tiny pores on our tongue.  
**(i) Taste buds    (ii) flavours    (iii) both (i) and (ii)    (iv) none of these**
- b) Internal organs can neither be seen nor touched from the outside.  
**(i) True    (ii) False**
- c) People who are unable to hear or speak learn to communicate through \_\_\_\_\_ language.  
**(i) Oral    (ii) written    (iii) sign    (iv) all of these**
- d) Heart beats about 60-100 times in a minute.  
**(i) True    (ii) False**
- e) \_\_\_\_\_ people can learn to read using Braille script.  
**(i) Deaf    (ii) Dumb    (iii) Blind    (iv) all of these**

#### **Q2. Who invented an artificial foot, the Jaipur foot?**

---

---

---

**Q3. Name the different types of walking aids used by differently abled people.**

---

---

---

---

---

---

---

---

**Q4. We should love and respect aged people. Give reason.**

---

---

---

---

---

---

---

---

**Q5. Explain the process of digestion in detail and name the organs involved in it.**

---

---

---

---

---

---

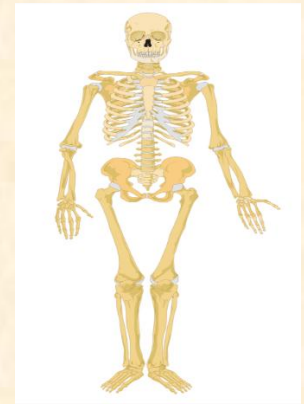
---

---

---

**Q6. Read the following and answer the questions.**

Both, internal and external body parts work together to keep us alive and healthy. There are two lungs present inside our chest. The oxygen that we breathe in from the nose goes to the lungs. The lungs pass this oxygen to the blood stream. Oxygen-filled pure blood from the lungs flows into the heart which pumps it to the other parts of the body.



Q1. Where does the oxygen passed from the lungs goes to?

---

---

---

---

---

---

---

Q.2 \_\_\_\_\_ pumps the pure blood to the other parts of the body.

**Q7. Assertion and Reasoning Based Question:**

**Assertion:** Heart is connected to the blood vessels.

**Reason:** Blood vessels carry blood from and to the heart.

A

A is true but R is false.

B

A is false but R is true.

C

Both A and R are true and R is the correct explanation for A.

D

Both A and R are true but R is not the correct explanation for A.

**Q8. Assertion and Reasoning Based Question:**

**Assertion:** People who are unable to see, learn to read using the Braille script.

**Reason:** This script has letters with raised dots in a set pattern.

A

A is true but R is false.

B

A is false but R is true.

C

Both A and R are true and R is the correct explanation for A.

D

Both A and R are true but R is not the correct explanation for A.



## CH-2 KEEPING SAFE

### ASSIGNMENT NO. 2

**SUBJECT: EVS**

**CLASS-III \_\_\_\_\_**

**APRIL, 2026**

**NAME: \_\_\_\_\_**

**DATE: \_\_\_\_\_**

#### **Q1. Circle the correct option:**

1. \_\_\_\_\_ is better than cure.

- (i) **Prevention**      (ii) **Importance**      (iii) **Carelessness**      (iv) **none of these**

2. The emergency safety number for children help is \_\_\_\_\_.

- (i) **100**      (ii) **1098**      (iii) **102**      (iv) **101**

3. Always cross the road at the \_\_\_\_\_.

- (i) **Zebra crossing**      (ii) **subway**      (iii) **both (i) and (ii)**      (iv) **none of these**

4. Never agree to go somewhere with a \_\_\_\_\_.

- (i) **Stranger**      (ii) **Grandparent**      (iii) **Father**      (iv) **none of these**

#### **Q2. Write 'T' for True and 'F' for False statements.**

1. A safe touch makes you feel good. \_\_\_\_\_

2. In case of an accident, we must provide first aid to the injured. \_\_\_\_\_

3. While playing we should throw stones at stray animals. \_\_\_\_\_

4. Do not run around in the class. \_\_\_\_\_



**Q5. Write any two ways to be safe at home.**

---

---

---

---

---

---

---

---

**Q6. Read the following and answer the questions**

Good touch makes us feel loved and safe. When our mother hugs us or our father holds our hand while crossing the road, it is a good touch. Bad touch makes us feel uncomfortable, scared, or confused. If anyone touches us in a way that makes us uneasy, we should say “No” loudly and tell a trusted adult. We must always remember that our body belongs to us.



Q1. What does a good touch make you feel?

---

---

---

Q2. How does a bad touch make you feel?

---

---

---

---

**Q7. Assertion: We should wear a helmet while riding a bicycle.**

**Reasoning: A helmet protects our head from injury.**

**A**

Both A and R are true and R is the correct explanation of the assertion.

**B**

Both A and R are true and R is not the correct explanation of the assertion.

**C**

A is true but R is false.

**D**

A is false but R is true.

**Q8. Assertion: We should not touch sharp objects.**

**Reasoning: Sharp objects can hurt us.**

**A**

Both A and R are true and R is the correct explanation of the assertion.

**B**

Both A and R are true and R is not the correct explanation of the assertion.

**C**

A is true but R is false.

**D**

A is false but R is true.




**Q 5. Identify the following images:**

a) Name this useful device.



b) Name this personality.



a) \_\_\_\_\_

b) \_\_\_\_\_

**Q 6. Current Affairs:**

a) Name the former Indian Test cricketer and part of India's first-ever Test victory, passed away in Chennai at the age of 96.

Ans. \_\_\_\_\_

b) Name the legendary Indian playback singer, who passed away at the age of 92 in Mumbai on 12<sup>th</sup> April, 2026.

Ans. \_\_\_\_\_