



ASSIGNMENT NO. 1

SUBJECT: ENGLISH

CLASS- IV _____

APRIL, 2026

NAME: _____

DATE: _____

LITERATURE

CH 1: THE SAMURAI WARRIOR AND THE TEA MASTER

Q1. Describe the character of the tea master.

Q2. How did confidence help the tea master solve his problem?



POEM-1 I'M LATE FOR THE SCHOOL

Q3. Based on the understanding of the poem, what happened with the boy when he woke up late?

Q4. What problems can happen if we wake up late in the morning?

Q5. Read the lines from the poem and answer the questions.

*“My face went red, I couldn’t breathe,
For in my haste I knew!
I’d forgotten to wear trousers,
Jumper, shirt, my socks and shoes!”*

a) Why did the boy’s face turn red?

b) What had he forgotten to wear?

c) What caused this mistake?



ASSIGNMENT NO. 2

SUBJECT: ENGLISH

CLASS- IV _____

APRIL, 2026

NAME: _____

DATE: _____

GRAMMAR

TOPIC- POSSESSIVE NOUNS

Q1. Fill in the blanks with the appropriate possessive noun.

- The teacher asked if _____ (John) homework was finished before class started.
- I borrowed _____ (my friend) pencil because mine broke during the test.
- The children played with _____ (children) toys all afternoon in the backyard.
- The dog wagged _____ (its) tail when it saw its owner coming home.
- We visited _____ (the Smith family) house for dinner last weekend.
- The _____ (boys) soccer game was postponed due to rain.
- The _____ (cats) food bowl is empty again.
- The _____ (parents) car broke down on the way to the party.

TOPIC- NOUNS: SINGULAR AND PLURAL

Q2. Read the paragraph below and correct the nouns in singular or plural form as needed.

The teacher walked into the classroom and saw that the _____ (student) were already seated. She noticed that several _____ (book) were left on the desks. One of the _____ (child) raised his hand to ask a question, and the teacher smiled at the _____ (boy). She told the _____ (girl) in the front row to open her notebook. At the back of the room, a group of _____ (friend) were whispering quietly. As the teacher began to explain the lesson, she pointed to the _____ (picture) on the wall. The _____ (city) in the image were filled with tall buildings and busy _____ (person).

TOPIC- NOUNS: KINDS

Q3. Underline the noun and mention its kinds.

- a) Rohan showed great kindness to the poor man.
- b) The team of players practiced hard for the match.
- c) Honesty is a very important quality in a person.
- d) The children visited the museum yesterday.
- e) India is known for its rich culture.
- f) A flock of birds flew across the sky.

Q4. Fill in the blanks with suitable word with the given noun: few, a few, little, a little, some.

- a) There are _____ apples in the basket.
- b) I need _____ sugar in my tea.
- c) There are _____ books on the table.
- d) Please give me _____ water to drink.
- e) Mother bought _____ paper for the project.
- f) The carpenter needs _____ wood to make the chair.

Q5. Write whether the nouns are Countable (C) or Uncountable (U).

- a) oil _____
- b) rice _____
- c) boys _____
- d) oxygen _____
- e) happiness _____

Q6. Write whether the underlined nouns are Masculine, Feminine, Common, or Neuter gender.

- a) The boy is playing in the park.
- b) The queen lives in a big palace.
- c) The teacher is explaining the lesson.
- d) The table is made of wood.
- f) The actress performed very well on stage.
- g) The child is sleeping peacefully.
- h) The car is parked outside the house.



ASSIGNMENT NO. 3

SUBJECT: ENGLISH

CLASS- IV _____

APRIL, 2026

NAME: _____

DATE: _____

WRITING

Q1. Examine the given picture carefully. Based on your observations, write a descriptive paragraph of about 70-80 words.





ASSIGNMENT NO. 4

SUBJECT: ENGLISH

CLASS- IV _____

APRIL, 2026

NAME: _____

DATE: _____

READING

Q1. Read the passage given below carefully and the following questions.

The presence of certain qualities makes friendship a special relationship. A true friend is consistent and honest. A friend is not afraid to give an honest opinion and does not say things for the sake of getting approval. A friend provides companionship and continuous support. There is no room for pride, jealousy or rivalry in a friendship.

When one enjoys a period of prosperity, many people become their friends. This is not friendship because these so-called friends slip away in difficult times. True friends stand by each other both in good and bad times.

In the Ramayana, Sugriva and Rama honour their pact of friendship through the entire epic. Rama helps Sugriva kill his brother Bali and regain the kingdom. In the Mahabharata, Karna, at the cost of his own life, remains a true friend to Duryodhana. He honours his friendship with Duryodhana even after knowing that he, in reality, is the son of Kunti and that the Pandavas are his own brothers. He does not break his commitment to Duryodhana.

A. Friendship is loyalty to your friend _____.

- i. during times of his prosperity
- ii. during times of his being in a powerful position
- iii. during good and bad times of his life.

B. Friendship involves _____.

- i. being critical of each other
- ii. being truthful towards each other
- iii. saying things for the sake of getting approval from each other.

C. In the Mahabharata, one example of a true friend is _____.

- i. Balrama
- ii. Shakuni

iii. Karna

D. Mention any two qualities of a true friend.

E. What should a good friend avoid to maintain consistency in friendship?

F. How could we say that both Sugriva and Karna had the qualities of a true friend?

G. Find the word from the passage which is the antonym of 'easy'.

H. Find the word from the passage which is the synonym of 'steady'.

I. Make sentences.

i. prosperity - _____

ii. presence - _____



Brain International School

Vikas Puri, New Delhi

अभ्यास पत्र -1

विषय: हिंदी

कक्षा- चार _____


अप्रैल, 2026

नाम : _____

दिनांक: _____

पाठ -1 चिड़िया का गीत (कविता)


प्रश्न-1 नीचे दिए गए प्रश्नों के उत्तर लिखिए ।

(क) चिड़िया  का घोंसला किस चीज़ से तैयार हुआ था ?

.....

.....

.....

(ख) खुले आसमान में उड़ती चिड़िया  को क्या समझ में आया ?

.....

.....

.....

प्रश्न-2 निम्नलिखित शब्दों के अर्थ लिखकर वाक्यों में प्रयोग कीजिए ।

(क) संसार -



वाक्य -

.....


(ख) घोंसला -




वाक्य -

.....

प्रश्न-3 रिक्त स्थानों की पूर्ति कीजिए ।

(क) सबसे पहले चिड़िया  का घर जैसे आकार का था ।

(ख) चिड़िया  घोंसले से निकलकर हरी-भरी पर चली गई ।

पाठ-1 भाषा, पाठ-2 वर्ण-विचार

प्रश्न-4 निम्नलिखित राज्यों/देशों में बोली जाने वाली भाषाओं के नाम लिखिए ।


(क) पंजाब - (ख) मणिपुर-


(ग) अमेरिका- (घ) चीन-

प्रश्न-5 रिक्त स्थान भरिए ।


(क) भाषा के लिखने का ढंग कहलाता है ।


(ख) हिंदी भाषा लिपि में लिखी जाती है ।


(ग) रेडियो  सुनना भाषा के रूप का उदाहरण है ।

(घ) पत्र-लेखन  भाषा के रूप का उदाहरण है ।

प्रश्न-6 वर्ण-विच्छेद कीजिए ।

(क) पुस्तक- 

(ख) गुल्लक- 

(ग) स्वदेश- 

प्रश्न-7 निम्नलिखित शब्दों में सही स्थान पर अनुस्वार/अनुनासिक लगाकर शब्द दोबारा लिखिए ।

(क) आख - (ख) सुदर -

(ग) घटी - (घ) हसना-



Brain International School

Vikas Puri, New Delhi

अभ्यास पत्र -2

विषय: हिंदी

कक्षा- चार _____


अप्रैल, 2026

नाम : _____

दिनांक: _____

पाठ -2 बगीचे का घोंघा (कहानी)

प्रश्न-1 नीचे दिए गए प्रश्नों के उत्तर लिखिए ।

(क) घोंघा  उद्यान से बाहर क्यों जाना चाहता था ?

.....

.....

.....

(ख) उद्यान की दीवार में छेद देखकर घोंघे  को कौन-सी बात याद आती थी ?

.....

.....

.....

प्रश्न-2 निम्नलिखित शब्दों के अर्थ लिखकर वाक्यों में प्रयोग कीजिए ।

(क) आश्चर्य -

वाक्य -


.....


(ख) अद्भुत -

वाक्य -

.....

प्रश्न-3 रिक्त स्थानों की पूर्ति कीजिए ।

(क) घोंघा  अपना सारा सामान अपने में बाँधकर बाहर की दुनिया देखने निकल पड़ा ।

(ख) घोंघे ने  को पेड़ पर फुदक-फुदककर चढ़ते देखा ।

प्रश्न-4 निम्नलिखित गद्यांश को पढ़कर पूछे गए प्रश्नों के उत्तर दीजिए -

रामू एक मेहनती लड़का था। वह रोज़ सुबह जल्दी उठता और अपने माता-पिता की मदद करता था। स्कूल जाने से पहले वह अपने बगीचे में पौधों को पानी देता था। उसे पेड़-पौधों से बहुत प्यार था। एक दिन उसने देखा कि एक छोटा पौधा सूख रहा है। रामू ने तुरंत उसे पानी दिया और उसकी देखभाल की। कुछ दिनों बाद वह पौधा फिर से हरा-भरा हो गया। रामू बहुत खुश हुआ। उसने सीखा कि हमें प्रकृति की देखभाल करनी चाहिए।

(क) रामू रोज़ सुबह क्या करता था?

(i) खेलता था (ii) सोता था (iii) पौधों को पानी देता था (iv) टीवी देखता था

(ख) रामू कैसा लड़का था?

(ग) रामू ने क्या सीखा था?

(घ) 'देखभाल' शब्द का वर्ण-विच्छेद कीजिए।

(ङ) 'पेड़' शब्द का एक पर्यायवाची शब्द लिखिए।

(च) उपर्युक्त गद्यांश का उचित शीर्षक दीजिए।



CH – NUMBERS AND NUMERATION

ASSIGNMENT NO. 1

SUBJECT: MATHEMATICS **CLASS -IV** ____ **APRIL,2026**

NAME: _____ **DATE:** _____

Q1) MENTAL MATHS

- a) The place value and face value of 0 is _____.
- b) The successor of 2,01,699 is _____.
- c) Round off 1,896 to the nearest 100 is _____.
- d) Largest 5 – digit number is _____.
- e) The place just left to the ten – thousands place is _____.
- f) Roman numeral of 11 is _____.
- g) Form greatest 4 -digit number using digits 8, 0, 6, 1 without repeating any digit
_____.

Q2) Look at the number 846692 and answer the following questions.

- a) Write the number in words according to International Place Value System.
- b) Write the expanded form of the given number.
- c) Round off the given number to nearest 1000.

Q3) Find the sum and difference of the place value of underlined digits in 4,56,889.

CASE STUDY BASED QUESTION

Q4) The table below displays the sales of scooters over different years. Study the data carefully and answer the questions that follow.

YEAR	NUMBER OF SCOOTERS
2005	787110
2006	152008
2007	45278



On the basis of given information answer the following questions:

(a) Which year had the highest number of scooters sold?

- (b) Insert commas and write the number name according to Indian place value system for number of scooters sold in 2006.

- (c) Arrange the number of scooters sold in Ascending order.

ASSERTION AND REASONING BASED QUESTION

DIRECTION: In the question number 5 and 6, a statement of Assertion (A) is followed by a statement of Reason (R). Choose the correct option.

- a) Both Assertion and Reason are true and Reason is a correct explanation of Assertion.
- b) Both Assertion and Reason are true but Reason is not a correct explanation of Assertion.
- c) Assertion is true but Reason is false.
- d) Assertion is false but Reason is true.

Q5) Assertion (A): Face value of digit 3 in number **5,85,236** is 30.

Reason(R): Face value of a digit in a number is the value of the digit itself irrespective of its place in the number.

Q6) Assertion (A): Successor of 26,459 is 26,458.

Reason(R): The number that comes just after a given number is called successor of the number.



Brain International School

Vikas Puri, New Delhi

CH – ADDITION

ASSIGNMENT NO. 2

SUBJECT: MATHEMATICS

CLASS -IV ____

APRIL, 2026

NAME: _____

DATE: _____

Q1) MENTAL MATHS

- a) The sum of the largest and smallest 6 -digit number is _____.
- b) $999 + 1 =$ _____.
- c) $0 +$ _____ $= 25,987$.
- d) $20 + 2,000 + 2,00,000 =$ _____.

Q2) Arrange in columns and add.

- a) 4,63,129 ; 1,25,237 and 59,852

- Q3) A recent survey reports that ICICI Bank has 2,630 branches, HDFC Bank 1,986 branches and Axis Bank 1,493 branches in India. Calculate the estimated total number of branches of these banks to the nearest hundred. Also calculate the actual total number of branches.



ASSERTION AND REASONING BASED QUESTION

DIRECTION: In the question number 4 and 5, a statement of Assertion (A) is followed by a statement of Reason (R). Choose the correct option.

- a) Both Assertion and Reason are true and Reason is a correct explanation of Assertion.
- b) Both Assertion and Reason are true but Reason is not a correct explanation of Assertion.
- c) Assertion is true but Reason is false.
- d) Assertion is false but Reason is true.

Q4) Assertion (A): $450 + 200 = 200 + 450$

Reason(R): Changing the order of the addends does not change the sum.

Q5) Assertion (A): While adding 4,321 and 1,234 we start adding from the thousands place.

Reason(R): In addition, we always start adding from the Ones place and move towards the left.

CASE STUDY BASED QUESTION

Q6) Maharashtra has once again become the top sugar producer state in India after five years. It has overtaken Uttar Pradesh in sugar production. There are many factories producing sugar. In year 2021, Rampur factory produced 35,720 bags of sugar while Shyampur factory produced 32,465 bags of sugar. In the same year, Govindpur factory produced 41,376 bags.



On the basis of given information answer the following questions:

a) Which factory produced the maximum bags of sugar?

b) How many bags did Rampur factory and Govindpuri factory produce altogether?

c) Estimate the number of bags produced in Rampur to the nearest hundreds.



Ch.1 Vital Parts of our Body

ASSIGNMENT NO.1

SUBJECT: EVS

CLASS-IV _____

APRIL 2026

NAME: _____

DATE: _____

Q1. Tick the correct option:

- a) The brain is protected by a hard cover of bones called the _____.
- (i) **Head** (ii) **skull** (iii) **forehead** (iv) **none of these**
- b) Breathing in air into the lungs is called inhalation.
- (i) **True** (ii) **False**
- c) The _____ pumps blood to all other parts of our body.
- (i) **stomach** (ii) **veins** (iii) **heart** (iv) **blood vessels**
- d) The breaking down of food into small and simpler form that the body can use is called digestion.
- (i) **True** (ii) **False**
- e) The _____ appear blue in colour and have thin walls.
- (i) **Arteries** (ii) **veins** (iii) **skin** (iv) **blood vessels**

Q2. Guess who am I?

- a) I am the largest internal organ. _____
- b) It helps to remove waste from the body. _____
- c) I am an external body organ. _____

Q3. Define ventricles.

Q4. Write any two functions of brain.

Q5. Write any three healthy habits for good digestion.

Q6. Read the following and answer the questions.

Our body is divided into many parts or organs. Some can be seen and some cannot. The organs that are outside the body can be seen are called external organs. The organs that are inside the body and cannot be seen from outside are called internal organs. We must take proper care of both internal and external organs. Balanced diet, good exercise and proper eating habits enable our organs to remain healthy.



Q1. Define internal organs.

Q.2 _____, good exercise and proper eating habits enable our organs to remain healthy.

Q.7 **Draw, label and colour any two external organs.**



Q8. Assertion and Reasoning Based Question:

Assertion: We can live without our brain.

Reason: The brain controls all body activities.

A

A is true but R is false.

B

A is false but R is true.

C

Both A and R are true and R is the correct explanation for A.

D

Both A and R are true but R is not the correct explanation for A.

Q9. Assertion and Reasoning Based Question:

Assertion: We have two lungs in our body.

Reason: Lungs help in the process of breathing.

A

A is true but R is false.

B

A is false but R is true.

C

Both A and R are true and R is the correct explanation for A.

D

Both A and R are true but R is not the correct explanation for A.



Ch.2 Safety and Health

ASSIGNMENT NO.2

SUBJECT: EVS

CLASS-IV _____

APRIL 2026

NAME: _____

DATE: _____

Q1. Tick the correct option:

a) We should be alert and follow some safety rules to avoid _____.

- (i) accidents (ii) injuries (iii) both (i) and (ii) (iv) none of these

b) Swimming must be learnt under adult supervision.

- (i) True (ii) False

c) We should not wear _____ clothes near fire.

- (i) cotton (ii) woollen (iii) synthetic (iv) all of these

d) Do not eat uncovered food as flies and dust may contaminate it.

- (i) True (ii) False

e) A _____ touch makes you feel happy, loved and comfortable.

- (i) Good (ii) safe (iii) bad (iv) unsafe

Q2. What should we do to stay healthy?

Q3. Give any two examples of safe touch.

Q4. Drink only clean and safe drinking water. Give reason.

Q5. Write any three water safety tips.

Q6. Read the following and answer the questions.

Good health and safety both are equally important for us. We must follow certain safety rules to keep ourselves safe. Healthy food, good eating habits, regular exercise and proper rest are the keys to good health. Safety means protecting ourselves from danger and accidents. We must follow traffic rules, avoid playing with sharp objects and keep our surroundings clean.



Q1. What are the keys to good health ?

Q.2 _____ means protecting ourselves from danger and accidents.

Q7. Assertion and Reasoning Based Question:

Assertion: We should avoid going near the edges of water bodies.

Reason: The edges are generally slippery and we can fall into the water.

A

A is true but R is false.

B

A is false but R is true.

C

Both A and R are true and R is the correct explanation for A.

D

Both A and R are true but R is not the correct explanation for A.

Q8. Assertion and Reasoning Based Question:

Assertion: We should stay alert while talking to strangers.

Reason: Strangers are our friends.

A

A is true but R is false.

B

A is false but R is true.

C

Both A and R are true and R is the correct explanation for A.

D

Both A and R are true but R is not the correct explanation for A.



BRAIN INTERNATIONAL SCHOOL

WORKSHEET 1 (2026-27)

Subject- General Knowledge (April)

Class-IV Sec- _____

Name: _____ **Roll no:** _____ **Date:** _____

Q 1. Fill in the blanks:

- a) _____ is called holy basil and is one of the most sacred plants in India. It is used as a remedy for cough and cold.
- b) This Indian woman grand master is champion among the world's top-ranked chess players. _____

Q 2. Write 'True' and 'False' for the following statement:

- a) The bird lays its eggs in other bird's nest is cuckoo. _____
- b) The official residence of the people located in Vatican city is Groote Schuur. _____

Q 3. Choose the correct option:

- a) It is located in Uttar Pradesh. It was built by the Great Mughal Emperor Akbar. It was his capital.
- 1) Fatehpur Sikri 2) Somnath Temple 3) Chittor Fort
- b) Which snake's diet is mainly composed of other snakes?
- 1) Krait 2) rattle snake 3) King Cobra

Q 4. Match the following:

- | | |
|------------------------------|-------------------|
| a) Groundnut Oil | i) Nalanda |
| b) India's Oldest University | ii) Andre Agassi |
| c) AUS tennis player | iii) Peanut plant |

Q 5. Identify the following images:

a) Name the famous personality.



b) Name the famous monument.



a) _____

b) _____

Q 6. Current Affairs:

a) What is the name of the AI chatbot launched to enhance digital legal services?

Ans. _____

b) Which organisation has launched the 'Arogya Van' initiative to promote biodiversity and ecological sustainability along National Highways?

Ans. _____