



Brain International School

Vikas Puri, New Delhi

ASSIGNMENT NO. 1

SUBJECT: ENGLISH

CLASS-V _____

APRIL, 2026

NAME: _____

DATE: _____

LITERATURE

CH-1 HOW THE KANGAROO GOT HER POUCH

Q1. What do you think would have happened to the wombat if Mother Kangaroo had not helped him?

Q2. Why is the pouch described as a special gift at the end of the story?

POEM-1 KINDNESS

Q1. What message does the poet give about helping others without expecting anything in return?

Q2. Do you agree that kindness costs nothing but means everything? Explain your answer.



Brain International School

Vikas Puri, New Delhi

ASSIGNMENT NO. 2

SUBJECT: ENGLISH

CLASS-V

APRIL'2026

NAME _____

DATE _____

GRAMMAR

CH-16 SENTENCES- SUBJECT, PREDICATE AND OBJECT

Q1. Identify the subject, predicate, and object in each sentence:

- a) The teacher praised the student.
- b) My sister baked a cake.
- c) The dog chased the cat.
- d) Riya wrote a letter.
- e) The farmer grew vegetables.
- f) Our team won the match.
- g) The baby dropped the toy.
- h) Father repaired the car.
- i) The children played football.
- j) The chef cooked a delicious meal.

CH-18 SENTENCES- SIMPLE AND COMPOUND

Q2. Combine each pair of simple sentences into one compound sentence using a suitable FANBOYS conjunction:

- a) I was hungry. I made a sandwich.

- b) He studied hard. He did not pass the test.

c) We can watch a movie. We can play a game.

d) She was tired. She finished her homework.

e) The sun was shining. We went to the beach.

f) He must hurry. He will miss the bus.

g) Meera likes tea. She does not like coffee.

h) The boys tried their best. They lost the match.

i) Close the window. The room will get cold.

j) I wanted to call you. I forgot your number.

CH-14 PUNCTUATIONS

Q3. Correct the punctuation in the following sentences by adding commas and semicolons where needed:

a) I bought apples oranges bananas and grapes from the market.

b) The sun was setting the sky looked beautiful.

c) Rahul finished his homework however he forgot to submit it.

d) We visited Delhi Agra and Jaipur during our vacation.

e) She loves reading novels her sister prefers watching movies.

f) After the game we were tired hungry and thirsty.

g) It was raining heavily we decided to stay indoors.

h) My best friends are Riya Meena and Kavya.



Brain International School

Vikas Puri, New Delhi

ASSIGNMENT NO. 4

SUBJECT: ENGLISH

CLASS-V

APRIL '2026

NAME _____

DATE _____

READING

Q1. Read the passage and answer the following questions.

The Jungle Book is a famous collection of stories written by Rudyard Kipling. The stories are set in the forests of India and mainly focus on a boy named Mowgli, who is raised by wolves. Through exciting adventures, the author shows the importance of courage, friendship, and wisdom.

Mowgli learns many lessons from the animals around him, such as Baloo, the bear and Bagheera, the panther. Each animal teaches him something valuable about life and survival. The stories are filled with action, emotion, and meaningful messages. Kipling uses simple yet descriptive language to make the forest come alive in the minds of readers.

As Mowgli grows older, he faces many challenges, including danger from Shere Khan, the fierce tiger. With the help of his animal friends, he learns to make brave decisions and protect himself. The stories also show how teamwork and trust help individuals overcome difficulties. Readers enjoy the exciting adventures as well as the life lessons hidden within them.

The Jungle Book teaches values like bravery, loyalty, and respect for nature. It also highlights the bond between humans and animals. Because of its adventure, memorable characters, and strong moral lessons, the book continues to be loved by children and adults around the world.

A. Answer the following questions:

I. Who wrote *The Jungle Book*?

II. What is the central setting in which the story's events mainly transpire?

III. What message does Mowgli's journey give the reader about life?

B. Choose the correct option:

I. Who is the main character in *The Jungle Book*?

- a) Bagheera
- b) Baloo
- c) Mowgli
- d) Shere Khan

II. What is the synonym of the word "faithfulness" in the passage?

- a) fierce
- b) descriptive
- c) loyalty
- d) exciting

III. What is the antonym of the word "stillness" in the passage?

- a) teamwork
- b) action
- c) danger
- d) emotion





Brain International School

Vikas Puri, New Delhi

अभ्यास पत्र -1

विषय: हिंदी

कक्षा -पाँच -----

अप्रैल, 2026


नाम - -----

दिनांक - -----


पाठ्यपुस्तक : पाठ-1 किरन

प्रश्न 1 निम्नलिखित प्रश्नों के उत्तर लिखिए -



(क) बालिका  रात को सोने से पहले क्या कर रही थी ?



(ख) सोए हुए बच्चों को सवेरे-सवेरे  कौन जगाने आती है ?

प्रश्न 2 अनुस्वार या अनुनासिक लगाकर शब्दों को दोबारा लिखिए -

(क) वहा - -----


(ग) मै - -----

(ख) तुम्हे - -----

(घ) ससार - -----

प्रश्न 3 निम्नलिखित शब्दों से वाक्य बनाइए -



(क) बिस्तर  -----

(ख) जल्दी -----

व्याकरण : पाठ-1 भाषा और व्याकरण

प्रश्न 4 निम्नलिखित राज्यों/देशों की भाषा लिखिए -


- (क) कश्मीर - ----- (ग) गुजरात - -----
(ख) पंजाब - ----- (घ) महाराष्ट्र - -----

प्रश्न 5 निम्नलिखित भाषाओं की लिपि लिखिए -

- (क) उर्दू - -----
(ख) अंग्रेज़ी - -----
(ग) संस्कृत - -----

चित्र वर्णन

प्रश्न 6 निम्नलिखित चित्र का वर्णन 50-60 शब्दों में कीजिए -





Brain International School

Vikas Puri, New Delhi

अभ्यास पत्र -2

विषय: हिंदी

कक्षा -पाँच -----


अप्रैल, 2026


नाम - -----

दिनांक - -----

पाठ्यपुस्तक : पाठ-2 न्याय की कुर्सी

प्रश्न 1 निम्नलिखित प्रश्नों के उत्तर लिखिए -

(क) पहली मूर्ति  ने राजा से क्या पूछा था ?

(ख) चौथी मूर्ति  ने राजा से लड़कों के बारे में क्या कहा ?

प्रश्न 2 निम्नलिखित संयुक्त व्यंजनों से दो-दो शब्द बनाइए -

(क) द्व - -----

(ख) क्त - -----

(ग) प्र - -----

प्रश्न 3 उचित विराम-चिह्न लगाकर वाक्य दोबारा लिखिए -

तुम सब अपनी अपनी फरियाद लेकर आओ

व्याकरण : पाठ-2 वर्ण-विचार

प्रश्न 4 निम्न वर्ण किन-किन वर्णों के मेल से बने हैं ? -

(क) क्ष - ----- + ----- + -----

(ख) त्र - ----- + ----- + -----

प्रश्न 5 निम्नलिखित शब्दों का वर्ण-विच्छेद कीजिए -

(क) रक्षा - -----

(ख) प्रणाम - -----

अपठित गद्यांश

प्रश्न 6 निम्नलिखित गद्यांश को पढ़कर पूछे गए प्रश्नों के उत्तर दीजिए -

अकबर के एक खास दरबारी ख्वाजा सरा को अपनी विद्या और बुद्धि पर बहुत अभिमान था। बीरबल को तो वे अपने सामने नीच बालक और मूर्ख समझते थे। लेकिन अपने ही समझने से तो कुछ होता नहीं ! दरबार में अकबर की तूती बोलती थी और ख्वाजा साहब की बात ऐसी लगती थी जैसे नक्कारखाने में तूती की आवाज। ख्वाजा साहब की चलती तो वे बीरबल को हिंदुस्तान से निकलवा देते लेकिन निकलवाते कैसे।

(क) ख्वाजा सरा कौन थे ?

(ख) ख्वाजा सरा को किस पर अभिमान था ?

(ग) 'मूर्ख' शब्द का वाक्य में प्रयोग कीजिए। (वाक्य गद्यांश में से नहीं होना चाहिए)

(घ) उपर्युक्त गद्यांश से कोई दो संयुक्त व्यंजन छाँटकर लिखिए।

(ङ) 'साहब' शब्द का वर्ण-विच्छेद कीजिए।



CH – 1 NUMBERS AND NUMERATION

ASSIGNMENT NO. 1

SUBJECT: MATHEMATICS **CLASS -V** ____ **APRIL,2026**

NAME: _____ **DATE:** _____

Q1) MENTAL MATHS

- a) The predecessor of the 7-digit smallest number is _____.
- b) 1 thousand is equal to _____ hundreds.
- c) 76,92,456 rounded off to the nearest 100 is _____.
- d) The place just left to the ten – lakh place is _____.
- e) Roman numeral of 562 is _____.
- f) Form the greatest 8-digit number using digits 8, 2, 4, 9, 7, 0, 6, 1 without repeating any digit _____.

ASSERTION AND REASONING BASED QUESTION

DIRECTION : In the question number 2 and 3, a statement of Assertion (A) is followed by a statement of Reason (R). Choose the correct option.

- a) Both Assertion and Reason are true and Reason is a correct explanation of Assertion.
- b) Both Assertion and Reason are true but Reason is not a correct explanation of Assertion.
- c) Assertion is true but Reason is false.
- d) Assertion is false but Reason is true.

Q2) Assertion(A): Predecessor of 6 crore is five crore ninety nine lakh ninety nine

thousand nine hundred ninety nine.

Reason(R): If we add 1 to any number, we will get the successor of the number.

Q3) **Assertion(A):** Face value of 6 in the number 5,85,67,543 is 6.

Reason(R): The face value of a digit does not depend on the place of the digit in the number.

Q4) Look at the number 84607692 and answer the following questions.

- a) Insert commas and write the number name using International Place Value System.
- b) Write the expanded form of the number using International Place Value System.
- c) Write the predecessor of the given number.

Q5) Find the place value of the underlined digits in the number 23,98,654. Also, find their sum and difference.

CASE STUDY BASED QUESTION

Q6) Last year, three national parks welcomed a large number of visitors from different parts of the country. The details of the total number of visitors to each park are given below.

Park A	Park B	Park C
6,48,92,315	82,75,41,906	54,36,78,421



On the basis of given information answer the following questions:

a) Arrange the number of visitors in ascending order.

b) Round off the number of visitors to Park C to the nearest 100.

c) Write the number name of the visitors to Park A according to the Indian Place Value System and to Park B according to the International Place Value System.



CH - 2 THE FOUR FUNDAMENTAL OPERATIONS

ASSIGNMENT NO. 2

SUBJECT: MATHEMATICS **CLASS -V** ____ **APRIL,2026**

NAME: _____ **DATE:** _____

Q1) MENTAL MATHS

- a) Sum of the the Greatest 7-digit number and 1 is _____.
- b) $(56,74,321 + 45,00,420) +$ _____ $= 56,74,321 + (45,00,420 + 43,678)$
- c) If 98,678 divided by 100, then the quotient is _____.
- d) The difference between 8,72,345 and 4,56,234 is _____.
- e) 19×6 is _____.

ASSERTION AND REASONING BASED QUESTION

DIRECTION : In the question number 2 and 3, a statement of Assertion (A) is followed by a statement of Reason (R). Choose the correct option.

- a) Both Assertion and Reason are true and Reason is a correct explanation of Assertion.
- b) Both Assertion and Reason are true but Reason is not a correct explanation of Assertion.
- c) Assertion is true but Reason is false.
- d) Assertion is false but Reason is true.

Q2) Assertion(A): $23,45,600 - 23,45,600 = 0$

Reason(R): If 0 is subtracted from a number, the difference is the number itself.

Q3) **Assertion(A):** $34,000 \times 2 = 2 \times 34,000$

Reason(R): According to commutative property the product of two numbers remains the same even if the order of the numbers is changed.

Q4) The difference between two numbers is 4,82,75,936. If the smaller number is 73,45,218, find the larger number.



Q5) In a town, there were 2,34,785 people in need of food support. During a community drive, a charity organization helped 78,946 people. How many people still need food support in the town after the drive? Verify your answer.



CASE STUDY BASED QUESTION

Q6) A state government organized a Green Earth Campaign to plant trees and improve the environment. The total fund for the campaign was 48,00,000 rupees. In the first phase, 3,25,450 rupees were spent on buying plants. In the second phase, 1,74,550 rupee were spent on transportation and tools. The remaining fund of 43,00,000 rupees was equally distributed among 8 schools for awareness activities.

On the basis of given information answer the following questions:

a) How much money was spent in total in the first and second phases?

b) If 4,000 tree guards were purchased at ₹25 each, how much money was spent on buying the tree guards?

c) How much money did each school receive for awareness activities?

A large, empty rectangular box with a thin black border, intended for the user to enter data or provide an answer to the question above.



CH-1 HOW DOES OUR BODY WORK?

ASSIGNMENT NO. 1

SUBJECT: EVS

CLASS-V _____

APRIL, 2026

NAME: _____

DATE: _____

Q1. Circle the correct option:

1. All movements and functions of an excavator are done through the use of _____.

- (i) Oil (ii) Hydraulic Fluid (iii) Water (iv) none of these

2. _____ is needed for any kind of work to be done.

- (i) Water (ii) Milk (iii) Energy (iv) none of these

3. The _____ hold the urine till we are ready to visit the toilet.

- (i) ureters (ii) urinary bladder (iii) urethra (iv) none of these

4. Reactions which take place in very less time is performed by

- (i) brain (ii) skin (iii) spinal cord (iv) none of these

Q2. Write 'T' for True and 'F' for False statements.

1. The molars are the biggest of all the teeth in our mouth. _____

2. In our jaw there are six premolars and four molars. _____

3. Liver makes a digestive juice called saliva. _____

4. Breathing polluted air can cause lung disease like asthma. _____

Q3. Define the following:

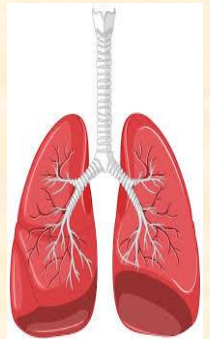
(i) Canines

Q4. Give reason 'How does the saliva help in digestion?'

Q5. Write any two ways to take care of the digestive system.

Q6. Read the following and answer the questions

Breathing is necessary for life. We breathe in oxygen and breathe out carbon dioxide. The organs that help us breathe are called respiratory organs. In humans, the main respiratory organs are the nose, windpipe and lungs. Air enters through the nose, passes through the windpipe and reaches the lungs. The lungs take oxygen into the blood, and the blood carries it to all parts of the body. We breathe faster when we run or exercise because our body needs more oxygen.



Q1. What do we breathe in and breathe out?

Q2. Name the main respiratory organs in humans.

Q7. Assertion: Incisors help us to cut food.

Reasoning: Incisors are flat and thin teeth.

A

Both A and R are true and R is the correct explanation of the assertion.

B

Both A and R are true and R is not the correct explanation of the assertion.

C

A is true but R is false.

D

A is false but R is true.

Q8. Assertion: Mucus in the nose helps us breathe clean air.

Reasoning: Mucus traps dust and germs.

A

Both A and R are true and R is the correct explanation of the assertion.

B

Both A and R are true and R is not the correct explanation of the assertion.

C

A is true but R is false.

D

A is false but R is true.



CH-2 BONES AND MUSCLES

ASSIGNMENT NO. 2

SUBJECT: EVS

CLASS-V _____

APRIL, 2026

NAME: _____

DATE: _____

Q1. Tick the correct option:

1. A joint is the place where two bones are held together by the _____.
(i) Ligaments (ii) Muscles (iii) Humerus (iv) none of these
2. The joints found in hips and shoulders are called _____.
(i) ball (ii) hinge (iii) gliding (iv) pivot
3. The spine is made up of _____ vertebrae.
(i) 20 (ii) 30 (iii) 33 (iv) 22
4. The skull consists of _____ bones.
(i) 20 (ii) 24 (iii) 21 (iv) 22

Q2. Write 'T' for True and 'F' for False statements.

1. The junction between two bones is called a joint. _____
2. A bone is 4 or 5 times stronger than a steel bar of the same weight. _____
3. Stapes is the smallest bone present inside our ear. _____
4. The first vertebra is called Atlas. _____

Q5. Write any two differences between movable and immovable joints.

Q6. Read the following and answer the questions.

The skull is a hard and strong part of our body. It is made up of many bones joined together. The skull protects the brain, which is a very important organ. It also gives shape to our face. The skull has holes for the eyes, nose and ears. The lower part of the skull is called the jaw. The jaw helps us to open and close our mouth while eating and speaking. The skull keeps our brain safe from injuries.



Q1. What is the skull made up of?

Q2. What is the lower part of the skull called and how is it helpful to us?

Q7. Assertion: We cannot stand without a skeleton.

Reasoning: The skeleton supports the body.

A

Both A and R are true and R is the correct explanation of the assertion.

B

Both A and R are true and R is not the correct explanation of the assertion.

C

A is true but R is false.

D

A is false but R is true.

Q8. Assertion: Joints help in movement.

Reasoning: Joints are places where two bones meet.

A

Both A and R are true and R is the correct explanation of the assertion.

B

Both A and R are true and R is not the correct explanation of the assertion.

C

A is true but R is false.

D

A is false but R is true.



Brain International School

Vikas Puri, New Delhi

ASSIGNMENT NO. 1

SUBJECT: FRENCH

CLASS-V _____

APRIL-MAY, 2026

NAME: _____


DATE: _____

LEÇON 0 : DÉCOUVRONS LA FRANCE !


Q1. Name the following.











LECON 1 : LES LETTRES

Q1. Write one French word using the given letters.

- a. **B** - _____
- b. **E** - _____
- c. **H** - _____
- d. **O** - _____
- e. **R** - _____

Q2. Put an accent and rewrite the words.

- a. tete - _____
- b. ecole - _____
- c. regle - _____
- d. garcon - _____

Q3. Comment tu t'appelles?

Ans. _____



अभ्यास पत्र - 1

विषय : संस्कृत

कक्षा - 5

अप्रैल 2026

प्रश्न 1 भाषा की सबसे प्राचीन भाषा कौन सी है

क) हिन्दी

ख) संस्कृत

ग) अंग्रेज़ी

प्रश्न 2 'थ्' वर्ण किस वर्ग में प्रयुक्त होता है

क) चवर्ग

ख) पवर्ग

ग) तवर्ग

प्रश्न 3 पवर्ग में वर्ण आता है ।

क) भ्

ख) थ्

ग) न्

प्रश्न 4 निम्न में से कौन - सा वर्ण स्वर है

क) लृ

ख) त्

ग) य्

प्रश्न 5 वर्ण सयोंग करें।

1 त् + ऋ =

2 ष् + ई =

प्रश्न 6 सही () या गलत () का चिह्न लगाएँ ।

क) 'ऋ' वर्ण व्यंजन है।

ख) अनुस्वार का चिह्न (') है।

ग) प्रत्येक वर्ग में पाँच वर्ण होते हैं ।

प्रश्न 7 'वद' धातु का लट् लकार लिखिए ।

पुरुष

एकवचन

द्विवचन

बहुवचन

प्रथम

.....

.....

.....

मध्यम

.....

.....

.....

उत्तम

.....

.....

.....

प्रश्न 8 'बालक' शब्द रूप सभी विभक्तियों में लिखिए ।

विभक्ति	एकवचन	द्विवचन	बहुवचन
प्रथमा
द्वितीय
तृतीय
चतुर्थी
पंचमी
षष्ठी
सप्तमी
सम्बोधन

Q 5. Identify the following images:

a) Name this inventor.



a) _____

b) Name this adventurous sport.



b) _____

Q 6. Current Affairs:

a) Who has been appointed as the first-ever female Chief of Army of Australia?

Ans. _____

b) P M Modi inaugurated the “Samrat Samprati Museum” to highlight the spiritual legacy of Jainism in which city?

Ans. _____