

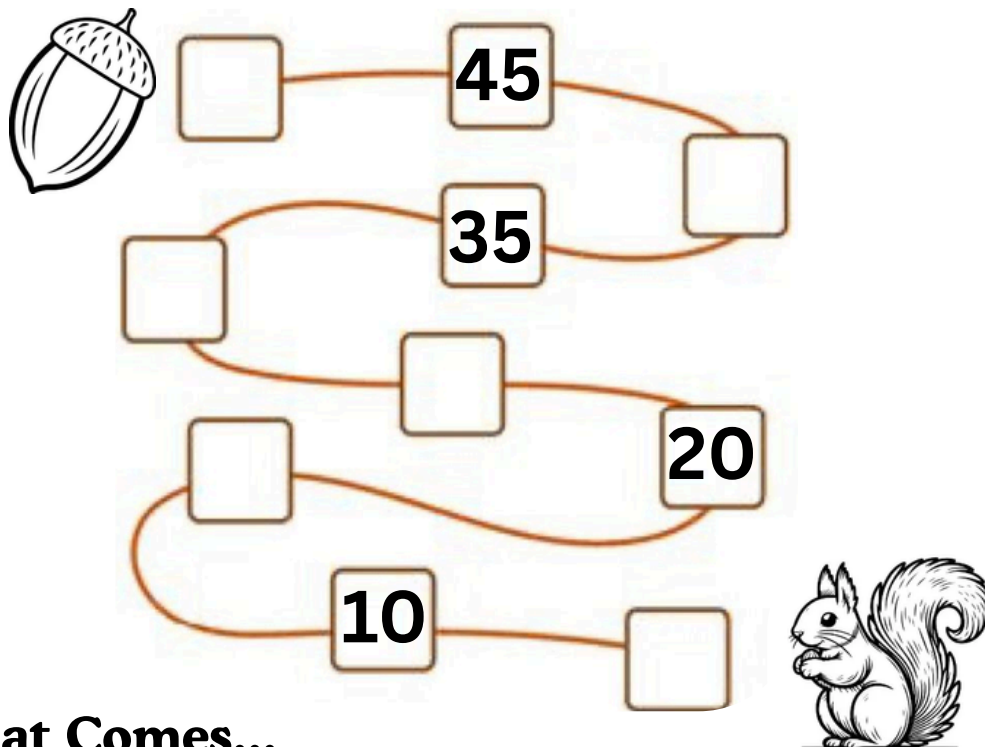


MATHS REVISION WORKSHEET-1(TERM - 2) GRADE PREP

Name.....

Date.....

Q1. Help the squirrel fetch his nut. Count by 5's. Fill in the missing numbers.



Q2. What Comes...

BEFORE

TO: TO

—	75
—	92
—	32
—	28

AFTER

TO: TO

90	—
67	—
89	—
77	—

BETWEEN

TO: TO: TO

12	—	14
89	—	91
56	—	58
83	—	85

Q3. Write sequential counting 241 to 270.

[illegible][illegible][illegible]



MATHS REVISION WORKSHEET-2 (TERM - 2) GRADE PREP

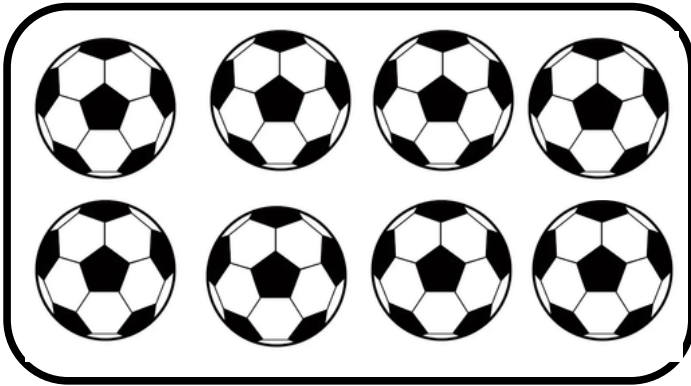
Name.....

Date.....

Q1. Compare the numbers by using $>$, $<$ or $=$ sign.





23	<input type="text"/>	27	10	<input type="text"/>	100
53	<input type="text"/>	53	46	<input type="text"/>	36
89	<input type="text"/>	99	75	<input type="text"/>	76
67	<input type="text"/>	76	61	<input type="text"/>	59
15	<input type="text"/>	26	55	<input type="text"/>	47
25	<input type="text"/>	52	18	<input type="text"/>	21

Q2. Count the number of pictures and write the correct number and number name in the given boxes.



Number

Number Name



Q3. Add the following numbers.

T	O
	7
+	2

T	O
	4
+	4

T	O
	2
+	3

T	O
	3
+	2

T	O
	8
+	1

T	O
	3
+	5

T	O
	7
+	1

T	O
	6
+	2