



MATH REVISION WORKSHEET

TERM-II

Name: _____ Grade: _____ Date: _____

Q 1. Write the number names for the following numerals.

a. 99

b. 56



Q 2. Fill in the blanks.

a. _____ hand of a clock is called the long hand.

b. The numeral for sixty nine is _____.

c. _____ comes before 100.

d. _____ comes after 89.

e. $5 \times 5 =$ _____

Q. 3 There are 78 eggs in the basket. 45 eggs are rotten. How many eggs are not rotten?

Total number of eggs

Number of eggs rotten

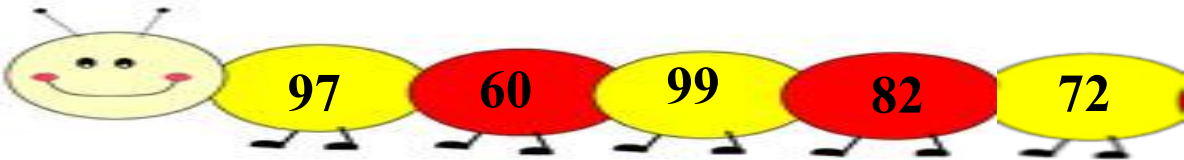
	T	O



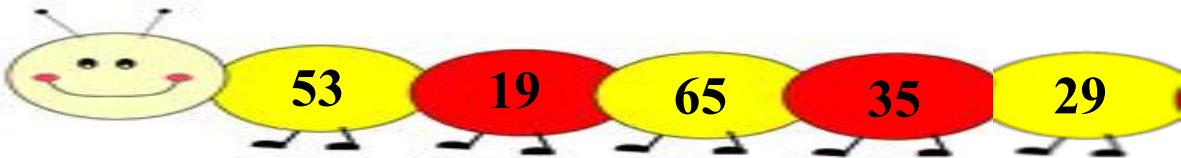
_____ eggs are not rotten.

Q 4. Write in descending order.

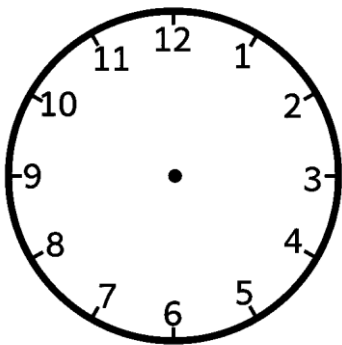
a.



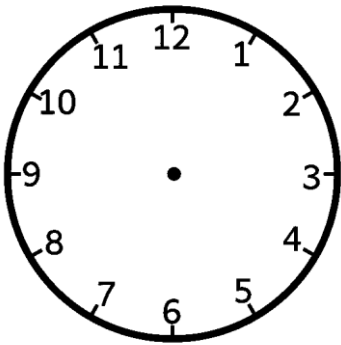
b.



Q 5. Draw the hands of the clock to show the time.



7 o' clock



12 o' clock

Q 6. Subtract.

	T	O
	8	3
-	7	3

	T	O
	9	6
-	2	1

	T	O
	4	9
-	2	9