



# Holidays Homework

# *Winter break*

BRAIN INTERNATIONAL SCHOOL

GRADE : 4

SESSION : 2025-26





# *Discover · Learn · Excel*

Winter is a time to slow down, reflect, and explore new ideas.

This winter break, your learning activities are designed to keep curiosity alive while you relax and enjoy the season.

These tasks are not just practice, they are opportunities to read, create, think, and discover new interests. Whether you are writing, drawing, solving puzzles, or observing the world around you, each activity helps you learn in a fun and meaningful way.

Use this break to try new hobbies, spend time with family, and enjoy learning beyond the classroom. Stay curious, keep exploring, and remember. Learning continues in every season.

*Wishing you a warm, joyful, and inspiring winter break filled with learning, laughter, and discovery!*







## SUBJECT: ENGLISH

NAME: \_\_\_\_\_ CLASS: \_\_\_\_\_ DATE: \_\_\_\_\_

### READING

**Q1. Read the passage given below and answer the following questions.**

American turtles are fascinating reptiles found across the United States in rivers, lakes, wetlands, forests, and even deserts. They are cold-blooded animals, which means they depend on their surroundings to regulate body temperature. Most turtles have hard shells that protect them from predators, and this shell is an important part of their body structure.

There are many species of turtles in America, such as snapping turtles, box turtles, and sea turtles. Freshwater turtles usually eat plants, insects, and small fish, while sea turtles mostly feed on jellyfish, sea grass, and algae. Turtles are known for their long lifespan, and some species can live for more than 50 years.

However, American turtles face many dangers today. Pollution, road accidents, illegal pet trade, and loss of natural habitats have reduced their population. Conservation efforts are necessary to protect these gentle creatures and maintain ecological balance.



**I. Answer the following questions in one sentence.**

A. What does it mean that turtles are cold-blooded animals?

---

B. Name any two threats faced by American turtles.

---

C. What kinds of food do freshwater turtles usually eat?

---

D. What are the turtles known for?

---

E. Mention some species of turtles found in America.

---

**II. Choose the correct option for the following questions.**

A. Which of the following is an important function of a turtle's shell?

- a) Helps in swimming faster
- b) Protects from predators
- c) Stores food
- d) Keeps the turtle warm

B. Which food is commonly eaten by sea turtles?

- a) Insects
- b) Small fish
- c) Jellyfish
- d) Fruits

C. Why are conservation efforts important for American turtles?

- a) To increase their speed
- b) To protect them from cold weather
- c) To save them from extinction
- d) To train them as pet

## WRITING

## TOPIC- FORMAL LETTER

**Q2. Write an application to the Principal of your school in around 100-120 words, requesting 12 days leave as you are selected for the finals of your singing competition for which you've to travel out of station.**

This image shows a full page of blank, cream-colored paper with horizontal ruling lines. The lines are evenly spaced and run across the width of the page, providing a template for handwriting practice or note-taking. There are no margins, text, or other markings on the page.

**Q3. Write a paragraph on the topic- “Measures to control air pollution” in around 100-120 words.**

This image shows a single sheet of white paper with horizontal blue ruling lines. The lines are evenly spaced and run across the width of the page. There are no margins, text, or other markings on the paper.

## GRAMMAR

### TOPIC- CONJUNCTIONS

**Q4. Fill in the blanks with suitable conjunctions.**

- a) The bus was late, \_\_\_\_\_ we reached school after the bell rang. (**so / but / or**)
- b) She is studying hotel management \_\_\_\_\_ she has to become a chef. (**for / and / but**)
- c) Would you like to read a book \_\_\_\_\_ play a game? (**or / and / so**)
- d) He tried his best, \_\_\_\_\_ he did not win the race. (**and / but / for**)
- e) It was very cold, \_\_\_\_\_ we wore sweaters. (**so / yet / or**)

### TOPIC- TENSE

**Q5. Change the tense of the following sentences as directed.**

- a) The cat is hiding under the pillow. (**Change to Past continuous**)  
\_\_\_\_\_
- b) She is getting late for her language class. (**Change to Simple Future**)  
\_\_\_\_\_
- c) The children were singing loudly. (**Change to Present continuous**)  
\_\_\_\_\_
- d) We will go at the park after lunch. (**Change to Simple Past**)  
\_\_\_\_\_
- e) I will visit my grandmother on my birthday. (**Change to Future Continuous**)  
\_\_\_\_\_
- f) Shaem lived in Navi Mumbai. (**Change Simple Present**)  
\_\_\_\_\_



# Brain International School

Vikas Puri, New Delhi

विषय: हिंदी

नाम - -----

कक्षा -चार -----

दिनांक - -----

## अपठित गद्यांश

**प्रश्न 1 निम्नलिखित गद्यांश पढ़कर पूछे गए प्रश्नों के उत्तर दीजिए -**

वर्तमान काल को विज्ञापन का युग माना जाता है। समाचार पत्रों के अलावा रेडियो और टेलीविजन भी विज्ञापन के सफल साधन हैं। विज्ञापन का मूल उद्देश्य उत्पादक और उपभोक्ता के बीच सीधा संपर्क स्थापित करना है। किसी पदार्थ का जितना अधिक विज्ञापन होगा, उसकी लोकप्रियता उतनी ही अधिक बढ़ेगी। इन विज्ञापनों पर ज़्यादा पैसा खर्च होता है लेकिन इससे बिक्री बढ़ जाती है। जब ग्राहक इन आकर्षक विज्ञापनों को देखता है तो वह उस विशेष वस्तु की ओर आकर्षित हो जाता है और उस वस्तु को खरीदने के लिए मजबूर हो जाता है।

(क) वर्तमान युग में विज्ञापन के कौन-कौन से तीन साधन हैं ?

-----  
-----

(ख) विज्ञापनों का ग्राहक के ऊपर क्या प्रभाव पड़ता है ?

-----  
-----

(ग) विज्ञापन का मूल उद्देश्य क्या है ?

-----  
-----

(घ) गद्यांश में से कोई दो संयुक्त व्यंजन शब्द छाँटकर लिखिए ।

-----

(ङ) उपर्युक्त गद्यांश का उचित शीर्षक दीजिए ।

-----



## व्याकरण

प्रश्न 2 निम्नलिखित वाक्यांशों के लिए एक शब्द लिखिए -



(क) जहाँ पढ़ने जाते हैं -----



(ख) जहाँ इलाज के लिए जाते हैं -----

प्रश्न 3 निम्न एक शब्दों के लिए वाक्यांश लिखिए -



(क) अतिथि ----- (ख) चिड़ियाघर -----

प्रश्न 4 निम्नलिखित वाक्यों में उचित विराम-चिह्न लगाइए -

(क) मोहन के माता पिता आगरा में रहते हैं

(ख) कल सेब संतरा और अनार किसने खाया था

## पाठ्यपुस्तक

प्रश्न 5 निम्नलिखित प्रश्नों के उत्तर 30-40 शब्दों में दीजिए -

(क) हमें दीपावली का पर्व किस प्रकार मनाना चाहिए ?

---

---

(ख) कविता का भाव अपने शब्दों में लिखिए ।

---

---

प्रश्न 6 निम्न शब्द का अर्थ लिखकर वाक्य में प्रयोग कीजिए -

उपहार - -----

---

## लेखन

प्रश्न 7 'समय का सदुपयोग' विषय पर 120 शब्दों में एक कहानी लिखिए ।

This image shows a blank sheet of white paper with horizontal dashed lines. The lines are evenly spaced and run across the width of the page, providing a guide for handwriting or drawing. There are no other markings, text, or illustrations on the page.

**प्रश्न 8 अपने छोटे भाई/बहन को पढ़ाई के लिए प्रोत्साहित करते हुए पत्र लिखिए ।**

This image shows a blank sheet of white paper with horizontal dashed lines. The lines are evenly spaced and run across the width of the page, providing a guide for handwriting practice. There are no other markings or text on the page.





## SUBJECT: MATHS

NAME: \_\_\_\_\_ CLASS: \_\_\_\_\_ DATE: \_\_\_\_\_

Q1)


Complete the factor tree. Remember that there is more than one factor to get the right answer. Stop when you are left with all prime numbers. Circle all the prime numbers.

a.

b.

c.

Q2) Find the factors of these numbers and write down the common factors in the blanks:



a) Factors of 9 \_\_\_\_\_  
Factors of 15 \_\_\_\_\_  
Common factors \_\_\_\_\_

b) Factors of 25 \_\_\_\_\_  
Factors of 40 \_\_\_\_\_  
Common factors \_\_\_\_\_

**Q3) Do the conversions:**

Questions	Answer
45 hg to cg	
13900 g to cg	
409 m to mm	
167 hg to g	
432 ℓ to mL	

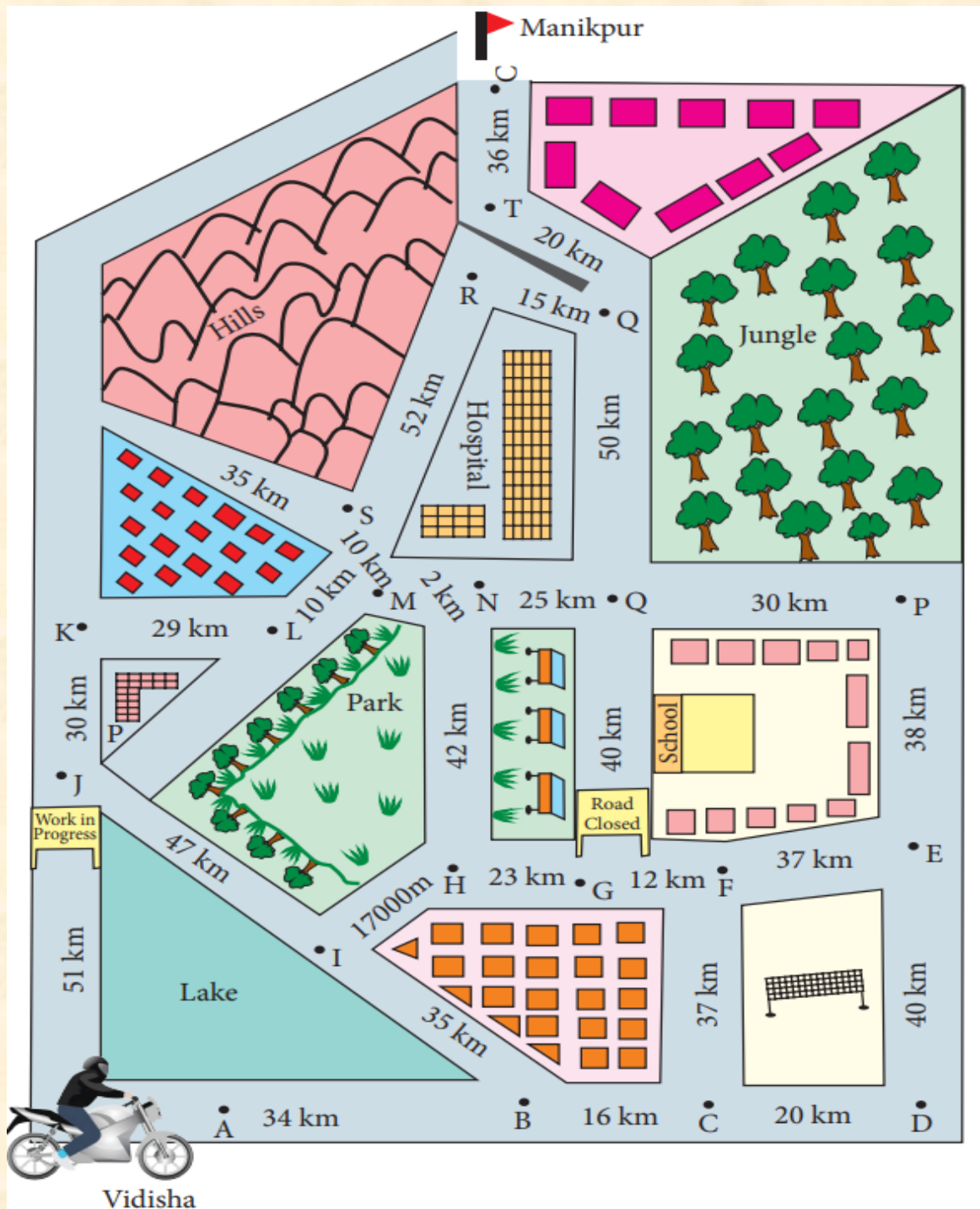
**Q4) MENTAL MATHS:-**

- a) The difference of the place values of two 5s is 3,25,165 = \_\_\_\_\_.
- b) The estimated sum of 15,444 and 2668 to the nearest ten = \_\_\_\_\_.
- c)  $4,218 \div 10$  gives quotient = \_\_\_\_\_ and remainder = \_\_\_\_\_.
- d)  $\frac{1}{3}$  of 21 = \_\_\_\_\_.
- e) Convert  $\frac{43}{13}$  in mixed fraction = \_\_\_\_\_
- f) 5269 mg = \_\_\_\_\_ g \_\_\_\_\_ mg
- g) The sum of 3 km 500 m and 5 km 495 m is \_\_\_\_\_.
- h) \_\_\_\_\_ should be added to 56,024 to get 90,000.
- i) Write 0.36 in words \_\_\_\_\_.
- j) The smallest 5 – digit odd number is \_\_\_\_\_.



## ACTIVITY

**Q5)** Lalit is going to Manikpur from Vidisha. He can cover the distance of only 275 km as the bike has less petrol. Trace the shortest possible route to Manikpur that will either cover 275 km or less





# Brain International School

Vikas Puri, New Delhi

## SUBJECT: EVS

NAME: \_\_\_\_\_

CLASS-IV \_\_\_\_\_

DATE: \_\_\_\_\_

**Q.1. Choose the correct answer.**

**1) Which of these does not get its shape from air?**

a) tyre                      b) balloon                      c) tree                      d) football

**2) When the wind blows gently, we call it a \_\_\_\_\_.**

a) wind                      b) strom                      c) breeze                      d) air

**Q.2. What are the effects of global warming?**

---

---

---

---

---

---

---

**Q.3 Ravi had blown a whistle in the class. Everyone could hear the loud sound. Which characteristic of air makes it happen?**


**Ans.)** \_\_\_\_\_

---

---

---

**Q.4. Read the clues and solve the crossword puzzle.**



**Across**

**3.** The movement of air at the earth's surface

**6.** A violent, rotating storm that happens over ground

**7.** We call how hot or cold, windy or rainy the day is the \_\_\_\_.

**8.** A gentle wind

**9.** A gas that we can breath

**10.** A sudden rush of wind

**Down**

**1.** A scientist who studies weather

**2.** A large rotating storm that forms in tropical waters

**4.** Something that doesn't stand still is in \_\_\_\_.

**5.** A substance that fills the entire space, has no shape