



Brain International School

Recognised Senior Secondary School, Affiliated to CBSE
Vikas Puri, New Delhi

Winter Holiday Homework

Grade - I

Session-2025-26

❄️ ***"Winter is a time to rest, learn, and grow in warmth and care."*** ❄️

Holidays are a happy time for children to relax, enjoy with their family, and stay healthy. Share kindness with your friends and family, because the happiest winter memories are made when we laugh, learn, and care for one another.

This break also helps children remember and revise what they have learned in class so far. To make learning fun and easy during the holidays, a few worksheets have been given. Completing these activities will help children feel confident and ready to return to school after the holidays. Have a safe, joyful and enriching winter break!

✨ ***"Let's revise what we have learned and make our learning stronger!"***

- ***Revise the work done in class.***
- ***Practice all 42 sounds regularly.***
- ***Make new words using 7 clusters.***
- ***Complete all worksheets neatly and independently.***





Brain International School

Recognised Senior Secondary School, Affiliated to CBSE
Vikas Puri, New Delhi

English Worksheet

Name: _____ Grade: _____ Date: _____

Q1. Tick (✓) the correct adjective.

1. A fox is _____. (clever / heavy)



2. Ice is _____. (cold / loud)



3. A feather is _____. (light / hard)



4. A king lives in a _____ palace. (big / dirty)



5. Cotton is _____. (soft / sharp)



6. A snail is _____. (slow / fast)

Q2. Use the given words to make meaningful sentences.

a) clean: _____



b) happy: _____



c) beautiful: _____




Q3. Fill in the blanks using the correct singular or plural form of the word in brackets.

1. Two _____ are playing in the park. (student)



2. I can see three _____ on the tree. (bird)



3. The _____ is barking loudly. (dog)



4. Many _____ are lying on the table. (box)



5. One _____ is missing. (shoe)



6. Five _____ are kept in the basket. (apple)



Q4. Match the singular noun with its plural noun.

Singular

Plural

1. table

a) chairs

2. peach

b) pencils

3. ostrich

c) peaches

4. chair

d) tables

5. pencil

e) ostriches



Brain International School


Recognised Senior Secondary School, Affiliated to CBSE
Vikas Puri, New Delhi

हिंदी कार्यपत्रक

नाम - _____ कक्षा : I- _____ तिथि- _____

प्र 1. नीचे दिए गए चित्र का नाम लिखें व उससे एक वाक्य बनाइए ।





प्र 2. नीचे दिए गए चित्र को देखिए और शब्दों को एकवचन व बहुवचन में लिखिए।
एक उधारण दिया गया है।



बोतल



बोतलें


















प्र 3. नीचे दिए गए वाक्यों में खाली स्थान भरिए ।

१. एक वर्ष में _____ महीने होते हैं ।

२. जनवरी के बाद _____ आता है।

३. अगस्त और अक्टूबर के बीच में _____ आता है।

४. जून से पहले _____ आता है।

५. सोमवार के बाद _____ आता है ।

६. एक हफ्ते में _____ दिन होते हैं।

७. शनिवार से पहले _____ आता है।



प्र 4. नीचे दिए गए वाक्यों में नाम वाले शब्दों पर गोला लगाइए ।

१. आसमान में चिड़ियाँ उड़ रही हैं।

२. राजू गेंद से खेल रहा है।

३. मीना जयपुर में रहती है ।

४. मोर जंगल में नाच रहा है।

५. शेर जंगल का राजा है।



प्र 5. नीचे दिए गए शब्दों के समानतुक वाले शब्द लिखें ।

१. ढोल

४. बाजा

२. मैना

५. हिसाब

३. खेल

६. थैला



MENTAL MATH WORKSHEET

Name: _____ Grade: _____ Date: _____

Answer the following:

- a. What comes after 59? _____
- b. _____ hand is called the short hand.
- c. The number name for 13 is _____.
- d. What comes before 100? _____.
- e. $5+5+5+5=$ _____ \times _____ $=$ _____.
- f. _____ comes in between 89 and 91.

g. Circle the greatest number-

- a. 26 b. 62 c. 20

h. Put a cross on the smallest number -

- a. 54 b. 45 c. 50

i. Tick the correct spelling of 11

- 1. eleventeen 2. eleven 3. eleveen

j. There are 5 birds on the tree. 2 birds flew away. How many birds are still there on the tree? _____





MATH WORKSHEET

Name: _____ Grade: _____ Date: _____

Q 1. Write the number names for the following numerals.

a. 77

b. 94



Q 2. Put the correct sign $>$, $<$ or $=$

TO

TO

a. 23


20

b. 56

56

c. 87

89



Q 3. Mohan has 45 pencils. He gave 23 pencils to his sister. How many pencils are left with him now?

Total number of pencils

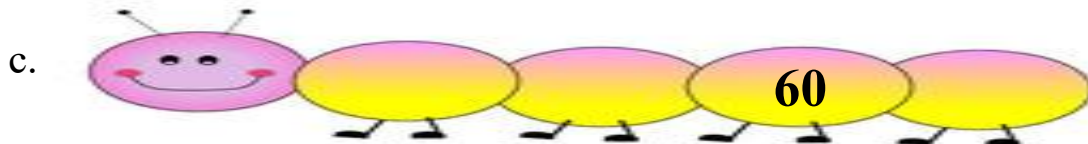
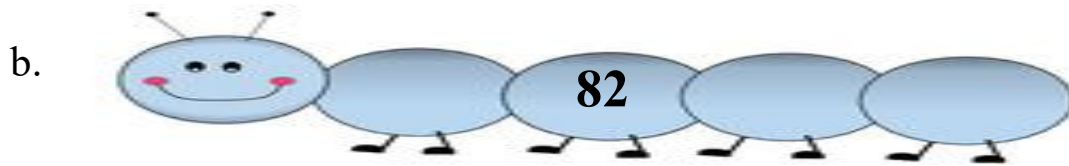
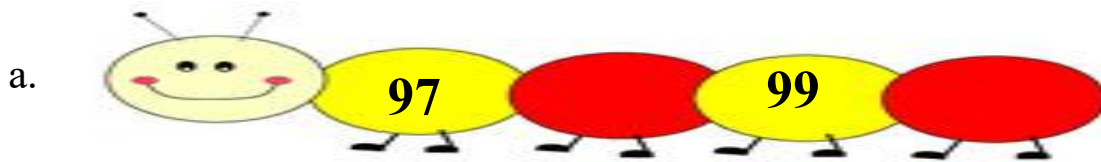
Number of pencils he gave to his sister

	T	O

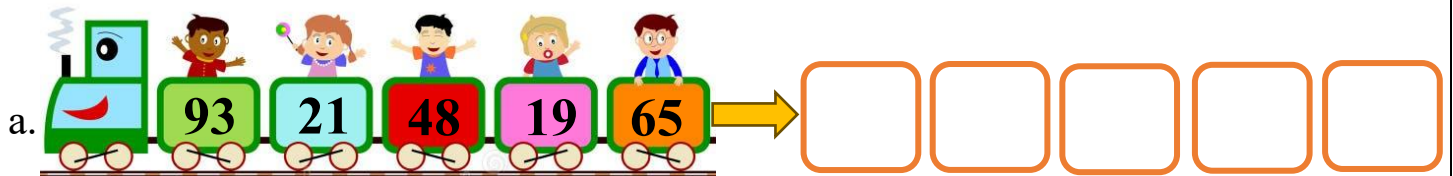


There are _____ pencils left with him.

Q 4. Write the number that comes after, before or in between.



Q 5. Write in ascending order.



Q 6. Write the time shown in the following clocks.





EVS WORKSHEET

Name: _____ Grade: _____ Date: _____



Q.1 Fill in the blanks with the correct words.

- The _____ (monkey/ crocodile) lives both on land and in water.
- The _____ (birds/insects) have six legs.
- The _____ (parrot/ pig) is a pet animal.
- We get _____ (honey/oil) from plants.
- The wild animals live in the _____ (forest/farm).



Q.2 Name the following (any two).

- Wild animal _____ , _____
- Medicinal plants _____ , _____
- Tools used by a carpenter _____ , _____



Q.3 Match the following.

a.



d.



c.



b.

