

St. Mary's School, Dwarka
Practice Worksheet (December)

Class: I

Subject: English

Topic: L-7, The Red Raincoat

Name: _____ **Sec:** _____ **Date:** _____ **Roll No:** _____

1. Read the passage and answer the questions that follow.

Emma lives in Germany with her family. Every year in December, her town has a big Christmas market. Many people come to the market. She walks around the market with her parents. She sees bright lights and hears happy music. Emma drinks hot chocolate to keep herself warm. She also eats cookies, buns and candies. This year, Emma buys a small wooden angel. She takes it home and puts it on her Christmas tree. She feels very happy at the Christmas market.

a) Where does Emma live?

b) Who goes to the market with Emma?

c) Look at the word grid and circle the correct

food items that Emma eats at the market.

A	S	D	F	I	N	K	F
C	C	A	N	D	I	E	S
D	K	R	P	I	E	D	S
C	O	O	K	I	E	S	X
C	T	I	U	D	R	G	M
H	O	B	U	N	S	E	S

d) Make a sentence of your own using the given word.

yummy- _____

e) Find the rhyming word of the given words from the passage.

heels- _____ down- _____

2. Answer the following questions.

a) Why did Manu take the raincoat on Thursday?

b) How was the sky on Tuesday?

c) Did Manu wear the raincoat when it rained?

3. Fill in the blanks with a / an and complete the sentences.

- a) She has _____ apple in her bag.
- b) I see _____ elephant at the zoo.
- c) There is _____ ball under the table
- d) He read _____ story before sleeping.
- e) The boy found _____ egg in the nest.

4. Fill in the blanks with the correct word from the brackets.

- a) My sister _____ a red dress. (have/has)
- b) I _____ two pencils in my box. (has/have)
- c) Riya _____ a pet cat. (has/have)
- d) They _____ to go to school early. (has/have)
- e) Birds _____ wings to fly high up in the sky. (have/has)

5. Look at the picture and write five lines about it using the given words.



Christmas	December	Santa Claus	gifts	decorate
-----------	----------	-------------	-------	----------

- 1. _____
- 2. _____
- 3. _____
- 4. _____
- 5. _____

St. Mary's School, Dwarka
Practice Worksheet (December)
Class: I
Subject: Hindi

विषय : ॐ चंद्रबिंदु की मात्रा

Name: _____ **Sec:** _____ **Date:** _____ **Roll No:** _____

1. नीचे दिए गए गद्यांश को पढ़कर प्रश्नों के उत्तर दीजिए—

अमन अपनी माँ और पिता के साथ गाँव में रहता है। उसकी माँ का नाम साँवरी और पिता का नाम मोहन है। उसकी माँ बहुत सुंदर हैं। वे सदा हँसती रहती हैं। अमन का गाँव झाँसी में है। वह रोज़ नदी किनारे पेड़ की छाँव में बाँसुरी बजाता है। वहाँ की हरी-हरी घास देखकर उसे बहुत अच्छा लगता है।

क) अमन गाँव में किसके साथ रहता है?

ख) अमन की माँ का नाम क्या है?

ग) अमन रोज़ नदी किनारे क्या करता है?

घ) दिए गए शब्दों के मिलते – जुलते शब्द गद्यांश में से ढूँढ़कर लिखिए—

i) खाँसी – _____ ii) पाँव – _____

2. नीचे दिए गए प्रश्नों के उत्तर दीजिए—

क) नदी के किनारे क्या है ?

ख) आँगन में किसका पेड़ लगा है ?

3. नीचे दिए गए शब्दों के अनेक शब्द लिखिए—

क) तिली - _____ ख) चूड़ी - _____

ग) जलैबी - _____ घ) बकरी - _____

4. नीचे दिए गए वाक्यों में क्रिया शब्दों को रेखांकित कीजिए—

क) राम खेल रहा है।

ख) मोहन सुरीला गाना गाता है।

ग) हमें एक जगह बैठकर पढ़ना चाहिए।

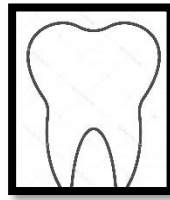
घ) मोर नाच रहा है।

ङ) नानी कहानी सुना रही हैं।

5. नीचे दिए गए चित्रों को देखकर उनके नाम लिखिए -



क) _____



ख) _____



ग) _____



घ) _____

6. नीचे दिए गए संख्या शब्दों के अंक लिखिए -

क) आठ - _____

ख) चार - _____

ग) तीन - _____

घ) दस - _____


St. Mary's School, Dwarka
Practice Worksheet (December)
Class: I
Subject: Mathematics

Topic: L-9 Length

Name: _____ **Sec:** _____ **Date:** _____ **Roll No:** _____

1. Look at the picture and fill in the blanks using the words in the box.

taller, shorter, tallest, shortest



- a) Ben is _____ than Jack.
- b) Lucy is the _____ of all the four children.
- c) Henry is the _____ of all.
- d) Ben is _____ than Lucy, but _____ than Jack.

2. Measure the following objects and write in units. 1  is 1 unit.



a) _____



b) _____

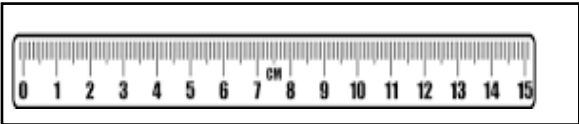

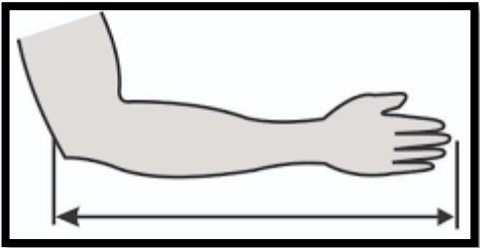
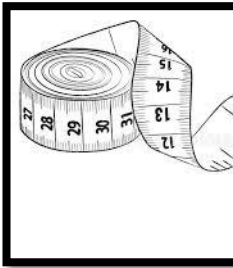


c)

3. Match the following.

a)		  	()
b)		   	()
c)		  	()

5. Write S for standard unit and NS for non-standard units.

a)		b)	
	_____		_____
c)		d)	
	_____		_____

St. Mary's School, Dwarka
Practice Worksheet (December)
Class: I
Subject: Language Practice

Topic: L-9, Weather and Seasons

Name: _____ **Sec:** _____ **Date:** _____ **Roll No:** _____

1. Fill in the blanks using the correct word from the given box.

Christmas	hot	Flowers	summer	winter
-----------	-----	---------	--------	--------

- a) We use a fan when the weather is _____.
- b) The sun shines brightly during the _____ season.
- c) _____ bloom in the spring season.
- d) We wear woollen clothes during the _____ season.
- e) We celebrate _____ during the winter season.

2. Circle the odd one out.

- a) juice cold- coffee soup
- b) gumboots sweater raincoat
- c) spring day night
- d) snow rain socks

3. Write T for true and F for the false statements.

- a) Dark clouds appear during the rainy season. _____
- b) Summer season is the coldest season. _____
- c) It does not snow during winter. _____
- d) We see thunder and lightning during the summer season. _____

4. Name any three

- a) seasons-

b) clothes that people wear during the winter season -


c) things that people like to eat during the summer season-

5. Write the given words under their correct season.

mittens, cotton shirt, umbrella, jacket, raincoat, gloves, skirt, shorts, gumboots

Summer Season	Winter Season	Rainy Season

6. Draw and colour two things you use during the rainy season.



St. Mary's School Dwarka
Practice worksheet
Class: I
Subject: Computer Science

Topic: L-8, Let's Draw with AI

Name: _____ **Section:** _____ **Date:** _____ **Roll No:** _____

1. Fill in the blanks.

a) _____ things are made or produced by human beings.

(Natural/ Artificial)

b) _____ is the ability to think, learn from experience.

(Intelligence/ Ignorance)

c) Through _____ Intelligence, a computer can play, talk and do many other things. (Artificial/ Natural)

d) _____ is free online program. (AutoDraw/Paint)

2. Look at the pictures given below and write N for natural, A for artificial things in the box.

a)

☐☐

b)

☐☐


c)

☐☐

d)



3. Circle the pictures that show use of intelligence in human beings.



4. Write the names of any two machines that use AI technology.
