





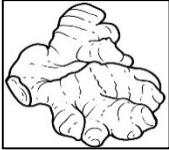

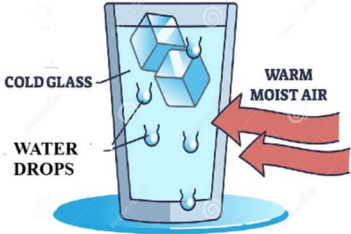
**ITL PUBLIC SCHOOL  
PRE-PERIODIC TEST-II (2025-26)**

**DATE :  
NAME:**

**THE WORLD AROUND US**

**Class: III sec  
Roll No:**

**SECTION-A (4 Marks)**

1.	<b>Choose the correct option and write it in the box on the right side -</b>	<b>4</b>
	<p>i) _____ is an example of edible root.</p> <p>a)       b)       c)       d) </p>	
	<p>ii) _____ is a natural source of water.</p> <p>a) Tap                      b) Tube well                      c) Well                      d) River</p>	
	<p>iii) Which of the following is a body-building food?</p> <p>a) Rice                      b) Dal                      c) Fruit                      d) Sugar</p>	
	<p>iv) Identify the process shown in the given picture-</p> <div align="center">  </div> <p>a) Evaporation      b) Condensation                      c) Precipitation      d) Freezing</p>	

**SECTION-B (8 Marks)**

2.	<p><b>Give reason-</b></p> <p>a) Rain is important for maintaining water in ponds. Reason _____ _____ _____</p> <p>b) Chemicals or soaps should not be added in water. Reason _____ _____ _____</p> <p>c) We drink more water in summer season. Reason _____ _____ _____</p>	<b>4</b>
----	--	----------

	<p>d) Junk food should be avoided.</p> <p>Reason_____</p> <p>_____</p> <p>_____</p>	
--	---	--

3.	<p>Draw and label any <b><u>two food items</u></b> which can be eaten both raw as well as after cooking.</p> <div style="border: 1px solid black; height: 200px; width: 100%;"></div>	2
----	---	---

4	<p>a) Identify the process shown in the given picture-</p> <p>Ans. _____</p> <p>b) How will you define the process?</p> <p>Ans. _____</p> <p>_____</p> <p>_____</p> <p>_____</p>	<div style="text-align: center;"> </div>	2
---	--	--	---

### SECTION-C (8 Marks)

5	<p><b>Read the given text and answer the questions that follow-</b></p> <p><b><i>Many years ago, there were no pipes or taps anywhere in the world. So, people learned to make containers or vessels to store water. (NCERT Textbook)</i></b></p> <p>a) Name any two vessels needed to store water.</p> <p>Ans. _____</p> <p>_____</p> <p>b) Why should we store water?</p> <p>Ans. _____</p> <p>_____</p>	2
---	--	---

6	<p><b>Read the given text and answer the questions that follow-</b></p> <p><i>Chappan Bhog contains 56 varieties of food items representing a harmonious blend of six tastes: sweet (meetha), spicy (teekha), astringent (kasaila), sour (khatta), salty (namkeen) and bitter (karva). (NCERT Textbook)</i></p> <p>a) Give examples of any two food items which are sour in taste. Ans. _____ _____</p> <p>b) Why and when is Chappan Bhog prepared? Ans. _____ _____</p>	2
7	<p><b>Read the given case-study and answer the questions that follow-</b></p> <p><i>Rohan brings a lunch box filled with chapati, dal and salad. His friend Meena brings idli and coconut chutney. Both children share their food happily. Their teacher says that different places have different types of food, but all help us stay healthy.</i></p> <p>a) What do we learn when children share food from different regions? Ans. _____ _____</p> <p>b) Why is it good to eat different kinds of food? Ans. _____ _____</p>	2
8	<p><b>Read the given case study and answer the questions that follow-</b></p> <p><i>In Anil's school, one tap near the playground leaks the whole day. Nobody notices it because everyone is busy playing. By afternoon, a big puddle forms under the tap. The teacher tells the class that this is a big waste of clean water.</i></p> <p>a) How is water getting wasted in Anil's school? Ans. _____ _____</p> <p>b) What should students do when they see a leaking tap? Ans. _____ _____</p>	2