

ITL PUBLIC SCHOOL
PRE-PERIODIC TEST-1 (2025-26)
THE WORLD AROUND US

DATE: 14 July 2025

CLASS: V Sec: __

SECTION A (4 Marks)

1 Give answer in one word-

- a) The objects that do not allow light to pass through them-
- b) An imaginary path in which a celestial body revolves around another-
- c) The energy-giving nutrients-
- d) An unexpected event caused by nature that causes significant harm to people and property-

SECTION B (8 Marks)

2 Give reason:

- a) Some things sink and some things float in water.
- b) The length of a tree's shadow keeps on changing throughout the day.
- c) Animals in mountains have thick fur on them.
- d) Children should eat proper food.

3 Differentiate between transparent and translucent objects.

4 Draw and label different phases of the Moon.

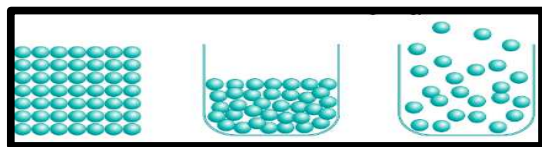
5 "Life is difficult in desert for plants and animals". Justify the statement.

6 Why should we eat proteins?

SECTION C (8 Marks)

7 Look at the given pictures and answer the questions that follow-

a) Which of the following shows the molecular arrangement of a gas?

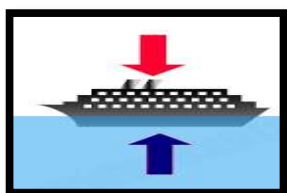


1


2

3

b) What are the two forces acting on the ship?



8 **Look at the given picture and answer the questions that follow-**



- a) What is a shadow?
- b) Name the conditions needed to form a shadow.

9 **Read the given text and answer the questions that follow-**

“Landforms are created through a combination of forces inside the Earth (like earthquakes and volcanoes) and forces from outside (like wind and water). These forces cause the Earth's surface to change over long periods of time.”

- a) How are different landforms created on earth?
- b) Draw a line diagram to show different landforms.

10 **Answer the questions based on the given picture.**



Raju

Rohan

Rahul

- a) Who amongst the above three seem to be eating a healthy diet?
- b) Why does Raju look weak and sick?