



ITL PUBLIC SCHOOL
PRE PERIODIC TEST - 1 (2025-26)
MATHEMATICS

DATE :
NAME :

Class: III Sec: _____
ROLL NO :

SECTION – A

1 Look at the abacus and answer the questions given below:-

a) Write the number name.

b) Write the predecessor of the given number.

Predecessor - _____

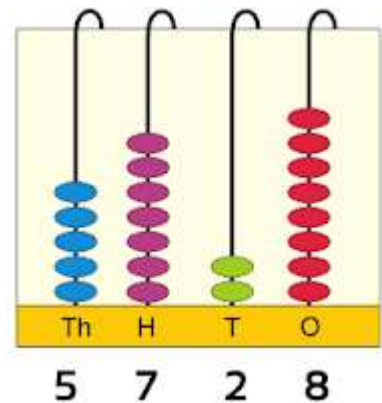
c) Write the successor of the given number

Successor - _____

d) Form the smallest and greatest 4 digit number using digits
5,7,2,8 only once.

Smallest - _____

Greatest - _____





2 a) Write the numeral for:

i) Century - _____

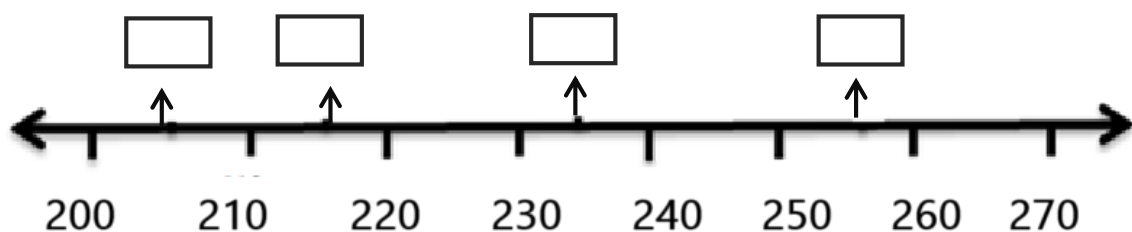
ii) Half century - _____

iii) Double Century - _____

b) Write any two numbers in the stars to make a 100

 +  = **100**

c) Fill in the empty boxes.



	d) In a sprint race Ruhi covered 65m, how much she has to run more to cover 100m? _____ metres more
	SECTION – B
3	a) Answer in one word i) Name the shape of a brick - _____ ii) Name the shape with no edges - _____ iii) Name the shape with only one curved surface - _____
4	a) Write the expanded form of 9764 - _____ b) Write Eight thousand two hundred ten in figures - _____ c) Write the face value and place value of 7 in the number 4 6 <u>7</u> 9 Face Value - _____ Place Value - _____ d) Form the smallest and greatest 4-digit number using digits 8, 5, 2, 9 only once. Smallest - _____ Greatest - _____
	SECTION – C
5	a) Draw a cube and cone in the space provided and label it. <div style="display: flex; justify-content: space-around; align-items: center; height: 150px;"> <div style="border: 2px solid black; width: 300px; height: 150px;"></div> <div style="border: 2px solid black; width: 300px; height: 150px;"></div> </div> b) Fill in the boxes: i) A cube has _____ faces, _____ edges and _____ vertices ii) Give two examples of cube _____ , _____ iii) A cone has _____ faces, _____ edges and _____ vertices iv) Give two examples of cube _____ , _____