

**St. Mary's School, Dwarka**  
**Practice Worksheet**  
**Class: V**  
**Subject: English**

**Topic: L-2, Prose: Thunder Cake**

**Read the following passage and answer the questions that follow.**

Birds are fascinating creatures that are found in nearly every part of the world, from the highest mountains to the deepest forests and even in our own backyards. They come in a wide variety of shapes, sizes, and colours, making them one of the most diverse groups of animals. Some birds, such as eagles, hawks, and swallows, can soar high in the sky, covering long distances in search of food or during migration. On the other hand, some birds, like penguins, are flightless. Although they cannot fly, penguins are excellent swimmers, and they have adapted to life in cold environments. **(Para 1)**

Birds are known for their ability to build nests, which they use to lay their eggs and raise their young ones. These nests can be found in a variety of places such as tree branches, cliffs, and even on the ground. Birds usually take great care of their eggs, keeping them warm until they hatch, and then they continue to care for the chicks after birth. In terms of their diet, birds typically feed on a range of food such as seeds, fruits, insects, and sometimes even small animals. These different food sources help birds stay healthy and strong. **(Para 2)**

Bird watching is a popular hobby among many people who enjoy observing birds in their natural habitat. Listening to the melodious songs of birds is also a calming and enjoyable experience. Birds play a very important role in nature as they help in spreading seeds from plants, which helps the plants grow in new areas. Moreover, birds help control insect populations by eating large numbers of insects, which helps maintain balance in ecosystems. **(Para 3)**

a) Which of these birds is unable to take flight?

- i) Eagle            ii) Penguin            iii) Hawk            iv) Swallow

b) What is one of the key ecological contributions of birds?

- |                                 |  |
|---------------------------------|--|
| i) To lay eggs.                 | ii) To spread seeds and control insects. |
| iii) To provide food to humans. | iv) To build nests for other animals.    |

c) How do birds care for their eggs?

---

---

---

d) Why is birdwatching considered a popular hobby?

---

---

---

e) Find the word from the passage which means the same as 'interesting' (Para 1)

- i) boring      ii) fascinating      iii) common      iv) ordinary

**2. Fill in the blanks with the correct options given in the brackets.**

- a) She made the cake all by \_\_\_\_\_. (herself/myself)
- b) We will go to the museum by \_\_\_\_\_ tomorrow. (ourselves/themselves)
- c) He blamed \_\_\_\_\_ for the mistake. (himself/ourselves)
- d) The cat cleaned \_\_\_\_\_ with its tongue. (itself/herself)
- e) You're going to have to drive \_\_\_\_\_ to school today. (itself/yourself)
- f) We can do it \_\_\_\_\_, without help. (himself/ourselves)
- g) They build the house by \_\_\_\_\_. (themselves/ourselves).
- h) I saw \_\_\_\_\_ in the reflection. (myself/herself)

**3. Answer the following questions.**

a) How did the grandmother help the little girl overcome her fear?

---

---

---

b) What lesson did the girl learn at the end of the story?

---

---

---

**4. Read the given lines and answer the following questions.**

You'll have to run out and get one egg from the henhouse," Grandma said as she pulled a mixing bowl from the cupboard. "Eggs from under the dark-spotted hen. Count the thunder, Grandma said. Real loud, one... two... three... four... five... until the storm is five miles away."

a) Who said this to whom?

---

b) What does Grandma ask the girl to do?

---

**5. Imagine you are the little girl from the story 'Thunder Cake'. Write a diary entry describing how you felt before, during, and after making the cake with your grandmother.**

[illegible]

**St. Mary's School, Dwarka**

**Practice Worksheet**

**Class: V**

**Subject: EVS**

**Topic: L-8, Senses in Animals; L-1, Changes in a Family**

**1. Choose the correct options for the following.**

- a) Which of the following animals uses its sense of smell to track food?  
i) owl                      ii) dog                      iii) bat                      iv) fish
- b) If people are forced to leave their homes due to the construction of a factory or highway, what type of migration is it considered?  
i) seasonal migration   ii) voluntary migration   iii) forced migration   iv) internal migration
- c) What body part does a butterfly use to suck nectar from flowers?  
i) proboscis                      ii) antennae                      iii) whiskers                      iv) teeth
- d) What helps a cat detect danger around it?  
i) whiskers                      ii) hair                      iii) tail                      iv) skin
- e) **Assertion: A snake does not have external ears.**  
**Reasoning: Snakes rely on vibrations to sense their surroundings, which helps them detect prey and predators.**  
i) Both assertion and reasoning are correct, and the reasoning is the correct explanation of the assertion.  
ii) Both assertion and reasoning are correct, but the reasoning is not the correct explanation of the assertion.  
iii) The assertion is correct, but the reasoning is incorrect.  
iv) The assertion is incorrect, but the reasoning is correct

**2. Fill in the blanks.**

- a) Chimpanzees use \_\_\_\_\_ to convey emotions.
- b) The \_\_\_\_\_ of a family may change due to marriage or the birth of a child.
- c) A cat's sense of \_\_\_\_\_ is about 15 times stronger than that of humans.
- d) Insects like houseflies have \_\_\_\_\_ eyes, which are made up of many individual lenses.

**3. Answer the following questions.**

- a) How does an eagle's sharp eyesight help it survive?

---

---

---

- b) How do bats find their way in the dark?

---

- 
- 
- c) Animals like polar bears hibernate in winter, while animals like crocodiles aestivate in summer. What might be the reason behind these different sleep behaviours?
- 
- 
- 

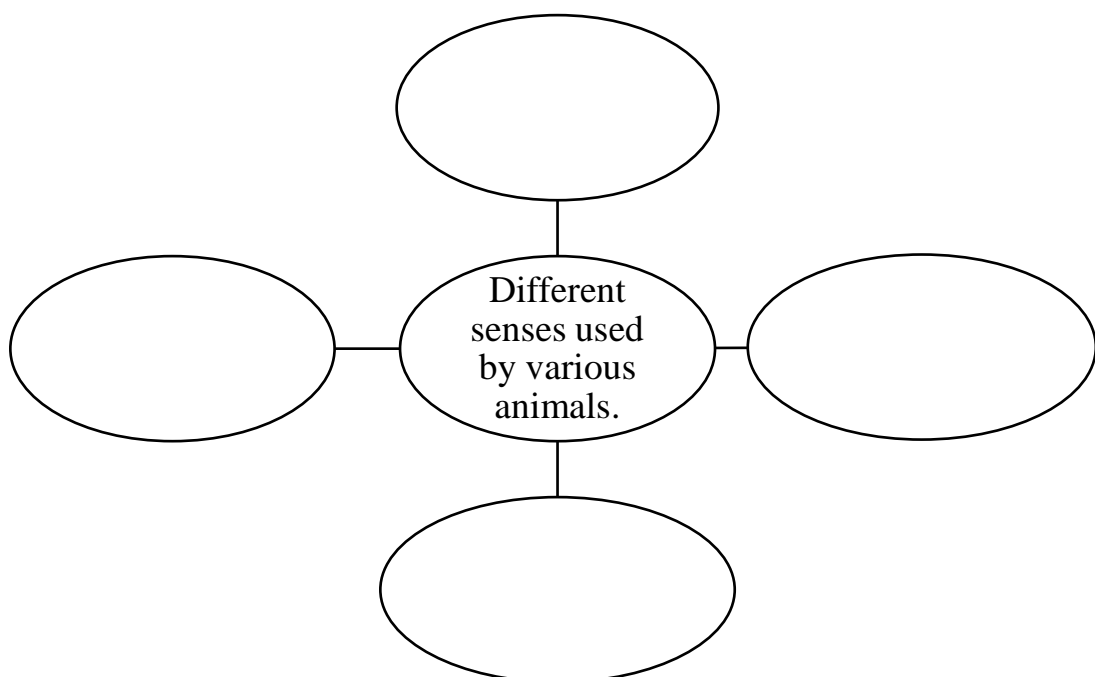
**4. Read the given case study and answer the following questions that follow.**

In a dense forest, animals use different ways to stay safe and communicate. Monkeys give loud alarm calls from the treetops when they see a predator like a tiger or leopard. Interestingly, the alarm sounds are different depending on which predator is seen. Birds use special sounds such as trills, pops, and squeaks to alert others or share messages. Honeybees perform a waggle dance to tell other bees where to find food.

- a) If a honeybee is moving in circles and performing a waggle dance in front of other bees. What could be the reason for this behaviour and how does it help the hive?
- 
- 

- b) Why do monkeys give different alarm calls when they see different predators?
- 
- 

**5. Make a G.O. showing the different senses used by various animals.**



**St. Mary's School, Dwarka**

**Practice Worksheet**

**Class: V**

**Subject: Mathematics**

**Topic: Ch-2, Multiplication and Division of Whole Numbers**

**1. Choose the correct options for the following.**

a)  $320 \div 40 = 320 \div 10 \div \underline{\hspace{2cm}}$

i) 40

ii) 4

iii) 6

iv) 400

b)  $60,000 \times 5 = \underline{\hspace{2cm}}$

i) 30,00,000

ii) 3,00,000

iii) 30,000

iv) 3000

c)  $64 \times 60 = \underline{\hspace{2cm}}$

i) 3,840

ii) 4850

iii) 38,400

iv) 38,040

d)  $86 \times 100 = 860 \times \underline{\hspace{2cm}}$

i) 10

ii) 1000

iii) 1

iv) 100

e) The value of  $36 \div 6 \times 3$  is

i) 2

ii) 6

iii) 18

iv) 12

f) Assertion (A):  $100 \div (20 - 15) \times 2 = 40$

Reason (R): Brackets are solved first, followed by division and multiplication from left to right.

i) Both A and R are true and R is the correct explanation.

ii) Both A and R are true but R is not the correct explanation.

iii) A is true but R is false.

iv) A is false but R is true.

**2. Fill in the blanks.**

a)  $123 \times 45 = 45 \times \underline{\hspace{2cm}}$

b) Aamir paid ₹960 for 32 books. The estimated cost of one book is  $\underline{\hspace{2cm}}$ .

c) The value of  $25 + 30 - 10$  is  $\underline{\hspace{2cm}}$ .

d)  $81 \times 1000 = \underline{\hspace{2cm}}$

e) \_\_\_\_\_  $\times$  48,000 = 0

f) 9,00,000  $\div$  \_\_\_\_\_ = 900

**3. Estimate the value of each of the following.**

a) $918 \times 57$	b) $4,432 \div 9$

**4. Find the value of the following.**


a) $(15 + 25) \div 5 \times 2$	b) $100 - 36 \div 6 + 4$
c) $(48 - 18) \div (6 \times 1)$	d) $72 \div (9 - 3) \times 2$

**5. A bus can carry 42 passengers. If 19 such buses are used for a school picnic. Estimate the total number of passengers transported.**

--

**6. A truck delivers 750 bags of rice on each trip.**

**a) How many bags are delivered in 90 trips?**



**b) In April, the truck made 1350 trips. How many trips were made each day in 30 days?**





**St. Mary's School, Dwarka**

**Practice Worksheet**

**Class: V**

**Subject: Computer Science**





**Topic: L-6, Google Apps**

**L-3, Excel Introduction**

**1. Read the sentences and answer the following questions.**

- a) A virtual assistant developed by Google. \_\_\_\_\_
- b) The cell that has a dark border around it. \_\_\_\_\_
- c) The horizontal and vertical lines representing the rows and columns on the worksheet.  
\_\_\_\_\_
- d) A free online translation service instantly translates text into other languages.  
\_\_\_\_\_
- e) This is used to enlarge or reduce the view of the worksheet. \_\_\_\_\_

**2. Identify the icon and write their name.**

- a)  \_\_\_\_\_
- b)  \_\_\_\_\_
- c)  \_\_\_\_\_
- d)  \_\_\_\_\_

**3. Fill in the blanks.**

- a) Each worksheet of Excel 2016 has \_\_\_\_\_ columns and \_\_\_\_\_ rows.
- b) An Excel file is saved with the extensions \_\_\_\_\_.
- c) The cell reference of the cell with Column S and Row 25 is \_\_\_\_\_.
- d) The act of publishing a blog is called \_\_\_\_\_.
- e) In GPS, P stands for \_\_\_\_\_.

**Q4. Explain the functions of the following**

- a) Formula bar

---

---

b) Google Spreadsheet-

c) Google Meet-

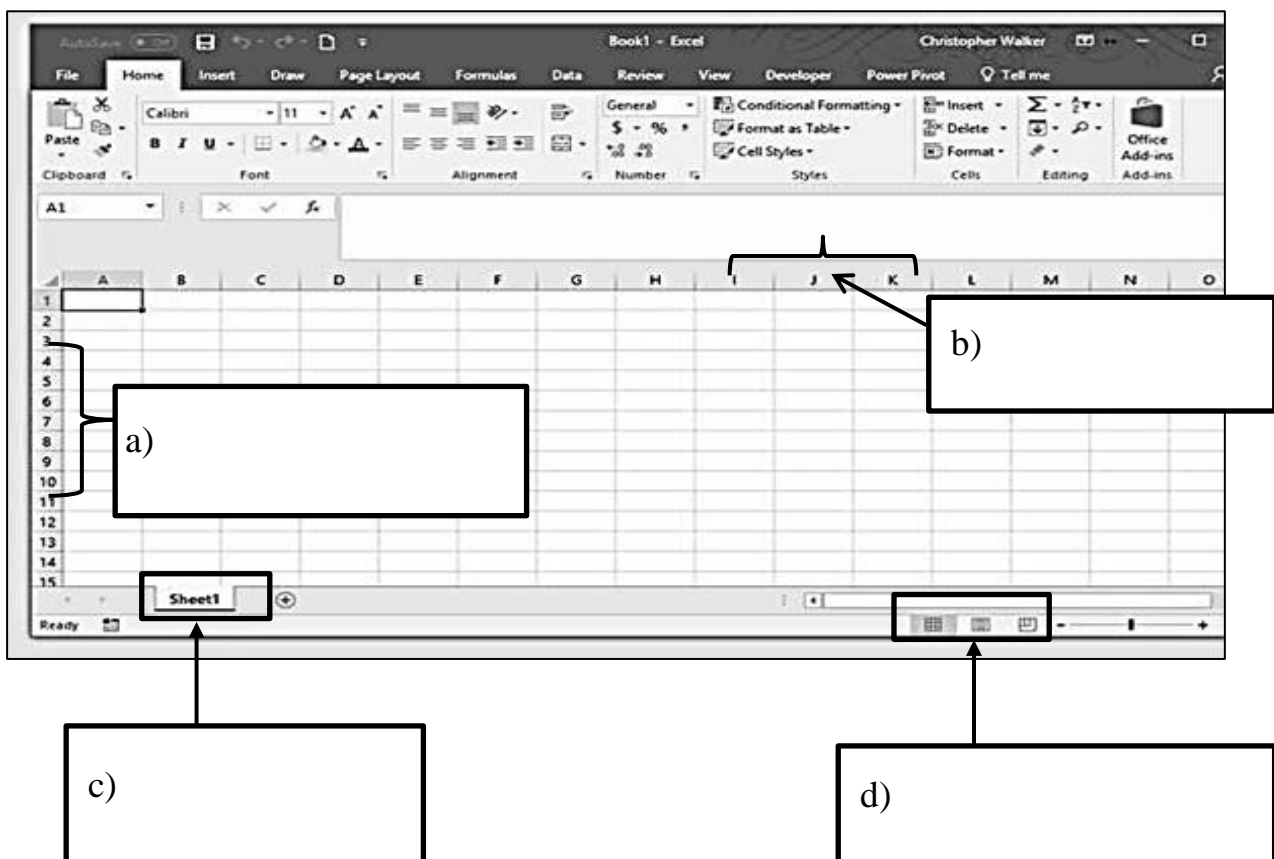
d) Autofill-

**5. Name the following.**

a. Google devices.

b. Views of excel worksheet.

**6. Label the following Excel window.**



**St. Mary's School, Dwarka**  
**Practice Worksheet**  
**Class: V**  
**Subject: Hindi**

Name: \_\_\_\_\_ Sec: \_\_\_\_\_ Date: \_\_\_\_\_ Roll No. \_\_\_\_\_

**उपविषय: पाठ 3, हीनहार बिरवान के होत चीकने पात, कविता 4, लहरों के गीत**

**1. निम्नलिखित गद्यांश को पढ़कर, दिए गए प्रश्नों के सही उत्तर चुनिए अथवा लिखिए।**

बहुत समय पहले धरती हरी-भरी, ठंडी और सुंदर थी। चारों ओर पेड़-पौधे थे, नदियाँ साफ़ बहती थीं और हवा ताज़ा होती थी। इंसान और जानवर मिलकर प्रकृति में संतुलन बनाए रखते थे।

लेकिन जैसे-जैसे समय बीता, इंसानों ने ज़्यादा फैक्ट्रियाँ बनाई, गाड़ियाँ चलाई और बहुत सारे पेड़ काट डाले। इसके कारण हवा में धुआँ और ज़हरीली गैसों फैलने लगीं। अब सूरज की गर्म किरणें सीधे धरती तक पहुँचने लगीं। इससे धरती का तापमान धीरे-धीरे बढ़ने लगा। इसे ही ग्लोबल वार्मिंग कहा जाता है। ग्लोबल वार्मिंग से बर्फ पिघल रही है, समुद्र का जलस्तर बढ़ रहा है और कई जानवरों का जीवन संकट में है। गर्मी बहुत बढ़ गई है और बारिश का समय भी बदलने लगा है।

एक दिन एक स्कूल में 'धरती बचाओ' अभियान शुरू हुआ। बच्चों ने नारा लगाया - "पेड़ लगाओ, धरती बचाओ!" उन्होंने स्कूल के बगीचे में पेड़ लगाए, साइकिल से आना शुरू किया और प्लास्टिक का उपयोग कम कर दिया। धीरे-धीरे बदलाव दिखने लगा। बच्चे समझ गए कि अगर सब मिलकर कोशिश करें, तो धरती फिर से खुश और हरी-भरी बन सकती है।

क) पहले धरती कैसी थी?

- i) गर्म और सूखी      ii) हरी-भरी और ठंडी      iii) बर्फ से ढकी हुई      iv) सुनसान और वीरान

ख) ग्लोबल वार्मिंग का एक कारण क्या है?

- i) अधिक बारिश      ii) पक्षियों का पलायन      iii) पेड़ों की कटाई      iv) पर्वतों का टूटना

ग) बच्चों ने किस अभियान की शुरुआत की?

- i) 'जल बचाओ'      ii) 'हवा साफ़ करो'      iii) 'धरती बचाओ'      iv) 'पढ़ाई बढ़ाओ'

घ) ग्लोबल वार्मिंग क्यों हो रही है?

---

---

---

ङ) हमें इस कहानी से क्या सीख मिलती है?

---

---

---

2 निम्नलिखित वाक्य को पढ़कर दिए गए प्रश्नों के उत्तर लिखिए।

क) बच्चों का नाटक देखकर कौन आनंदित हो रहे थे?

---

---

---

ख) चंद्रगुप्त के किन गुणों को देखकर चाणक्य प्रभावित हुए?

---

---

ग) कविता 'लहरों के गीत' से हमें क्या शिक्षा मिलती है?

---

---

---

3. नीचे दिए गए वाक्यों में उचित विराम-चिह्न लगाकर वाक्य दोबारा लिखिए।

क) वह चिल्लाकर बोला मुझे मत रोको

---

ख) अरे तुम यहाँ कैसे

---

ग) क्या तुमने अपना काम पूरा कर लिया

4. रेखांकित शब्दों के लिंग बदलकर वाक्य फिर से लिखिए।

क) बाज़ीगर ने अपने शेर के साथ करामात दिखाई।

ख) माली ने फूलों को पानी दिया।

ग) श्रीमान जी एक अभिनेता हैं।

घ) शिक्षक ने उस छात्र को बुलाया।

5. नीचे दिए गए संकेत बिंदुओं की सहायता से 'अनुशासन का महत्त्व' विषय पर एक अनुच्छेद लिखिए।

विद्यार्थी - आज्ञाकारी - सफलता - माता-पिता - शिक्षकों - आदर और सम्मान - व्यक्ति - अनुशासनहीन - असफल - छात्र का जीवन - अनुशासन - बहुत महत्त्वपूर्ण - सफल जीवन