

**St. Mary's School, Dwarka**

**Practice Worksheet**

**Class: II**

**Subject: English**

**Topic: L-2, Bukka Learns a Lesson**

**Name:\_\_\_\_\_ Sec:\_\_\_\_\_ Date:\_\_\_\_\_ Roll No:\_\_\_\_\_**

**1. Read the passage and answer the following questions.**

A group of pigeons lived happily in a forest. One day, they saw rice grains on the ground. The wise pigeon warned them not to go near, as it could be a trap. But the other pigeons did not listen to him. They went down to eat and got caught in the net. The wise pigeon was safe because he stayed away.

The pigeons cried for help. The wise pigeon told them to fly together with the net. They all flew up at the same time and reached a safe place. The wise pigeon called his friend mouse to help them cut the net with its teeth. The pigeons were free and learned that unity is strength.

a) Where did the pigeons live?

---

---

b) What did the pigeons see on the ground?

---

---

b) Who warned the pigeons about the trap?

---

---

c) What lesson did the pigeons learn?

---

---

e) Write two naming words from the passage.

---

**2. Answer the following questions.**

a) Why didn't Bukka like to listen to the harmony lessons?

---

---

b) What did the leader hear about Bukka?

---

---

c) Why did Bukka start crying?

---

---

**3. Complete the sentences with a, an or the.**

- a) He saw \_\_\_\_\_ ostrich at \_\_\_\_\_ zoo.
- b) I went to \_\_\_\_\_ beach last Sunday.
- c) Richa wants \_\_\_\_\_ cake for dessert.
- d) They saw \_\_\_\_\_ rainbow after \_\_\_\_\_ rain.

**4. Fill in the blank with the noun form one to many.**

- a) The children saw many \_\_\_\_\_ near the pond. (duck)
- b) We kept the \_\_\_\_\_ on the shelf. (book)
- c) The \_\_\_\_\_ are parked outside the house. (car)

**5. Look at the picture and describe it using the hints given below.**

fair	ballon	games	sky	statue
------	--------	-------	-----	--------



- a) \_\_\_\_\_
- b) \_\_\_\_\_
- c) \_\_\_\_\_
- d) \_\_\_\_\_
- e) \_\_\_\_\_

**St. Mary's School, Dwarka**  
**Practice Worksheet**  
**Class: II**  
**Subject: Language Practice**

## Topic- L-2, Food

**Name:** \_\_\_\_\_ **Sec:** \_\_\_\_\_ **Date:** \_\_\_\_\_ **Roll No:** \_\_\_\_\_

### 1. Fill in the blanks.

- \_\_\_\_\_is a complete food. (Water/Milk)
- We should not \_\_\_\_\_food. (eat/waste)
- We need \_\_\_\_\_to live and grow. (juice/food)
- Food gives us \_\_\_\_\_to work and play. (laziness/energy)
- Junk food is not good for our\_\_\_\_\_. (eyes/ health)
- A \_\_\_\_\_grows crops for us. (farmer/plumber)
- Healthy food protects us from\_\_\_\_\_. (rain/diseases)

**2. Write 'T' for true and 'F' for the false statements.**

- Fruits and vegetables are good for our health. ( )
- We get food only from animals. ( )
- All type of food are healthy. ( )
- Plants and animals are the sources of food. ( )
- We eat four meals every day. ( )
- A balanced diet is the best diet for our health. ( )

**3. Name any two-**

- |                  |       |       |
|------------------|-------|-------|
| a. healthy food  | _____ | _____ |
| b. milk products | _____ | _____ |
| c. fruits        | _____ | _____ |
| d. cereals       | _____ | _____ |
| e. spices        | _____ | _____ |

**4. Write down the names of the given food items under the correct column.**

burger	cakes	berries	chocolates	vegetables
white bread	fruits	spinach	yogurt	pizza

Healthy Food	Unhealthy Food

**5. Circle the correct answer.**

- Eating too much food is called
  - over-eating
  - energy-giving
- People who eat meat and eggs are called
  - vegetarians
  - non-vegetarians
- Food that prevents us from falling ill is called
  - body-building food
  - protective food

**St. Mary's School, Dwarka**

**Practice Worksheet**

**Class: II**

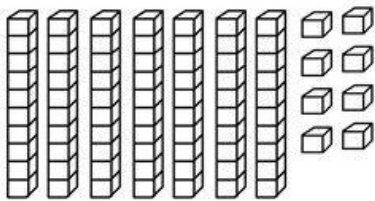
**Subject: Mathematics**

**Topic: Chapter-2, Addition and Subtraction**

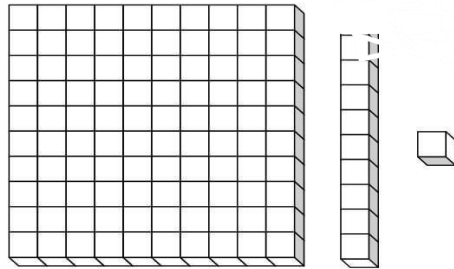
**Name: \_\_\_\_\_ Sec: \_\_\_\_\_ Date: \_\_\_\_\_ Roll No: \_\_\_\_\_**

**1. Fill in the blanks by counting the hundreds, tens and ones block.**

a) \_\_\_ tens \_\_\_ ones = \_\_\_\_\_




b) \_\_\_ hundreds \_\_\_ tens \_\_\_ ones = \_\_\_\_\_




**2. Add the following.**


a)  $300 + 200 =$  \_\_\_\_\_




b)  $425 + 273 =$  \_\_\_\_\_




c)  $357 + 340 =$  \_\_\_\_\_




d)  $897 + 218 =$  \_\_\_\_\_



e)  $586 + 337 =$  \_\_\_\_\_




f)  $295 + 307 =$  \_\_\_\_\_




**3. Subtract the following.**


a)  $483 - 222 =$  \_\_\_\_\_




b)  $657 - 284 =$  \_\_\_\_\_




c)  $941 - 622 =$  \_\_\_\_\_




d)  $736 - 582 =$  \_\_\_\_\_



e)  $901 - 427 =$  \_\_\_\_\_



f)  $800 - 332 =$  \_\_\_\_\_




**4. Mr. Lucas had ₹ 186. He donated ₹ 38 to charity. How much money was he left with?**

Mr. Lucas had = ₹ \_\_\_\_\_

He donated for charity = ₹ \_\_\_\_\_

He is left with = ₹ \_\_\_\_\_




**5. Mike has 231 game cards. His friend gives him 19 more. How many game cards does he have now?**

No. of game cards = \_\_\_\_\_

Game cards his friend gives him = \_\_\_\_\_

He has \_\_\_\_\_ game cards now.



**St. Mary's School Dwarka**  
**Practice Worksheet**  
**Class: II**

**Subject: Computer Science**

**Topic: L-8, Understanding AI**

**Name:** \_\_\_\_\_ **Section:** \_\_\_\_\_ **Roll No:** \_\_\_\_\_ **Date:** \_\_\_\_\_

**1. Write T for true statements and F for false statements.**

- a. Intelligence decision is based on data. [ ]
- b. Artificial intelligence is the ability of a machine to walk. [ ]
- c. The normal machine and AI-enabled machine are different. [ ]
- d. The name of Apple's AI is Siri. [ ]
- e. AI is used in games to maintain player's balance. [ ]
- f. AI stands for Artificial Imagination. [ ]

**2. Fill in the blanks with the correct word from the bracket.**

- a. \_\_\_\_\_ the ability to understand and deal with changing situations.  
(Intelligence/Artificial)
- b. AI is the ability of machine to copy human \_\_\_\_\_. (behavior/intelligence)
- c. A normal machine is fed with \_\_\_\_\_. (ice-cream/instructions)
- d. AI develops human \_\_\_\_\_ and behavior. (understanding/artificial)
- e. Artificial Intelligence is a machine's ability to \_\_\_\_\_ human intelligence.  
(Increase/decrease)
- f. The name of Amazon's AI is \_\_\_\_\_. (siri/ alexa)

**3. Fill in the boxes.**

- a. A free online AI based coloring program.

P		T	A				
---	--	---	---	--	--	--	--

b. I am Apple's AI digital assistant.

S			I
---	--	--	---

c. I am an online video sharing platform.

Y			T		B	
---	--	--	---	--	---	--

d. An AI machine used in a movie.

T		R	M			A			R
---	--	---	---	--	--	---	--	--	---

**4. Given below are 6 examples. Put a tick (✓) if it is example of AI and cross (✗) if it is not AI.**

1. A Digital clock showing the current time	
2. A Smartphone that suggests words while you type a message	
3. A mobile that suggests cartoons based on what you have watched before	
4. A calculator doing math when you entered number	
5. Alexa playing your favorite song	
6. Video games such as racing and shooting	

**5. Answer the following questions.**

a. Write two ways to work with Petalica Paint.

---

---

b. Krishna has a CD. She wants to play the music during the annual function at his school. Will he need a normal music system or a smart music system?

---

---



**St. Mary's School, Dwarka**  
**Practice Worksheet**  
**Class: II**  
**Subject: Hindi**

विषय : पाठ - आसमान गिरा

Name: \_\_\_\_\_ Class: \_\_\_\_\_ Date: \_\_\_\_\_ Roll No. \_\_\_\_\_

**1. नीचे दिए गए गद्यांश को पढ़कर प्रश्नों के उत्तर दीजिए—**

रीना के घर के पास एक सुंदर बगीचा था। उसमें तरह तरह के फूल खिले थे। रीना रोज़ बगीचे में जाती थी और फूलों को पानी देती थी। उसे बगीचे में खेलना बहुत अच्छा लगता था। बगीचे में एक झूला भी था। रीना अपने दोस्तों को भी बगीचे में बुलाती थी। सभी बच्चे मिलकर झूला झूलते और बहुत खुश होते थे।

क) रीना के घर के पास क्या था?

\_\_\_\_\_

ख) रीना बगीचे में क्या करती थी?

\_\_\_\_\_

ग) सभी बच्चे मिलकर क्या करते थे?

\_\_\_\_\_

**घ) दिए गए गद्यांश में से दो संज्ञा शब्द ढूंढकर लिखिए—**

क) \_\_\_\_\_ ख) \_\_\_\_\_

**2. दिए गए प्रश्नों के उत्तर लिखिए—**

क) चूहे ने किसको तेज़ी से भागते देखा?

\_\_\_\_\_

ख) चूजे के साथ सब कहाँ पहुँचे?

\_\_\_\_\_

**3. सामान तुक वाले शब्दों से अलग शब्द पर गोला लगाइए-**

क) राम - नाम भाग शाम

ख) बात - रात बरसात सुबह

ग) पवन - भवन हवा हवन

**4. उल्टे अर्थ वाले शब्दों का मिलान कीजिए-**

क) छोटा हँसना


ख) रोना बैठना

ग) उठना उतरना

घ) चढ़ना बड़ा

**5. नीचे दिए गए चित्र को देखकर पाँच वाक्य बनाइए -**

मेले, लोग, झूला, दुकान, गुब्बारे



---

---

---

---

---