



Brain International School

Recognised Senior Secondary School, Affiliated to CBSE
Vikas Puri, New Delhi




MATHS WORKSHEET (JANUARY)

NAME.....

CLASS.....

DATE.....

Q 1: Write the numbers that come in Skip counting by 5's:



Q 2: Addition:

14	62	20	12	15
+ 42	+ 10	+ 17	+ 12	+ 12
<input type="text"/>	<input type="text"/>	<input type="text"/>	<input type="text"/>	<input type="text"/>

Q 3: Subtraction:



$6 - 3 =$



$8 - 4 =$



$9 - 4 =$



$7 - 2 =$