



Brain International School

Recognised Senior Secondary School, Affiliated to CBSE
Vikas Puri, New Delhi

MATHS REVISION WORKSHEET (2024-2025)

NAME : _____ CLASS : II - _____ DATE: _____

Ques.1 Complete the series.

a. 893 , 894 , 895 , 896 , _____ . _____ . _____

b. 700 , 701 , 702 , 703 , _____ . _____ . _____



Ques. 2 Fill in the blanks.

a. $8 \div 1 =$ _____

b. $0 \div 7 =$ _____

c. $12 \div 6 =$ _____



d. $5 \div 5 =$ _____

e. $10 \div 5 =$ _____


f. $10 \div 2 =$ _____

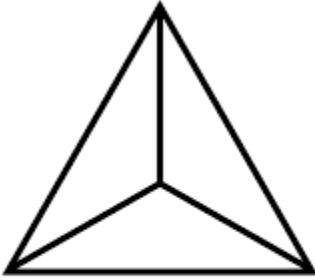
Ques. 3 Divide the following :

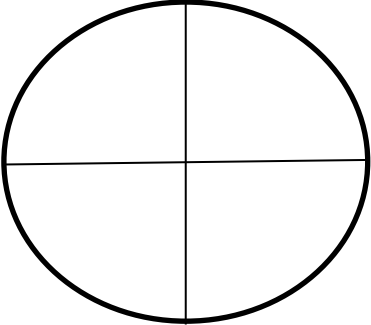
a. $88 \div 8$

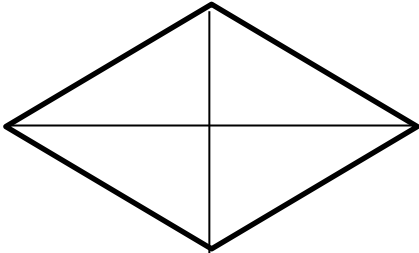
b. $32 \div 4$

Ques. 4 Colour the figures as per the given fractions.

a.  - $\frac{1}{2}$

c.  - $\frac{1}{3}$

b.  - $\frac{3}{4}$

d.  - $\frac{2}{4}$

Ques. 5 Fill in the blanks.

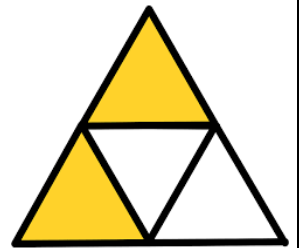
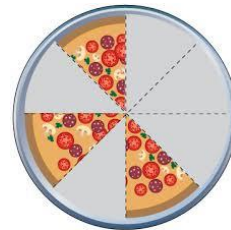
a. The number above the horizontal line in a fraction is called _____.

b. 2 one quarters make a _____.

c. The numerator of $\frac{2}{4}$ is _____.

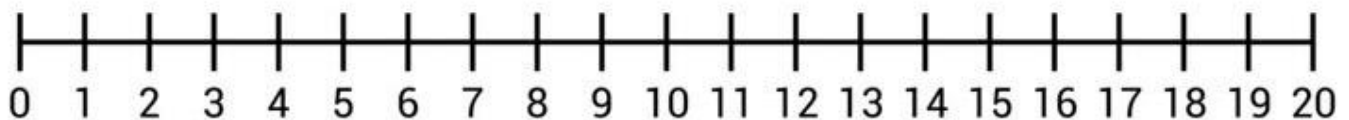
d. $25 \div 5 =$ _____

e. A greatest 3 digit number _____



Ques. 6 Use the number line to divide.

a. $14 \div 7 =$ _____



b. $18 \div 3 =$ _____

