



Brain International School

Recognised Senior Secondary School, Affiliated to CBSE
Vikas Puri, New Delhi

MATHS REVISION WORKSHEET (2024-2025)

NAME: _____ CLASS: II - _____ DATE: _____

Ques.1 Fill in the blanks.

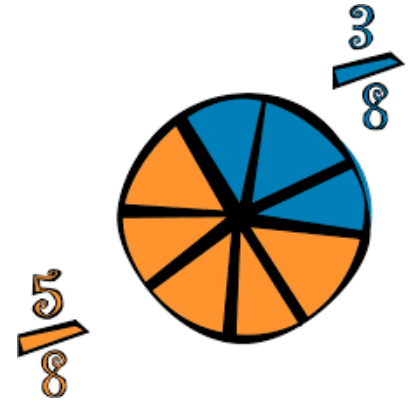
a. The numerator of $\frac{1}{4}$ is _____.

b. Two halves make a _____.

c. $\frac{1}{2}$ is written as _____.

d. The number below the horizontal line in a fraction is called _____.

e. Division is repeated _____.



Ques.2 What comes before, after and in-between.

a) _____ 723

b) 947 _____

c) 524 _____ 526

d) 796 _____

e) 809 _____ 811

f) _____ 652

Ques.3 Write the following numbers in ascending order.

1. 720 , 730 , 349 , 299 , 856

2. 653 , 540 , 821 , 962 , 918

Ques.4 Write two multiplication facts for these division facts.

a. $27 \div 9$

b. $50 \div 5$


Ques.5 Put the correct sign. (<, >, =)

a. 650 _____ 716

c. 429 _____ 904

b. 540 _____ 528



d. 935 _____ 363



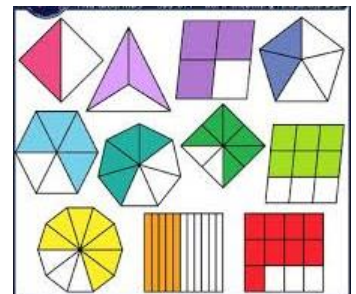

Ques.6 Divide these numbers using the short division method.

a. $54 \div 6$

b. $81 \div 9$



Ques.7 Write the fractions shown by the shaded parts.



Ques.8 Write the number names for the following numbers:

a. 794 - _____

b. 745 - _____