

**St. Mary's School, Dwarka**  
**Practice Worksheet (December)**

**Class: V**

**Subject: English**

Name: \_\_\_\_\_ Sec: \_\_\_\_\_ Date \_\_\_\_\_ Roll No. \_\_\_\_\_

**Topic: L – 8, Owls in the Family**

**1. Read the following passage and answer the questions that follow.**

The mango, often called the 'king of fruits', is a tropical delight loved by people around the world. Mangoes are known for their sweet, juicy flesh and vibrant orange-yellow colour. They grow on large trees that thrive in warm climates, particularly in countries like India, Mexico, and the Philippines. Mangoes are not just delicious but are also packed with nutrients such as vitamins A and C, which are essential for good health. **(Para 1)**

Mango trees produce fruits during the summer season, and their flowers bloom in clusters before turning into ripe mangoes. Farmers carefully harvest mangoes to ensure they don't bruise, as their soft flesh is delicate. There are many varieties of mangoes, ranging from the small, greenish ones to large, golden types with thin skin and a sweet taste. Mangoes are often eaten fresh, but they can also be used to make juices, pickles, and desserts. **(Para 2)**

Today, mangoes are a favourite ingredient in global cuisines. They add a tropical flavour to smoothies, salads, and ice creams. Mango farming is also important for the economy of many tropical countries. Besides being a food source, mango trees provide shade, and their wood is sometimes used for furniture. This humble fruit is more than just a treat; it's a symbol of summer and joy for millions of people around the globe. **(Para 3)**

- a) Which of the following factors most influences the delicate harvesting process of mangoes?
- |  |  |
|--|--|
| i) ripening time of the fruit                | ii) size and variety of the mangoes        |
| iii) soft and perishable nature of the flesh | iv) impact of weather conditions on growth |
- b) What factor contributes to the widespread popularity of mangoes worldwide?
- |                                       |                                    |
|---------------------------------------|------------------------------------|
| i) vibrant colour                     | ii) tropical flavour and nutrients |
| iii) ability to grow in cold climates | iv) use in industries              |
- c) What is one of the significant economic benefits of mango farming in tropical countries?
- |                                   |                                     |
|-----------------------------------|-------------------------------------|
| i) provides shade for communities | ii) boosts trade in tropical fruits |
| iii) ripening agents              | iv) early harvesting                |
- d) How does mango farming contribute to tropical economies?
- 
- 

e) Find a word from para - 3 that means the same as 'vital'.

- |                |             |
|----------------|-------------|
| i) optional    | ii) useless |
| iii) important | iv) weak    |

**Q2. Fill in the blanks with the correct form of the given words.**

I \_\_\_\_\_ (learn) so much about wildlife through documentaries. Before I watched them, I \_\_\_\_\_ (not realize) how many animals are endangered. Recently, my family \_\_\_\_\_ (visit) a wildlife sanctuary, where we saw rare animals. The guide \_\_\_\_\_ (explain) their habits and the threats they faced before we began our tour. Since then, I \_\_\_\_\_ (become) interested in protecting the environment. I also \_\_\_\_\_ (receive) the opportunity to participate.

**Q3. Fill in the blanks with appropriate words.**

- a) The farmer will \_\_\_\_\_ the apples in the basket. (choose / chews)
- b) I saw a \_\_\_\_\_ on the riverbank yesterday. (deer/dear)
- c) The cat climbed to the \_\_\_\_\_ of the tree. (peak/peek)

**Q4. Answer the following questions.**

i) Who said the following line and to whom?

“Now there’s an unselfish mother for you,” said Grandfather. “It's obvious she wants us to keep an eye on them. They’re probably getting too big for her to manage.”

ii) Why does Grandfather describe the owl's mother as "unselfish" in the story?

b) What makes it clear that the narrator expected the baby owls to be grateful to him for saving their lives?

c) How does the behaviour of the baby owls change after they are brought home by the narrator?

**Q5. Write a letter to your school principal requesting permission for a field trip to a historical museum for your class.**

---

---

---

---

---

---

---

---

---

---

**St. Mary's School, Dwarka**  
**Practice Worksheet (December)**  
**Class: V**  
**Subject: Hindi**

Name: \_\_\_\_\_ Sec: \_\_\_\_\_ Date: \_\_\_\_\_ Roll No: \_\_\_\_\_

**उपविषय: पाठ -15, दस आर्मों की कीमत**

**1. निम्नलिखित गद्यांश को पढ़िए और दिए गए प्रश्नों के सही उत्तर चुनिए।**

अनुशासन का पालन करना शिष्टाचार का ही एक अंग है। अनुशासन एक ऐसी आदत है जो हमें अपने जीवन में सफलता प्राप्त करने में मदद करती है। अनुशासन के महत्व को समझने के लिए, हमें अपने जीवन में इसका अभ्यास करना चाहिए। हमें अपनी दिनचर्या को व्यवस्थित करना चाहिए, अपने लक्ष्यों को निर्धारित करना चाहिए और उन्हें प्राप्त करने के लिए आवश्यक कदम उठाने चाहिए।

यह अनुशासन सामाजिक भी हो सकता है और कानूनी भी। मंदिर-मस्जिद और गुरुद्वारे में प्रवेश करने से पहले जूते-चप्पल उतार देने चाहिए। किसी भी सभा में शोर नहीं करना चाहिए। सभा में कुर्सी या मेज़ पर पैर रखकर नहीं बैठना चाहिए। ये सारे सामाजिक अनुशासन के उदाहरण हैं। सड़क पर हमेशा बाईं ओर चलना, रेलगाड़ी या बस में धूम्रपान न करना कानूनी अनुशासन के उदाहरण हैं।

शिष्टाचार के इन नियमों का पालन न करने से परिवार, समाज, कार्यालय सभी जगह कुव्यवस्था फैलने का भय। संक्षेप, में चाहे घर ही, दुकान ही या कार्यालय सब जगह शिष्टाचार के सहारे हम प्रशंसा और सफलता के पात्र बन सकते हैं। इसके ठीक विपरीत अशिष्ट व्यवहार से दूसरों का दिल तो दुखता ही है हमें भी बदले में दुःख और असफलता हाथ लगती है। शिष्टाचार से पग-पग पर मित्र उत्पन्न होते हैं और अशिष्ट व्यवहार से पग-पग पर दुश्मन।

क) अनुशासन का पालन करने से हमें क्या प्राप्त होता है?

- |              |               |
|--------------|---------------|
| i) धार्मिकता | ii) सामाजिकता |
| iii) सफलता   | iv) विचार     |

ख) इनमें से कौन-सा कार्य कानूनी अनुशासन के दायरे में आता है?

- सभा में कुर्सी या मेज़ पर पैर रखकर नहीं बैठना
- किसी भी सभा में शोर नहीं करना
- अपने से बड़ों को नमस्कार करना
- सड़क पर हमेशा बाईं ओर चलना

ग) शिष्टाचार के नियमों का पालन नहीं करने से क्या हानि है?

- परिवार, समाज, कार्यालय में कुव्यवस्था फैलने का भय।
- हर व्यक्ति आराम से रहता है।
- कुछ भी हानि नहीं होती।
- मन बहुत खुश रहता है।

घ) अनुशासन के महत्त्व को किस प्रकार समझा जा सकता है?

---

---

**2. निम्नलिखित प्रश्नों के उत्तर लिखिए।**

क) स्वामी को पिताजी को धोती बनियान में देखना क्यों अच्छा नहीं लगता था?

---

---

---

ख) स्वामीनाथन क्या फैसला नहीं कर पा रहा था?

---

---

---

ग) स्वामी मन ही मन क्या सोच रहा था?

---

---

---

---

**3. निम्नलिखित लोकोक्तिर्यों के अर्थ लिखकर वाक्य बनाओ।**

क) एक पंथ दो काज-

---

ख) ऊँट के मुँह में जीरा-

---

**4. निम्नलिखित में से उपसर्ग और मूल शब्द अलग करके लिखो।**

क) आहार \_\_\_\_\_ ख) प्रकार \_\_\_\_\_  
ग) दुर्बल \_\_\_\_\_ घ) अन्याय \_\_\_\_\_

**5. निम्नलिखित में से प्रत्यय और मूल शब्द अलग करके लिखो।**

क) सफलता \_\_\_\_\_ ख) मिठाई \_\_\_\_\_  
ग) सब्जीवाला \_\_\_\_\_ घ) चलना \_\_\_\_\_



**St. Mary's School, Dwarka**  
**Practice Worksheet (December)**

**Class: V**

**Subject: Maths**

**Chapter: 7 Average, Chapter: 8 Triangles**

**Name: \_\_\_\_\_ Sec: \_\_\_\_\_ Date: \_\_\_\_\_ Roll No: \_\_\_\_\_**

**1. Choose the correct options for the following.**

a) Rahul is designing a sign board. The signboard has three sides measuring 6cm 5cm and 10 cm. What is the shape of the sign board?

- i) square                      ii) circle                      iii) triangle                      iv) rectangle

b) A taxi driver covered distance of 1659 km in 7 days. What is the average distance covered each day?

- i) 456 km                      ii) 237 km                      iii) 120 km                      iv) 666 km

c) The average of 14, 3 and 1 is \_\_\_\_\_.

- i) 12                      ii) 6                      iii) 13                      iv) 34

d) The distance from the base to the opposite vertex is the height of the \_\_\_\_\_.

- i) circumference                      ii) perpendicular                      iii) vertex                      iv) radius

e) In a math test, the scores of 6 students are: 45, 50, 40, 55, 60, and 50. What is their average score?

- i) 70                      ii) 120                      iii) 50                      iv) 34

**2. Fill in the blanks.**

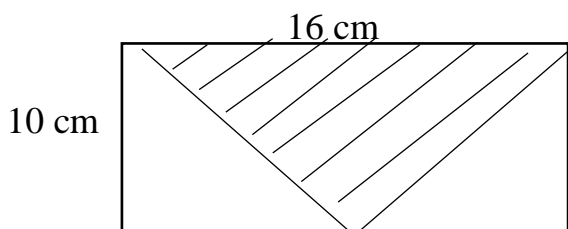
a) Area of triangle is \_\_\_\_\_

b) A triangle whose opposite sides are equal is an \_\_\_\_\_

c) The average of 4, 7 and 1 is \_\_\_\_\_

d) All three sides are equal in an \_\_\_\_\_

**3. Find the shaded area of the rectangle.**

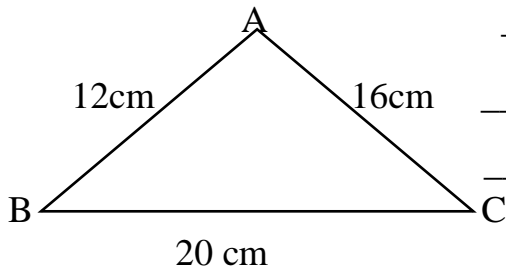


---

---

---

**4. Find the area of the triangle**



**5. The total weight of 6 bags of strawberry is 7 kilogram 200 grams. Find their total weight.**

---

---

**6. The table below shows the monthly sales for 4 products in 5 different stores over 6 months**

Stores	Product A	Product B	Product C	Product D	Total sales
Store 1	150	130	120	100	
Store 2	160	140	130	110	
Store 3	180	150	140	130	
Store 4	170	160	150	140	
Store 5	160	170	160	150	

a) Write the total sales for each product across all stores.

---

b) What is the average sales per product across all stores?

---

**7. A singing academy is planning auditions to select new singers. Over the first three days an average of 108 people attended the auditions each day. On the fourth day 124 people showed up**

a) Find the total number of people for the first three days.

---

b) What is the total number of people turned up altogether?

---

c) What is the average number of people over four days?

---

**St. Mary's School, Dwarka**  
**Practice Worksheet (December)**  
**Class: V**  
**Subject: EVS**

**Name:** \_\_\_\_\_ **Sec:** \_\_\_\_\_ **Date:** \_\_\_\_\_ **Roll No.** \_\_\_\_\_

**Topic: L-20, Life in Water, L-22, The Spirit of Adventure (Activity)**

**1. Choose the correct options for the following.**

a) \_\_\_\_\_ is a metal spike with an eye through which a rope can be passed.

- i) Sole                      ii) Piton                      iii) Shoe                      iv) Rubber

b) I am a free-floating plant with spongy leaves and my leaves grow as rosettes. Who am I?

- i) Wolffia              ii) Tape grass              iii) Pistia                      iv) Lotus

c) Water moss fern has smooth and round leaves. It is an example of \_\_\_\_\_ plant.

- i) emergent                      ii) submerged              iii) floating                      iv) aerial

d) Identify the plant that grows along the sides of a pond.

- i) grass                      ii) flea                      iii) lotus                      iv) duckweed

e) Assertion (A): Water hyacinth is light and filled with air, helping it float on water.

Reason (R): The structure of floating plants allows them to absorb water and sunlight, but dense growth can block sunlight for other plants.

- i) Only A is correct.                      ii) Only R is correct.  
iii) Both A and R are correct and R is the correct explanation for A.  
iv) Both A and R are correct but R is not the correct explanation for A.

**2. Name the following.**

a) First Indian woman to reach the peak of Mount Everest- \_\_\_\_\_

b) Animals that live on land- \_\_\_\_\_

c) A tiny plant with flat leaves and little white flowers - \_\_\_\_\_

d) A person who climbs mountains as a sport or job - \_\_\_\_\_

**3. Answer the following questions in 15-20 words.**

a) With the help of an example, explain what are amphibians.

---

---

b) Sakshi saw a water spider underwater with its body covered in air bubbles. It was hunting small fish and insects. How do the air bubbles help this spider survive underwater?

---

---



**4. Give reasons for the given statements.**

a) As a mountaineer, Rahul went on a trek with his friends. Their guide told them that all mountaineers should preserve and keep their surroundings clean.

---

---

---

b) Mosquitoes are carriers of dangerous diseases.

---

---

---

**5. Read the given case study and answer the questions that follow.**

Becoming a mountaineer requires training, physical fitness, endurance, and a love for mountains. While most mountains don't need elaborate gear, rock climbing requires special tools like ropes, torches, and pitons. A piton is a metal spike used to secure ropes. On long treks, mountaineers carry supplies to cook food and wear sturdy footwear with thick rubber soles for ankle support. Good shoes help prevent injuries and provide grip on rough terrain. Enthusiasm and preparation are key for a safe and successful climb.

a) Why is training important for mountaineering?

---

b) What tools are essential for rock climbing?

---

c) What qualities, apart from physical fitness, do you think are most important for becoming a successful mountaineer, and why?

---

---

**6. Draw a GO showing the names of different freshwater fish.**

**St. Mary's School, Dwarka  
Practice Worksheet (December)**

**Class: V**

**Subject: Computer Science**

**L-2, Topic: Windows File Management**




**1. Fill in the blanks.**

- a) The \_\_\_\_\_ helps you to organize and track of your files on the computer.
- b) Every file has its own \_\_\_\_\_ name.
- c) The files saved together under a common name is called a \_\_\_\_\_.
- d) The \_\_\_\_\_ displays the contents of the folder /drive that is selected on the left side pane.
- e) The \_\_\_\_\_ displays the contents as a list of file or folder names preceded by small icons.

**2. Write the shortcut for the following.**

- a) to select all the files or folders – \_\_\_\_\_
- b) to copy the files or folders – \_\_\_\_\_
- c) to cut the files or folders – \_\_\_\_\_
- d) to paste the files or folders – \_\_\_\_\_
- e) to create the new folder – \_\_\_\_\_

**3. Recognize and name the various types of files shown below.**

- a)  \_\_\_\_\_
- b)  \_\_\_\_\_
- c)  \_\_\_\_\_

