



Brain International School

Recognised Senior Secondary School, Affiliated to CBSE
Vikas Puri, New Delhi

Maths Worksheet (December) Ch – 8 Fractions

Name : _____ Class : II - ____ Date : _____

Ques. 1. Write the number names for the following.

1. 579 - _____

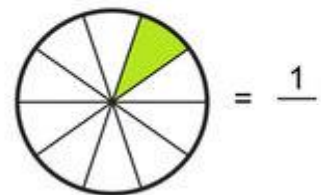
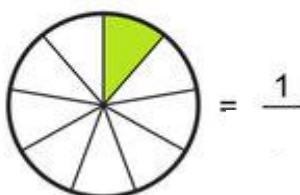
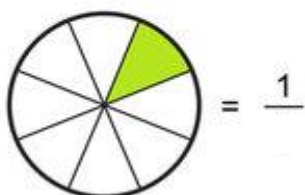
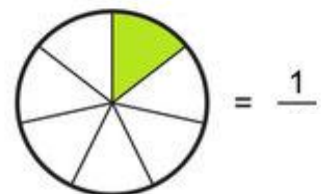
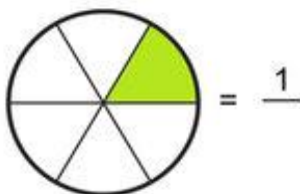
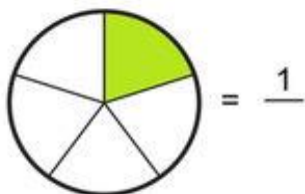
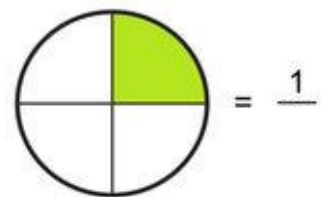
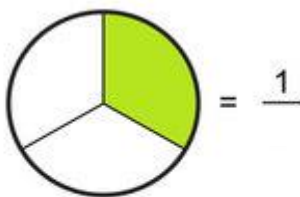
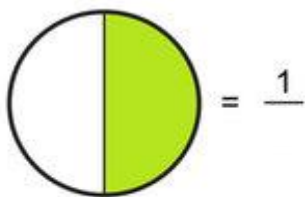
2. 590 - _____

Ques. 2. Write the numerator and denominator for the given fractions.



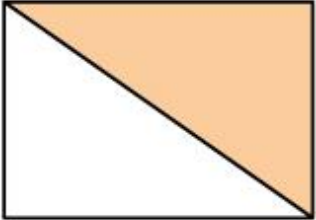
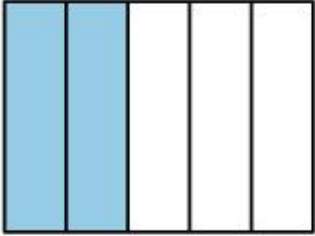
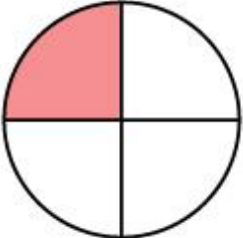
1. $\frac{2}{4}$ - numerator _____ denominator _____

2. $\frac{6}{12}$ - numerator _____ denominator _____

Ques. 3. Write the missing denominator for each.



Ques. 4. Identify the correct fraction and mark a tick on it.

1		<input type="radio"/>	$\frac{1}{2}$	<input checked="" type="radio"/>	$\frac{2}{3}$	<input type="radio"/>	$\frac{3}{4}$	<input type="radio"/>
2		<input type="radio"/>	$\frac{2}{5}$	<input type="radio"/>	$\frac{1}{6}$	<input type="radio"/>	$\frac{1}{5}$	<input type="radio"/>
3		<input type="radio"/>	$\frac{1}{3}$	<input type="radio"/>	$\frac{1}{2}$	<input type="radio"/>	$\frac{3}{4}$	<input type="radio"/>
4		<input type="radio"/>	$\frac{2}{5}$	<input type="radio"/>	$\frac{1}{2}$	<input type="radio"/>	$\frac{1}{2}$	<input type="radio"/>
5		<input type="radio"/>	$\frac{4}{5}$	<input type="radio"/>	$\frac{1}{3}$	<input type="radio"/>	$\frac{1}{4}$	<input type="radio"/>

Ques. 5. Complete the series.

1. 6 , _____ , 18 , _____ , 30 , _____

2. 9 , _____ , 27 , _____ , 45 , _____