



# Brain International School

Recognised Senior Secondary School, Affiliated to CBSE  
Vikas Puri, New Delhi

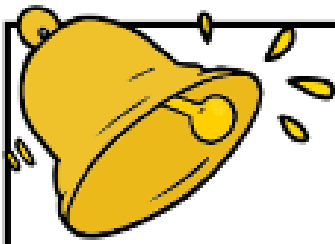
## Maths- December

Name : \_\_\_\_\_ Class: I- \_\_\_\_\_ Date: \_\_\_\_\_

**Q 1. Look at the given clocks and tell the time.**



Q 2. Given below is a chart given to note the school bell timings. Record the time you spend in school.




# School Bell Times




School starts at:

:



Fruit Break is at:

:

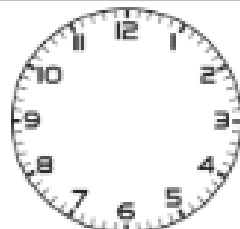


Fruit Break goes for

minutes.

Lunch is at:

:




Lunch goes for

minutes.

Home time is at:

:



In total, I am at school for:



**Q 3. Can you find the days hidden in the puzzle? Once you find them, say and write them in order.**



P	M	O	N	D	A	Y	E	R	W
C	A	T	G	N	I	A	T	O	E
S	A	T	U	R	D	A	Y	Y	D
U	A	U	N	E	E	D	U	C	N
N	U	N	A	T	S	T	R	E	E
D	S	X	U	E	U	D	S	E	S
A	T	R	S	C	N	R	A	E	D
Y	F	R	I	D	A	Y	K	Y	A
E	C	Y	S	B	A	C	T	O	Y
R	T	H	U	R	S	D	A	Y	N

---

---

---

Q 4. Let's solve the given sums.

$$\begin{array}{r} \text{TO} \\ 28 \\ + 52 \\ \hline \\ \hline \end{array}$$

$$\begin{array}{r} \text{TO} \\ 77 \\ + 13 \\ \hline \\ \hline \end{array}$$

$$\begin{array}{r} \text{TO} \\ 14 \\ + 37 \\ \hline \\ \hline \end{array}$$

$$\begin{array}{r} \text{TO} \\ 56 \\ + 25 \\ \hline \\ \hline \end{array}$$

$$\begin{array}{r} \text{TO} \\ 79 \\ + 58 \\ \hline \\ \hline \end{array}$$

$$\begin{array}{r} \text{TO} \\ 26 \\ + 67 \\ \hline \\ \hline \end{array}$$

**Q 5. Let's solve the story sums.**

**1**

Sara and John are collecting stamps. Sara has 59 stamps and John has 72 stamps. How many stamps do they have in total?

**2**

Nadia and Cam are collecting coins. Nadia has 21 coins and Cam has 85 coins. How many coins do they have in all?