



Brain International School

Recognised Senior Secondary School, Affiliated to CBSE
Vikas Puri, New Delhi

MATHS WORKSHEET (DECEMBER)

NAME.....

CLASS.....

DATE.....

Q 1: Comparison: Use sign (>, =, <)

★ 8 10

★ 17 17



★ 12 21

★ 15 15

★ 14 9

★ 15 10

Q 2: Write Number names:



Q 3: Addition:



$6 + 3 =$



$5 + 2 =$





$9 + 2 =$



$4 + 4 =$

Q 4: Subtraction :



—

=