
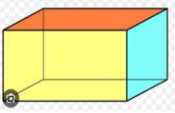






Day and Date	<u>Concept/Topic/Activity</u>										
Friday 22.11.2024	<p style="text-align: center;"><u>English</u></p> <p>Topic- Picture Composition</p> <p>Page 18 of Assignment booklet</p>										
	<p style="text-align: center;"><u>Math</u></p> <p>Revision worksheet</p> <div data-bbox="300 701 948 1256"><p style="text-align: center;">ITL PUBLIC SCHOOL Revision Worksheet Class II</p><p>1 Fill in the blanks: a) March comes before _____. b) February has _____ days. c) Leap year has _____ days. d) _____ comes before Sunday. e) _____ comes in between Tuesday and Thursday. f) _____ comes in between September and November.</p><p>2 Solve the sums : a. $45 + 67$ b. $84 + 39$ c. $29 + 56$</p><p>3 Word Problem a. Suraj has 24 cars and Kapil has 56 cards . How many cars do they both have ? b. Padma has 23 flowers and her mother gave her 58 more. How many flowers does she has ?</p><p>4 Draw the following shapes: a. Cone b. Cuboid c. Cylinder d. Cube</p><p>5 Draw the hands to show the correct time: a) 2:30 b) 10:30</p><p style="text-align: center;">IT Assignment I 1 of 2</p></div> <div data-bbox="300 1267 948 1496"><p>6 Count and write the number of lines in the following shapes.</p><table border="1" data-bbox="375 1317 901 1496"><thead><tr><th>Shape</th><th>Horizontal Lines</th><th>Vertical Lines</th><th>Slanting Lines</th><th>Curved Lines</th></tr></thead><tbody><tr><td></td><td></td><td></td><td></td><td></td></tr></tbody></table></div>	Shape	Horizontal Lines	Vertical Lines	Slanting Lines	Curved Lines					
Shape	Horizontal Lines	Vertical Lines	Slanting Lines	Curved Lines							
											
	<p style="text-align: center;"><u>Hindi</u></p> <p>कविता चीटा का पठन सांरगी पुस्तक से कराया जाएगा ।</p>										