













Day and Date	<u>Concept/Topic/Activity</u>
<p>Friday 22.11.2024</p>	<p style="text-align: center;">English</p> <p>Page number 24-31 of Mridang textbook. Word Bank of the Chapter – The Cap-Seller and Monkeys in the notebook.</p> <div style="text-align: center;">  </div> <p>Practice assignment – Practice page no 59-62 of Mridang textbook</p>
	<p style="text-align: center;">Hindi</p> <p>page number 125,126,127 of Assignment Booklet -1</p> <div style="display: flex; justify-content: space-around; align-items: flex-start;"> <div data-bbox="357 1205 564 1514">  </div> <div data-bbox="596 1205 1023 1536">  </div> <div data-bbox="1086 1205 1458 1527">  </div> </div>

Math

Page number 31,32 of Assignment Booklet -2.







22-11-2024
C.W Pg- 31

Write the correct time underneath each clock. The first one has been done for you.

 2 o'clock	 5 o'clock	 9 o'clock
 11 o'clock	 3 o'clock	 6 o'clock

22-11-2024
C.W Pg 32

Draw the hands on given watch

 4 o'clock	 12 o'clock
 3 o'clock	 7 o'clock
 6 o'clock	 10 o'clock

Practice assignment- Practice Page number 33 of Assignment Booklet -2.