



**ITL PUBLIC SCHOOL
PRE-PERIODIC TEST - 2 (2024-25)**

**Date: 25.11.24
Time: 1hr**

Class: V

MATHEMATICS

SECTION – A

Source based Question

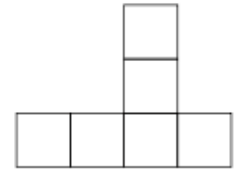
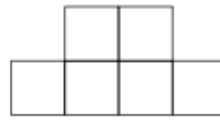
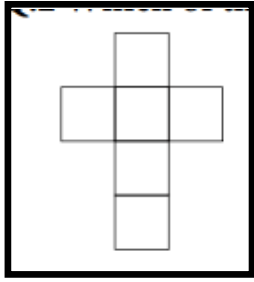
1 Look at the given map and answer the following questions:



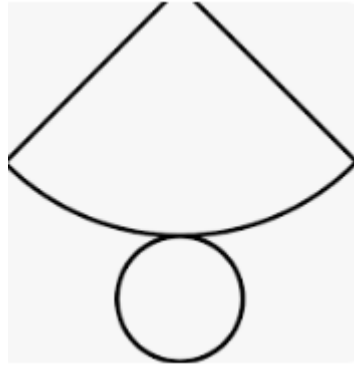
- a) Which state is surrounded by four other states? HARYANA
- b) Which state has largest area? RAJASTHAN
- c) Name 4 Eastern states of India: Odisha, west Bengal, Arunachal Pradesh ,Bihar

d) Name any two Western States: Gujarat , Maharastra

2 a) Which of the following is the net of a cube:



b) Draw the net for the following shape:



or



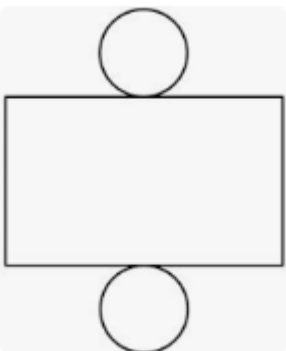
c) Count and write the number of cubes :



20 cubes

SECTION – B

3 Draw a net of a cylinder



4	<p>Write the expanded form for numeral 56.190 in</p> <p>i) Decimal form $50 + 6 + 0.1 + 0.09$</p> <p>ii) Fractional form. $50 + 6 + \frac{1}{10} + \frac{9}{100}$</p>
5	<p>The distance between two places on a map is 9 cm. If 1cm on map = 28 km on ground.</p> <p>Find the actual distance between the two places.</p> <p>As 1 cm = 28 km on ground</p> <p>Distance between two places = $9 \times 28 = 252$ km</p>
SECTION – C	
6	<p>a) Write in figures: two hundred twenty five and three hundred twenty two thousandths.</p> <p>225.322</p> <p>b) If Riya height is 12.67 cm more than her brothers height .Find Riya height if her brothers height is 121.75 cm.</p> <p>Riyas brother height = 121.75 cm</p> <p>Riyas height = $121.75 + 12 . 67$</p> <p>= 134.42 cm (students to show calculations)</p>
7	<p>Compare the following using >, < or =</p> <p>i) $278.109 \underline{>} 278.091$</p> <p>ii) $23.87 \underline{<} 35.9$</p>