



**ITL PUBLIC SCHOOL
PRE-PERIODIC TEST - 2 (2024-25)**

**Date: 25.11.24
Time: 1hr**

Class: V

MATHEMATICS

SECTION – A

Source based Question

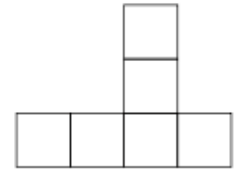
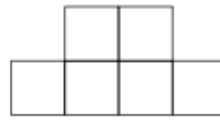
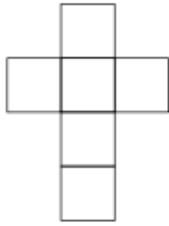
1 Look at the given map and answer the following questions:



- a) Which state is surrounded by four other states?
- b) Which state has largest area?
- c) Name 4 Eastern states of India:

d) Name any two Western states.

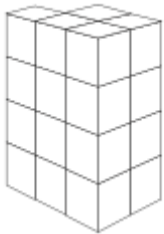
2 a) Which of the following is the net of a cube:



b) Draw the net for the following shape:



c) Count and write the number of cubes :



SECTION – B

3 Draw a net of a cylinder

4 Write the expanded form for numeral 56.190 in

i) Decimal form

ii) Fractional form.

5 The distance between two places on a map is 9 cm. If 1cm on map = 28 km on ground.

Find the actual distance between the two places.

SECTION – C

6 a) Write in figures: two hundred twenty five and three hundred twenty two thousandths.

b) If Riya height is 12.67 cm more than her brothers height .Find Riya height if her brothers height is 121.75 cm.

7 Compare the following using $>$, $<$ or $=$

i) 278.109 ____ 278.091

ii) 23.87 ____ 35.9