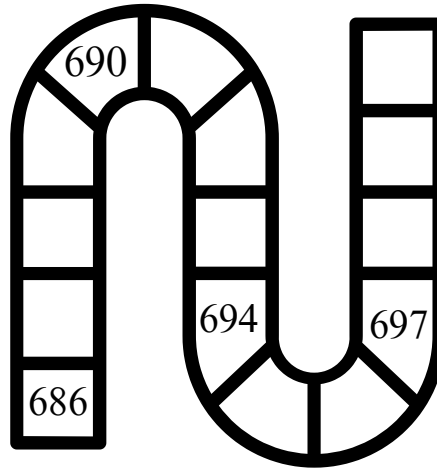




Maths Worksheet- November

NAME: _____ CLASS: I- _____ DATE: _____

Q1. Fill in the missing numbers in sequence.



Q2. Dodging tables.

$2 \times 4 = \underline{\quad}$

$4 \times 8 = \underline{\quad}$

$5 \times 3 = \underline{\quad}$

$4 \times 6 = \underline{\quad}$

$5 \times 8 = \underline{\quad}$

$3 \times 9 = \underline{\quad}$

$4 \times 7 = \underline{\quad}$

$5 \times 9 = \underline{\quad}$

$3 \times 8 = \underline{\quad}$

$4 \times 2 = \underline{\quad}$

Q3. Write the number names.

95

84

88

97













100

93
















96

82

Q4. Write the place value of the following numbers.

	Tens	Ones	
			
			
			

Q5. Write the missing numbers.



Brain International School

Recognised Senior Secondary School, Affiliated to CBSE
Vikas Puri, New Delhi

Maths Worksheet- November

NAME: _____ CLASS: I- _____ DATE: _____

Q1. Add:

$$\begin{array}{r} 15 \\ + 34 \\ \hline \end{array}$$

$$\begin{array}{r} 17 \\ + 12 \\ \hline \end{array}$$

$$\begin{array}{r} 45 \\ + 13 \\ \hline \end{array}$$

$$\begin{array}{r} 54 \\ + 24 \\ \hline \end{array}$$

$$\begin{array}{r} 27 \\ + 30 \\ \hline \end{array}$$

$$\begin{array}{r} 72 \\ + 26 \\ \hline \end{array}$$

$$\begin{array}{r} 35 \\ + 53 \\ \hline \end{array}$$

$$\begin{array}{r} 74 \\ + 21 \\ \hline \end{array}$$

$$\begin{array}{r} 23 \\ + 43 \\ \hline \end{array}$$

$$\begin{array}{r} 22 \\ + 33 \\ \hline \end{array}$$

$$\begin{array}{r} 29 \\ + 10 \\ \hline \end{array}$$

$$\begin{array}{r} 46 \\ + 42 \\ \hline \end{array}$$

$$\begin{array}{r} 91 \\ + 56 \\ \hline \end{array}$$

$$\begin{array}{r} 27 \\ + 40 \\ \hline \end{array}$$

$$\begin{array}{r} 77 \\ + 11 \\ \hline \end{array}$$

Q2. Subtract:

$$\begin{array}{r} 22 \\ - 12 \\ \hline \end{array}$$

$$\begin{array}{r} 37 \\ - 15 \\ \hline \end{array}$$

$$\begin{array}{r} 46 \\ - 33 \\ \hline \end{array}$$

$$\begin{array}{r} 54 \\ - 34 \\ \hline \end{array}$$

$$\begin{array}{r} 67 \\ - 31 \\ \hline \end{array}$$

$$\begin{array}{r} 72 \\ - 40 \\ \hline \end{array}$$

$$\begin{array}{r} 85 \\ - 44 \\ \hline \end{array}$$

$$\begin{array}{r} 74 \\ - 21 \\ \hline \end{array}$$

$$\begin{array}{r} 63 \\ - 42 \\ \hline \end{array}$$

$$\begin{array}{r} 98 \\ - 35 \\ \hline \end{array}$$

$$\begin{array}{r} 29 \\ - 13 \\ \hline \end{array}$$

$$\begin{array}{r} 46 \\ - 31 \\ \hline \end{array}$$

$$\begin{array}{r} 92 \\ - 52 \\ \hline \end{array}$$

$$\begin{array}{r} 87 \\ - 41 \\ \hline \end{array}$$

$$\begin{array}{r} 77 \\ - 63 \\ \hline \end{array}$$

Q3. Story sums.



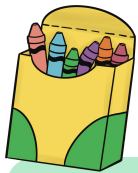
If Tina has 96 gold coins and gives away 43 of them, how many gold coins are left with her?

Blank area for writing the answer to the first story sum.

A tree has 57 apples growing on it. If 22 of them are picked, how many apples are left on the tree?



Blank area for writing the answer to the second story sum.



If there are 82 colour boxes with Ram and 17 colour boxes with Shyam, how many colour boxes are there in total?

Blank area for writing the answer to the third story sum.

There are 65 pencils with Rani and 32 pencils with Sita. How many pencils do both of them have altogether?



Blank area for writing the answer to the fourth story sum.