





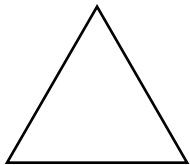
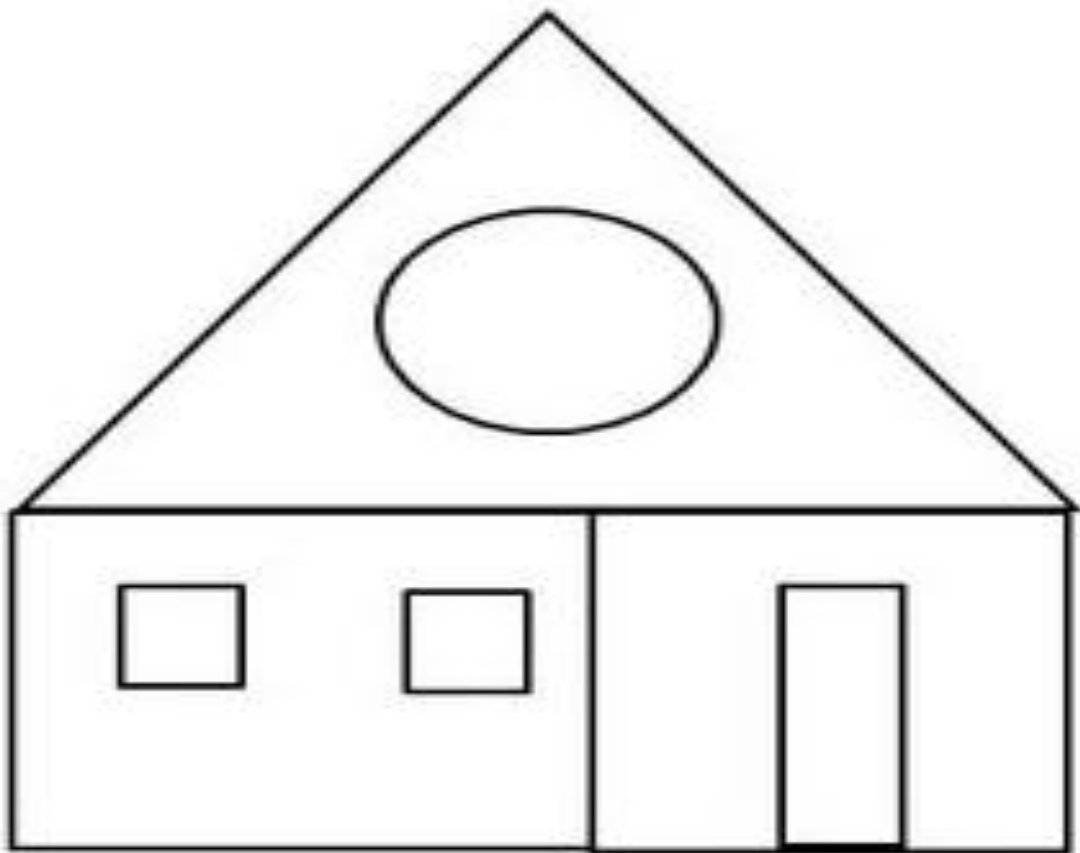
Brain International School

Recognised Senior Secondary School, Affiliated to CBSE
Vikas Puri, New Delhi

FIT WORKSHEET – OCTOBER (2024-2025) TOPIC – REASONING AND CRITICAL THINKING

NAME :- _____ CLASS :- I- _____ DATE :- _____

Q1. Count each shape in the picture and write down their number :-



Q2. Identify the names and properties of the given pictures with the help box :-

Square

Circle

Rectangle


Triangle



This 2D shape is a _____.

It has _____ corners.

It has _____ sides.



This 2D shape is a _____.

It has _____ corners.

It has _____ sides.



This 2D shape is a _____.

It has _____ corners.

It has _____ sides.



This 2D shape is a _____.

It has _____ corners.

It has _____ sides.