



Brain International School

Recognised Senior Secondary School, Affiliated to CBSE
Vikas Puri, New Delhi











MATHS WORKSHEET (SEPTEMBER)

NAME.....




CLASS.....


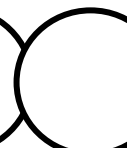

DATE.....


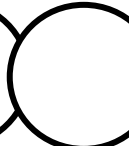

Q 1: Write forward counting:


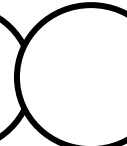

 201		 203		
	 207			 210


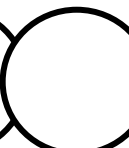

Q 2: Write between numbers:


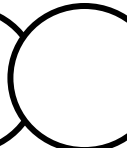

 52		 54
--	---	--

 66		 67
--	---	--

 43		 45
--	---	--

 78		 80
--	---	--

 35		 37
--	---	--

 86		 88
--	---	--

Q 3: Write in Ascending order:

1.

7, 4, 8, 6, 9

2.

6, 4, 9, 8, 2

3.

33, 10, 24, 20, 16

4.

23, 42, 26, 14, 17