



MATHS WORKSHEET (SEPTEMBER)

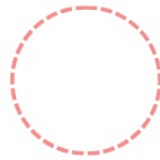

CLASS - NURSERY

NAME-.....

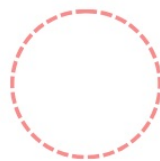


Date-.....

MORE OR LESS?

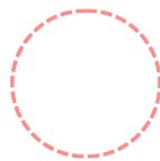


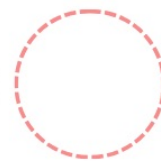
Count the number of fruits then write the correct number on the circle. Compare the two numbers on the circle then choose more or less to complete the sentences.



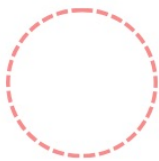


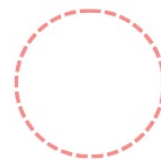
is **more** than
is **less** than



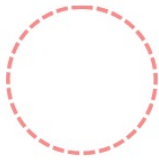


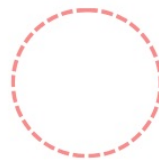
is **more** than
is **less** than



is **more** than
is **less** than



is **more** than
is **less** than



is **more** than
is **less** than

