

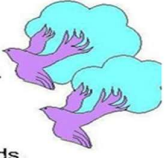





Day and Date	<u>Concept/Topic/Activity</u>
<p>Wednesday 11.09.2024</p>	<p style="text-align: center;">English</p> <p>Q. Complete the sentences using helping verbs(is, am, are)</p> <ol style="list-style-type: none">1. I _____ a student.2. The flower _____ colourful.3. He _____ my brother.4. They _____ my parents.5. We _____ going to watch a movie.6. You _____ my best friend. <p>Practice assignment- Do the given worksheet.</p> <div style="text-align: center;"><p>ITL PUBLIC SCHOOL English (Worksheet (2024-2025)</p><p>Date: _____ Class: II Sec ____ Name: _____ Roll No: _____</p></div> <p>Q Fill in the blanks with <u>is, am or are</u></p> <ol style="list-style-type: none">1. Anil _____ swimming in the pool.2. The school bell _____ ringing 3. I _____ Mitthu.4. Ships _____ sailing in the sea.5. I _____ not a rabbit.6. Birds _____ flying in the sky. 7. We _____ happy.8. Raju and Bobby _____ friends.9. These children _____ playing in the garden.10. The Tiger _____ feeling hungry. 
	<p style="text-align: center;">Hindi कविता-कौन पृष्ठ संख्या 36 व पृष्ठ संख्या 37 सारंगी पुस्तक में कराए जाएँगे ।</p>

Math

Measurement (Length)

Standard units of measuring length are-

- a) Centimetre (cm) – It is used to measure the length of small objects.
- b) Metre (m) - It is used to measure the length of big objects.
- c) kilometre (km)- It is used to measure the length of long distances.

Q1 Write the appropriate unit to measure the length of-

- a) a comb – cm
- b) a bedsheet - m
- c) a spoon – cm
- d) height of a building – m
- e) distance between your home and school –km

Practice assignment- Do page 86 of the Mental Math.