



MATHS WORKSHEET (AUGUST)

CLASS – NURSERY

NAME - _____

DATE - _____

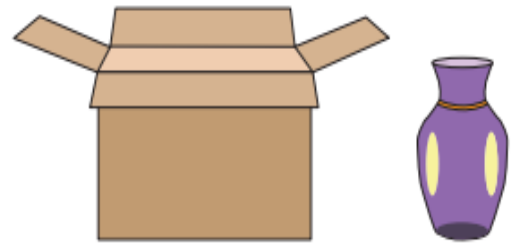
Q1. Tick the option that best describes the position of the object in it

1)



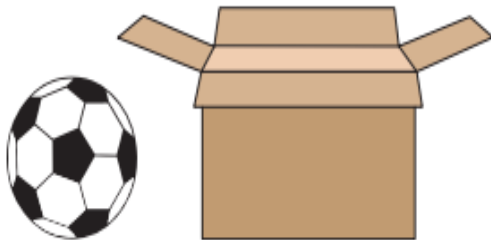
In Out

2)



In Out

3)




In Out

4)



In Out

Q2. Draw a ball in the box and a tree out of the box.






MATHS WORKSHEET (AUGUST)

CLASS – NURSERY


NAME - _____

DATE - _____

Count the number of drinks and circle the number on the right.



7	8	9
---	---	---



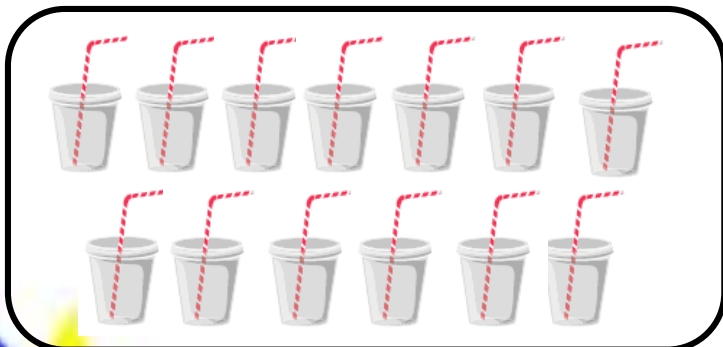
11	10	12
----	----	----



6	11	14
---	----	----



12	10	7
----	----	---



8	13	10
---	----	----