




Brain International School

Recognised Senior Secondary School, Affiliated to CBSE
Vikas Puri, New Delhi

NAME: _____ CLASS: I- _____ DATE: _____

Q1. Skip the numbers by 3.



Q2. Write the following numbers as words.

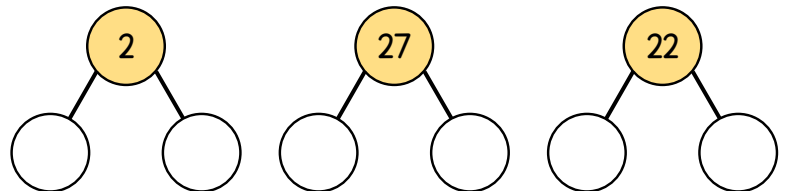
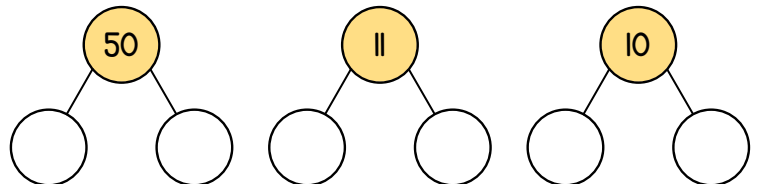
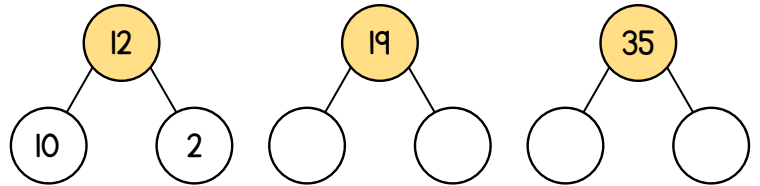
35

48





50

40

Q3. Break the number into ones and tens.



Q4. Before, after and between.



Q5. Greater than, smaller than or equal to.



$48 \bigcirc 38$

$13 \bigcirc 34$

$34 \bigcirc 34$

$35 \bigcirc 23$


$25 \bigcirc 46$

$22 \bigcirc 24$


$40 \bigcirc 04$


$25 \bigcirc 25$


$26 \bigcirc 16$




Q6. Arrange in ascending order.









Q7. Arrange in descending order.









Brain International School
Maths Worksheet- August

NAME: _____ CLASS: I- _____ DATE: _____

Q1. Add.

$$\begin{array}{r} 44 \\ + 12 \\ \hline \end{array}$$

$$\begin{array}{r} 50 \\ + 32 \\ \hline \end{array}$$

$$\begin{array}{r} 29 \\ + 10 \\ \hline \end{array}$$



$$\begin{array}{r} 35 \\ + 24 \\ \hline \end{array}$$

$$\begin{array}{r} 47 \\ + 21 \\ \hline \end{array}$$

$$\begin{array}{r} 48 \\ + 11 \\ \hline \end{array}$$

$$\begin{array}{r} 49 \\ + 0 \\ \hline \end{array}$$

$$\begin{array}{r} 36 \\ + 21 \\ \hline \end{array}$$


$$\begin{array}{r} 50 \\ + 31 \\ \hline \end{array}$$

Q2. Subtract.

$$\begin{array}{r} 29 \\ - 13 \\ \hline \end{array}$$

$$\begin{array}{r} 42 \\ - 22 \\ \hline \end{array}$$

$$\begin{array}{r} 31 \\ - 0 \\ \hline \end{array}$$



$$\begin{array}{r} 45 \\ - 43 \\ \hline \end{array}$$

$$\begin{array}{r} 20 \\ - 20 \\ \hline \end{array}$$

$$\begin{array}{r} 46 \\ - 23 \\ \hline \end{array}$$

$$\begin{array}{r} 48 \\ - 33 \\ \hline \end{array}$$

$$\begin{array}{r} 41 \\ - 40 \\ \hline \end{array}$$

$$\begin{array}{r} 27 \\ - 15 \\ \hline \end{array}$$

Q3. Story sums.

▲ Cassy has 23 red ribbons and 14 green ribbons. How many ribbons does she have in all?

	Tens	Ones

★ There are 35 bugs on a leaf. 10 more joined them. How many bugs are there altogether?

	Tens	Ones

■ Cassy has 44 ribbons. She gives 23 away. How many ribbons does she have left?

	Tens	Ones

★ There are 76 bugs on a leaf. 35 bugs fly away. How many bugs are left?

	Tens	Ones

Q4. Backward counting 50-1.

Help Triho to reach spacecraft by counting backwards.