

DATE :
NAME :

Class: III Sec: _____
ROLL NO :

1 Look at the abacus and answer the questions given below:-

a) Write the number name.

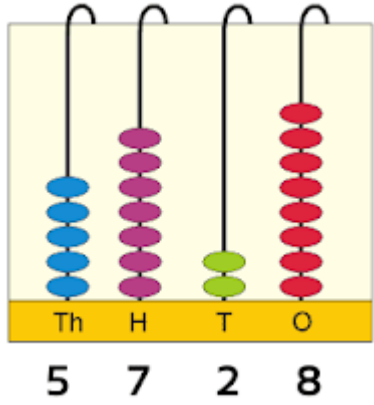
b) Write the predecessor of the given number.
 Predecessor - _____

c) Write the successor of the given number
 Successor - _____

d) Form the smallest and greatest 4 digit number using digits 5,7,2,8 only once.

Smallest - _____

Greatest - _____





2 a) Write the numeral for:

i) Century - _____

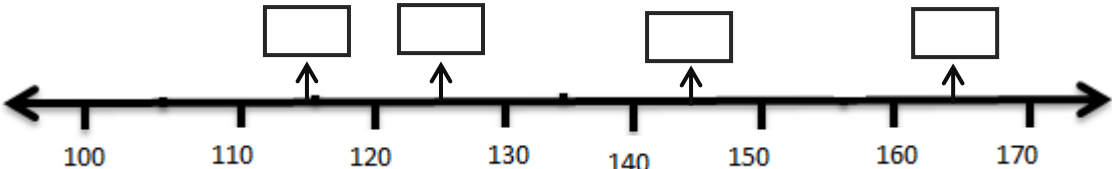
ii) Half century - _____

iii) Double Century - _____

b) Write any two numbers in the stars to make a 100


 +
 
 = **100**

c) Fill in the empty boxes.



d) In T-20 match Yuvraj scored 95 runs, how many more runs will he need to complete a century ?

He needs _____ runs more

3	<p>a) Answer in one word</p> <p>i) Name the shape of a brick - _____</p> <p>ii) Name the shape with no edges - _____</p> <p>iii) Name the shape with only one curved surface - _____</p> <p>iv) If one side of a dice is 5 what number should be on its opposite side - _____</p> <p>b) Write the whether the number is even or odd</p> <p>i) 8021 - _____</p> <p>ii) 4566 - _____</p>
4	<p>a) Write the expanded form of 9764 - _____</p> <p>b) Write Eight thousand two hundred ten in figures - _____</p> <p>c) Write the face value and place value of 7 in the number 4 6 <u>7</u> 9</p> <p>Face Value - _____</p> <p>Place Value - _____</p> <p>d) Form the smallest and greatest 4 digit number using digits 8, 5, 2, 9 only once.</p> <p>Smallest - _____</p> <p>Greatest - _____</p>
5	<p>a) Draw a cube in the space provided and label it.</p> <div data-bbox="245 1319 1219 1771" style="border: 2px solid black; height: 200px; width: 600px; margin: 10px auto;"></div> <p>b) Fill in the boxes:</p> <p>i) Number of faces in a cube _____</p> <p>ii) Number of edges in a cube _____</p> <p>iii) Give two examples of cube _____ , _____</p>