



BRAIN INTERNATIONAL SCHOOL

EVS WORKSHEET

CLASS-IV

JULY 2024

NAME: _____ **CLASS:** _____ **SEC:** _____ **DATE:** _____

Ch.5 OUR CLOTHES

Q.1. Fill in the blanks.

- a) _____ was first made by man in the year 1938.
- b) Mahatma Gandhi promoted _____ as the symbol of freedom in India.
- c) Soft and delicate clothes should be _____.
- d) Once washed, white clothes should be soaked in _____ and dried in the sun.

Q.2. Choose the correct option.

- a) The process of making fabric includes
- (i) spinning (ii) weaving (iii) finishing (iv) all of these
- b) Early man wore clothes made of
- (i) animal skin (ii) leaves (iii) bark of trees (iv) all of these
- c) We get cotton from cotton plants.
- (i) True (ii) False

Q.3. Identify the things used to keep clothes safe and write their names.





Q.4. Answer the following questions.

a) Differentiate between warp and weft.

Warp	Weft

b) Write any two ways of taking care of clothes.

c) Name any two natural fibres.

Q.5. Read the following carefully and answer the following.

Different types of clothes are worn in different seasons. Clothes protect us from harsh weather, germs and dust. We wear cotton clothes in summer season and woollen clothes in winter season. Clothes are made of different kinds of fabrics. Some fibres are natural and some are man-made. Natural fibres are eco – friendly and are soft. and Man-made fibres last longer.

a) Why are cotton clothes worn in summer season?

b) _____ is a man-made fibre.

Q.6. Assertion and Reasoning based question:

Assertion : Woollen clothes keep us warm in the winter season.

Reason: Woollen clothes trap the heat inside our body.

A

Only A is correct.

B

Only B is correct.



C

Both A and R are correct and R is the correct explanation for A.

D

Both A and R are correct but R is not the correct explanation for A.

Q.7. These types of clothes are worn when it is very hot and humid. Write the name of the season and draw and colour any two clothes worn in that season.





BRAIN INTERNATIONAL SCHOOL

EVS WORKSHEET

CLASS-IV

JULY 2024

NAME: _____ **CLASS:** _____ **SEC:** _____ **DATE:** _____

Ch.8 CARING AND SHARING

Q.1. Name the following.

- a) This property that belongs to an individual. _____
- b) These monuments are a part of our cultural heritage. _____

Q.2. Choose the correct option.

a) We should take care of public parks by

- (i) Not plucking the flowers.
- (ii) By not littering the parks.
- (iii) By putting wrappers in the dustbins.
- (iv) all of these

b) Public property belongs to

- (i) all (ii) one person (iii) a family (iv) a community

c) We should take care of our school property.

- (i) True (ii) False.

Q.3. Answer the following questions.

a) We should take care of public property. How?.

b) Mention any two ways of taking care of our historical monuments.

Q.4. Read the following carefully and answer the following.

Atul and his friends were travelling in a bus. They saw some boys tearing the seat covers and Scribbling on the seats. Atul went and requested those boys not to destroy it as it belongs to everyone. He also told them that our government collects taxes and uses the funds for the maintenance of public transport.

a) Why do we pay taxes?

b) It is our duty to maintain public property.

(i) True (ii) False

Q.5. Assertion and Reasoning based question:

Assertion : We must not litter, tear or break the public transport.

Reason: it is a public property and belongs to all of us.

A

Only A is correct.

B

Only B is correct.

C

Both A and R are correct and R is the correct explanation for A.

D

Both A and R are correct but R is not the correct explanation for A.



BRAIN INTERNATIONAL SCHOOL

EVS WORKSHEET

CLASS-IV

JULY 2024

NAME: _____ **CLASS:** _____ **SEC:** _____ **DATE:** _____

Ch.3 FOOD WE EAT

Q.1. Choose the correct option.

a) The raw materials or things needed to make a food item are called

- (i) flavour (ii) taste (iii) ingredients (iv) none of these

b) The useful substances present in the food are called

- (i) nutrients (ii) calories (iii) raw food (iv) all of these

c) Milk is called a complete food.

- (i) True (ii) False

d) Sprouting and fermentation increase the

- (i) quantity of food.
(ii) nutritive quality of food.
(iii) taste of food
(iv) none of the above.

Q.2. Identify the technique of cooking food and write its name.





Q.3. Answer the following questions.

a) What is the role of proteins in our diet?

b) Briefly explain any two ways of food preservation.

c) "Cooking of food is important". Why?

Q.4. Write 'T' for True and 'F' for False statement.

a) Overcooking of food is harmful. _____

b) Some vegetables should be eaten raw. _____

c) Food exposed to dust and flies may cause diseases. _____

Q.5. Read the following carefully and answer the following.

Carbohydrates and Fats provides us energy. We should not eat excess of fats like potatoes, chips, ghee or butter as it may lead to obesity. We should always follow good food habits to stay healthy.

a) How do some people become obese?

b) _____ helps in smooth bowel movement.

- (i) Nutrients (ii) Roughage (iii) Balanced diet (iv) All of these

Q.6. Assertion and Reasoning based question:

Assertion : Dehydration is one of the ways of food preservation.

Reason : In this method, the food items are dried in the sun to remove water and stop the growth of germs in them.

A

Only A is correct.

B

Only B is correct.

C

Both A and R are correct and R is the correct explanation for A.

D

Both A and R are correct but R is not the correct explanation for A.



BRAIN INTERNATIONAL SCHOOL

EVS WORKSHEET

CLASS-IV

JULY 2024

NAME: _____ **CLASS:** _____ **SEC:** _____ **DATE:** _____

Ch. 18 PLANT LIFE

Q.1. Choose the correct option.

a) The aerial part that lies above the ground that grows upwards is called

- (i) root (ii) shoot (iii) stem (iv) none of these

b) The flat part of a leaf is called the

- (i) stomata (ii) lamina (iii) veins (iv) none of these

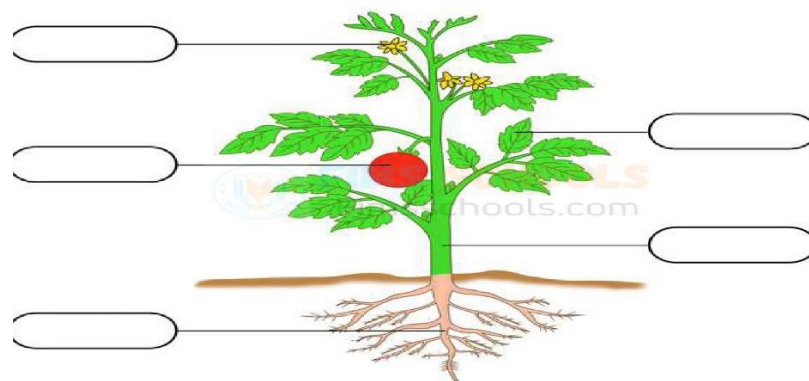
c) The climbers stay upright with the help of some support.

- (i) True (ii) False

d) Flowers grow into

- (i) stem
(ii) branch
(iii) fruits
(iv) none of these

Q.2. Identify and label the different parts of the plant.



Q.3. Answer the following questions.

a) What are the functions of roots?

b) How do you use flowers in your house? Write any two ways.

Q.4. Give one word answer.

a) Thick, strong and woody stem of a big tree _____

b) The most beautiful and colourful part of a plant _____

c) Saffron or kesar is obtained from _____

Q.5. Read the following carefully and answer the following.

Aman went to a nearby park in the evening. He saw different types of plants with different types of leaves. Some leaves were green, yellow or brown in colour. He also observed some beautiful flowers like rose, lily, sunflower etc.

a) Name the green colour pigment present in leaves.

b) _____ plays an important role in the reproduction of flowers.

- (i) **Pollination** (ii) **Nutrients** (iii) **Seeds** (iv) **None of these**

Q.6. Assertion and Reasoning based question:

Assertion : Roots fix the plants firmly to the ground.

Reason : Roots spread out in the soil and hold the plant tightly.

A

Only A is correct.

B

Only B is correct.

C

Both A and R are correct and R is the correct explanation for A.

D

Both A and R are correct but R is not the correct explanation for A.