



Brain International School

Recognised Senior Secondary School, Affiliated to CBSE
Vikas Puri, New Delhi

Maths Worksheet- July (2024-2025)

Name- _____

Class- I- _____

Date- _____

Q1. Write the tens and ones value of the given numbers.

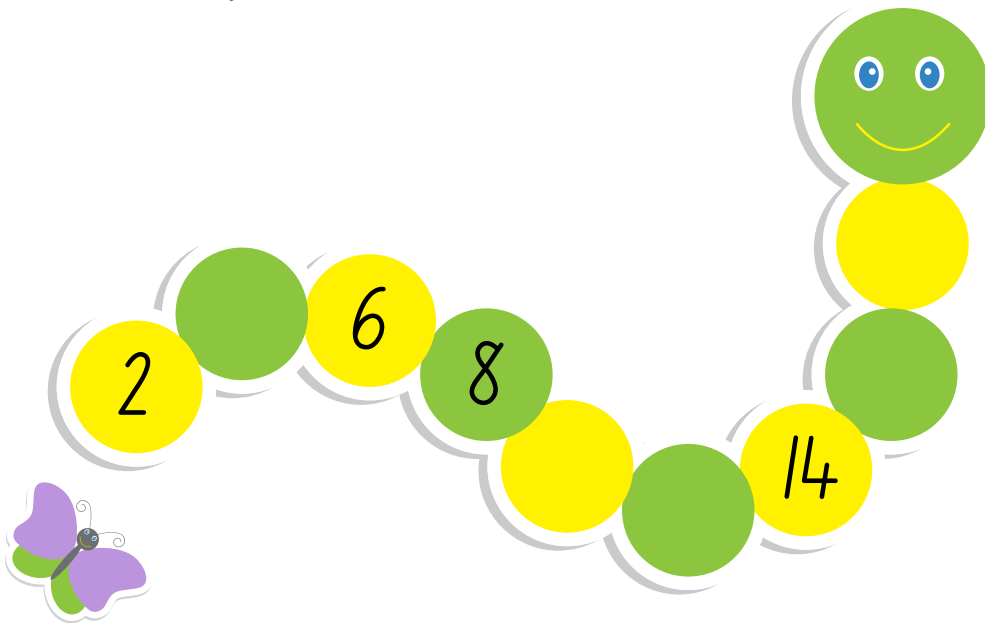


Tens

Ones



Q2. Skip the numbers by 2's.



Q3. Write the number names.

12

17






20

25

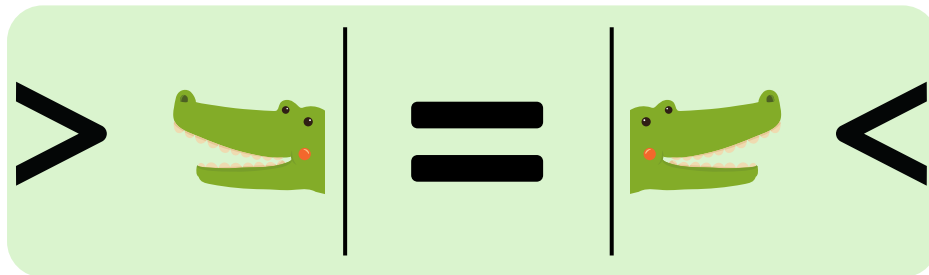
29

30

Q4. Fill in the blanks the missing numbers.



Q5. Put the correct sign $>$, $<$ or $=$.



$40 \bigcirc 45$

$34 \bigcirc 34$

$15 \bigcirc 23$

$28 \bigcirc 42$

$05 \bigcirc 50$

$24 \bigcirc 24$

Q6. Dodging tables.

$2 \times 3 = \square$

$1 \times 2 = \square$

$2 \times 4 = \square$

$2 \times 6 = \square$

$2 \times 10 = \square$

$2 \times 7 = \square$



Brain International School

Recognised Senior Secondary School, Affiliated to CBSE
Vikas Puri, New Delhi





Maths Worksheet- July (2024-2025)





Name- _____





Class- I- _____

Date- _____

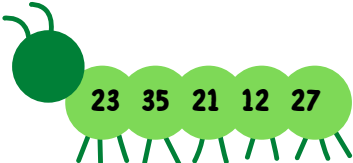
Q1. Arrange in ascending order.

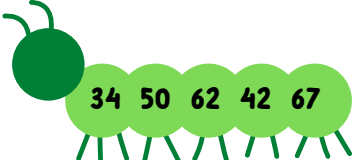
44	50	43	34
			
<input type="text"/>	<input type="text"/>	<input type="text"/>	<input type="text"/>

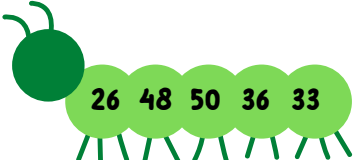
14	29	18	39
			
<input type="text"/>	<input type="text"/>	<input type="text"/>	<input type="text"/>

50	49	29	39
			
<input type="text"/>	<input type="text"/>	<input type="text"/>	<input type="text"/>





Q2. Arrange in descending order.

 23 35 21 12 27	<input type="text"/>	<input type="text"/>	<input type="text"/>	<input type="text"/>	<input type="text"/>
---	----------------------	----------------------	----------------------	----------------------	----------------------





 34 50 62 42 67	<input type="text"/>	<input type="text"/>	<input type="text"/>	<input type="text"/>	<input type="text"/>
---	----------------------	----------------------	----------------------	----------------------	----------------------

 26 48 50 36 33	<input type="text"/>	<input type="text"/>	<input type="text"/>	<input type="text"/>	<input type="text"/>
---	----------------------	----------------------	----------------------	----------------------	----------------------

Q3. Fill in the missing numbers.

	 25	 24	 ...	 ...
---	--	--	---	--

	 30	 ...	 ...	 27
---	--	---	---	---

	 17	 16	 ...	 ...
---	--	--	---	--

Q4. Solve the following sums.

$$\begin{array}{r} 16 \\ +13 \\ \hline \square \end{array}$$

$$\begin{array}{r} 22 \\ +34 \\ \hline \square \end{array}$$

$$\begin{array}{r} 26 \\ +4 \\ \hline \square \end{array}$$

$$\begin{array}{r} 2 \\ +2 \\ \hline \square \end{array}$$

$$\begin{array}{r} 5 \\ -1 \\ \hline \square \end{array}$$

$$\begin{array}{r} 18 \\ -12 \\ \hline \square \end{array}$$

$$\begin{array}{r} 7 \\ -2 \\ \hline \square \end{array}$$

$$\begin{array}{r} 47 \\ +10 \\ \hline \square \end{array}$$

$$\begin{array}{r} 32 \\ +27 \\ \hline \square \end{array}$$

$$\begin{array}{r} 5 \\ +3 \\ \hline \square \end{array}$$

$$\begin{array}{r} 10 \\ +9 \\ \hline \square \end{array}$$


$$\begin{array}{r} 19 \\ -10 \\ \hline \square \end{array}$$

$$\begin{array}{r} 45 \\ -31 \\ \hline \square \end{array}$$

$$\begin{array}{r} 29 \\ -20 \\ \hline \square \end{array}$$


Q5. Story sums.

There are five ducks playing around the pond, and two more ducks join them. How many ducks are there now?




_____ = _____

There are three horses in the stable, and one more horse comes to join them. How many horses are in the stable now?



_____ = _____

There are three pigs in the barn and two pigs left. How many pigs are there now?



_____ = _____